

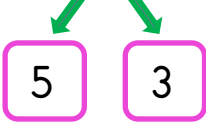


ZİHİNDEN ÇIKARMA İŞLEMİ 1



- Aşağıda verilen çıkarma işlemlerini örnekte kullanılan yöntemle göre zihinden yapınız.

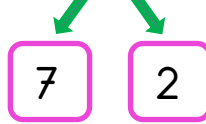
$15 - 8 =$



$15 - 5 = 10$

$10 - 3 = 7$

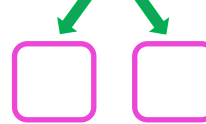
$17 - 9 =$



$17 - 7 = 10$

$10 - 2 = 8$

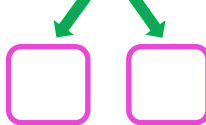
$15 - 6 =$



$\square - \square = \square$

$\square - \square = \square$

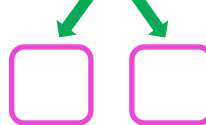
$13 - 7 =$



$\square - \square = \square$

$\square - \square = \square$

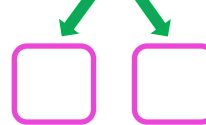
$18 - 9 =$



$\square - \square = \square$

$\square - \square = \square$

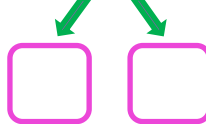
$14 - 5 =$



$\square - \square = \square$

$\square - \square = \square$

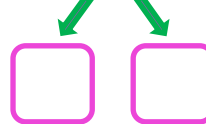
$12 - 4 =$



$\square - \square = \square$

$\square - \square = \square$

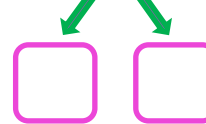
$20 - 13 =$



$\square - \square = \square$

$\square - \square = \square$

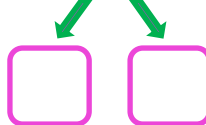
$14 - 8 =$



$\square - \square = \square$

$\square - \square = \square$

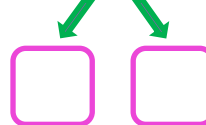
$16 - 9 =$



$\square - \square = \square$

$\square - \square = \square$

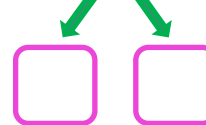
$14 - 6 =$



$\square - \square = \square$

$\square - \square = \square$

$15 - 9 =$



$\square - \square = \square$

$\square - \square = \square$



ZİHİNDEN ÇIKARMA İŞLEMİ 2



- Aşağıda verilen çıkarma işlemlerini örnekte kullanılan yöntemle göre zihinden yapınız.

$16 - 4 = ?$

$$\begin{array}{c} 10 + 6 - 4 \\ \swarrow \quad \searrow \\ 10 + 2 = 12 \end{array}$$

$18 - 5 = ?$

$$\begin{array}{c} 10 + 8 - 5 \\ \swarrow \quad \searrow \\ 10 + 3 = 13 \end{array}$$

$17 - 6 = ?$

$$\begin{array}{c} \square + \square - \square \\ \swarrow \quad \searrow \\ \square + \square = \square \end{array}$$

$15 - 4 = ?$

$$\begin{array}{c} \square + \square - \square \\ \swarrow \quad \searrow \\ \square + \square = \square \end{array}$$

$19 - 6 = ?$

$$\begin{array}{c} \square + \square - \square \\ \swarrow \quad \searrow \\ \square + \square = \square \end{array}$$

$20 - 7 = ?$

$$\begin{array}{c} \square + \square - \square \\ \swarrow \quad \searrow \\ \square + \square = \square \end{array}$$

$17 - 5 = ?$

$$\begin{array}{c} \square + \square - \square \\ \swarrow \quad \searrow \\ \square + \square = \square \end{array}$$

$18 - 6 = ?$

$$\begin{array}{c} \square + \square - \square \\ \swarrow \quad \searrow \\ \square + \square = \square \end{array}$$

$19 - 4 = ?$

$$\begin{array}{c} \square + \square - \square \\ \swarrow \quad \searrow \\ \square + \square = \square \end{array}$$

$16 - 5 = ?$

$$\begin{array}{c} \square + \square - \square \\ \swarrow \quad \searrow \\ \square + \square = \square \end{array}$$

$20 - 9 = ?$

$$\begin{array}{c} \square + \square - \square \\ \swarrow \quad \searrow \\ \square + \square = \square \end{array}$$

$15 - 3 = ?$

$$\begin{array}{c} \square + \square - \square \\ \swarrow \quad \searrow \\ \square + \square = \square \end{array}$$