

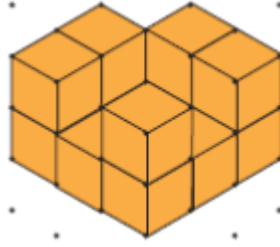


Konu : Modellere Uygun Yapılar Oluşturma Etkinliği 1

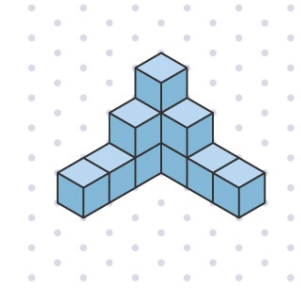
Aşağıda izometrik kağıtta verilen yapıların kaç birim küpten oluştuğunu yazalım.



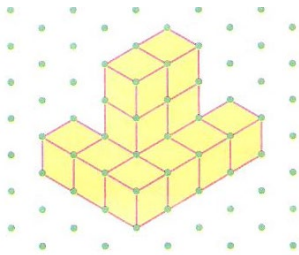
..... birim küp



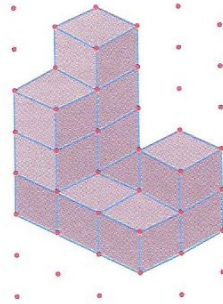
..... birim küp



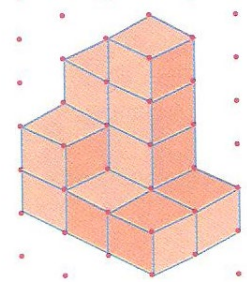
..... birim küp



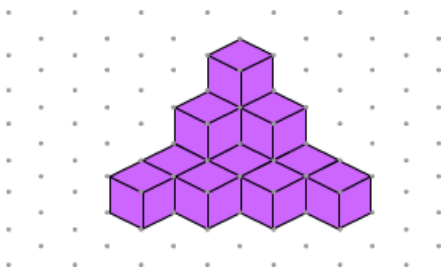
..... birim küp



..... birim küp



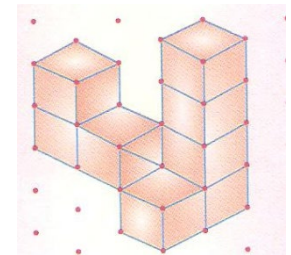
..... birim küp



..... birim küp

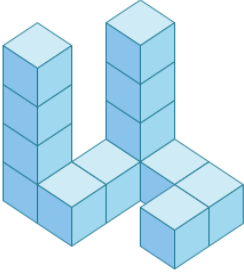


..... birim küp

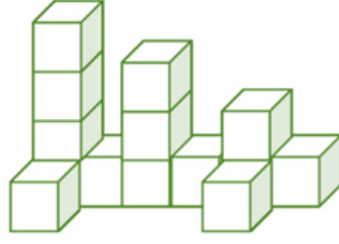


..... birim küp

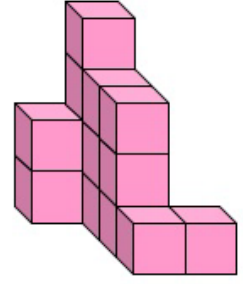
Aşağıda verilen yapılar kaç birim küpten oluşmuştur.



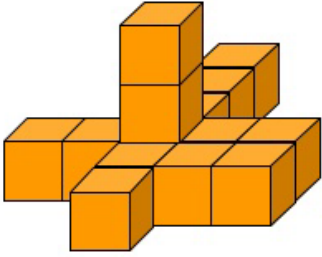
..... birim küp



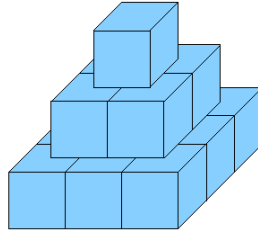
..... birim küp



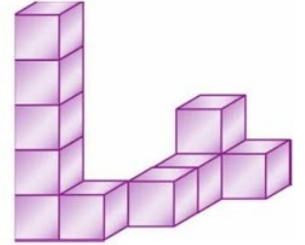
..... birim küp



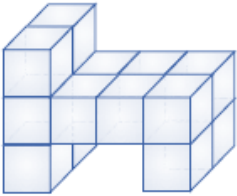
..... birim küp



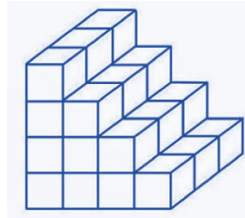
..... birim küp



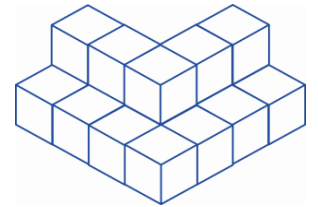
..... birim küp




..... birim küp



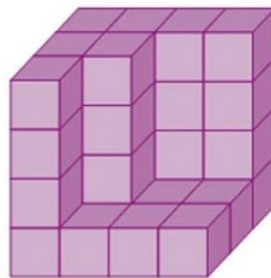
..... birim küp



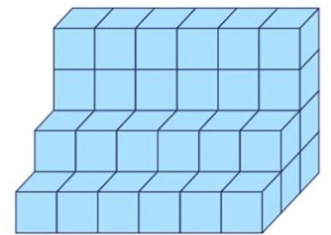
..... birim küp



..... birim küp

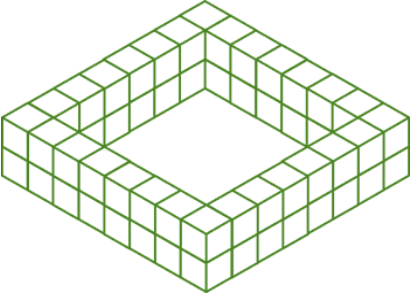


..... birim küp

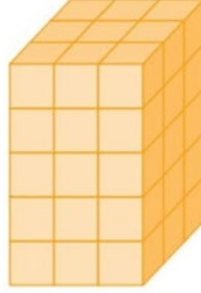


..... birim küp


Aşağıda verilen yapılar kaç birim küpten oluşmuştur.



..... birim küp



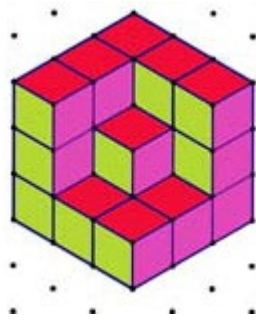
..... birim küp




..... birim küp



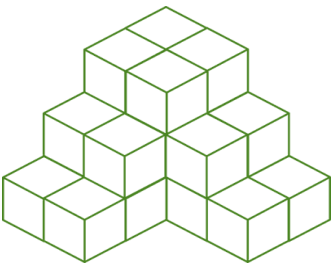
..... birim küp



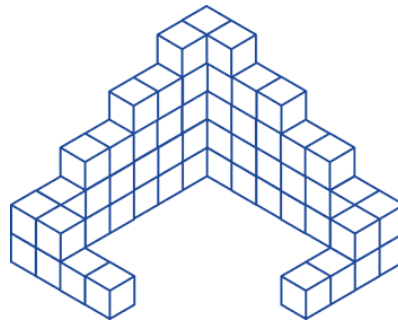
..... birim küp




..... birim küp



..... birim küp



..... birim küp



..... birim küp