




Adı Soyadı : .....

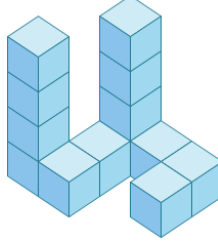
Numarası : .....

Konu: Modellere Uygun Yapılar Oluşturma Etkinliği 3


Aşağıda verilen yapılar kaç birim küpten oluşmuştur.




..... birim küp



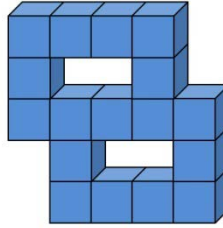
..... birim küp




..... birim küp



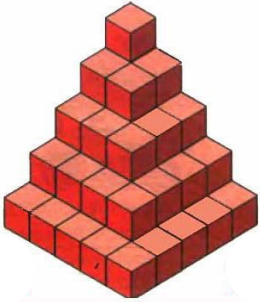
..... birim küp




..... birim küp



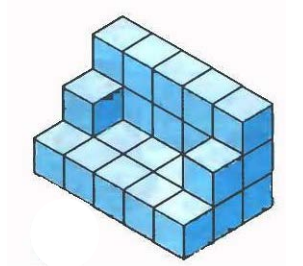
..... birim küp



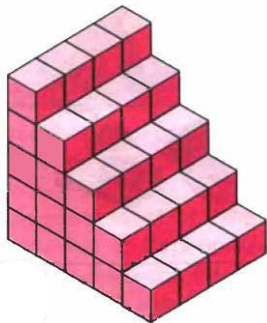
..... birim küp




..... birim küp



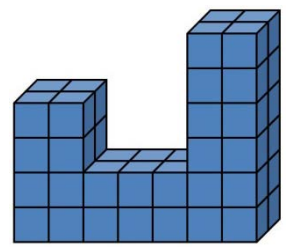
..... birim küp



..... birim küp

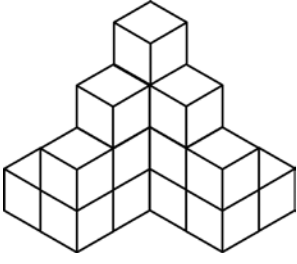


..... birim küp

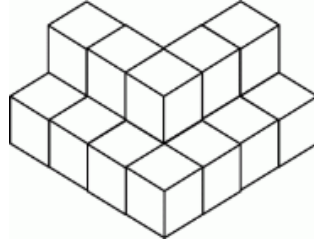


..... birim küp

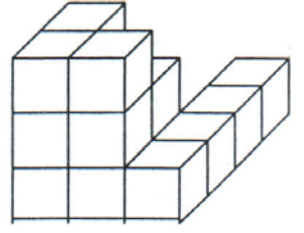
Aşağıda verilen yapılar kaç birim küpten oluştuğunu bularak boyayınız.



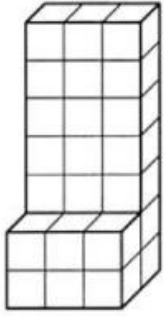
..... birim küp



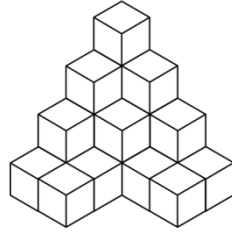
..... birim küp



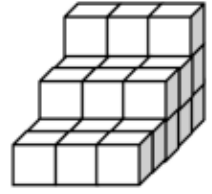
..... birim küp



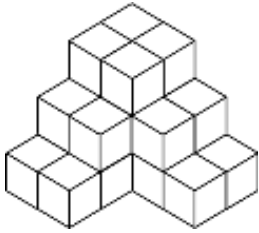
..... birim küp



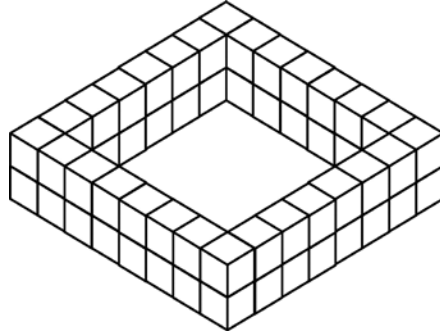
..... birim küp



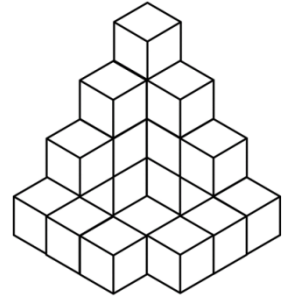
..... birim küp



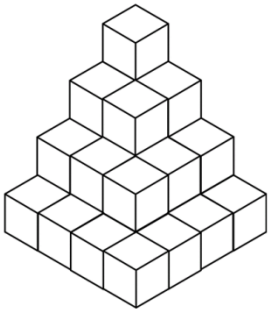
..... birim küp



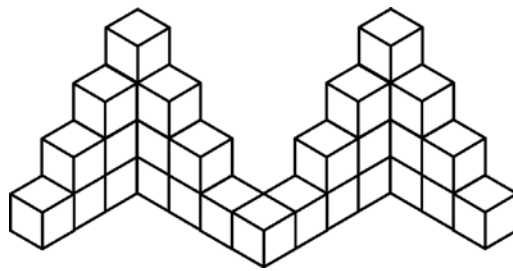
..... birim küp



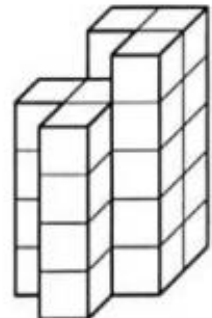
..... birim küp



..... birim küp



..... birim küp



..... birim küp