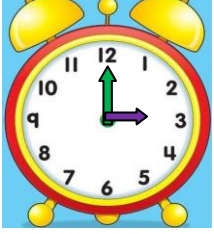




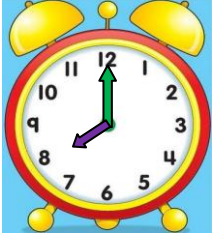
TAM VE YARIM SAATLERİN OKUNUŞU 1



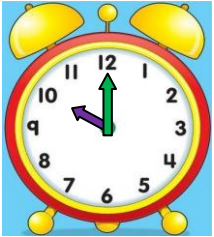
- Aşağıda verilen tam saatlerin gösterdiği saatlerin okunuşlarını yazınız.



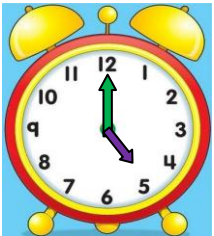
Okunuşu:



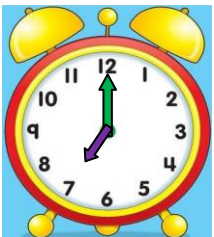
Okunuşu:



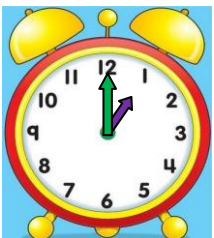
Okunuşu:



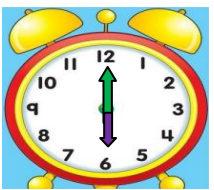
Okunuşu:



Okunuşu:

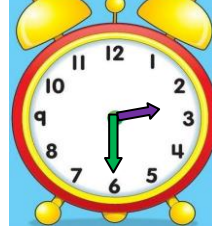


Okunuşu:




Okunuşu:

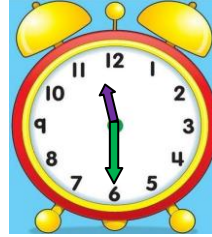
- Aşağıda verilen yarım saatlerin gösterdiği saatlerin okunuşlarını yazınız.



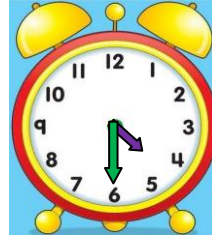
Okunuşu:



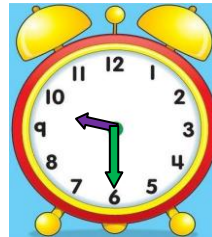
Okunuşu:



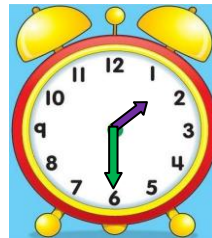
Okunuşu:



Okunuşu:



Okunuşu:



Okunuşu:



Okunuşu:


TAM VE YARIM SAATLERİN OKUNUŞU VE GÖSTERİLİŞİ 2

- Aşağıda verilen saatleri **akrep** ve **yelkovan** kullanarak saat modelinde çiziniz. Saatlerin okunuşunu yazınız.



03.00

Okunuşu:




11.30

Okunuşu:



07.00

Okunuşu:



08.30

Okunuşu:



12.00

Okunuşu:



01.30

Okunuşu:



07.30

Okunuşu:

- Aşağıda verilen saatleri **akrep** ve **yelkovan** kullanarak saat modelinde çiziniz. Saatlerin okunuşunu yazınız.




12.30

Okunuşu:




09.00

Okunuşu:




03.30

Okunuşu:




06.00

Okunuşu:




10.30

Okunuşu:



08.30

Okunuşu:



06.30

Okunuşu: