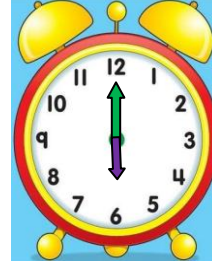
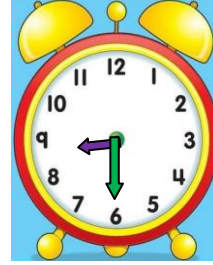
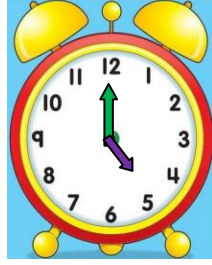
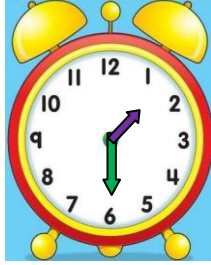
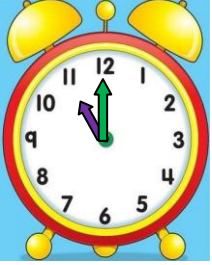


## TAM - YARIM SAATLERİN OKUNUŞU VE GÖSTERİLİŞİ 3

- Aşağıda okunuşları verilen ifadeleri uygun saat modelleriyle eşleştiriniz.



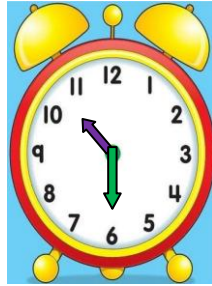
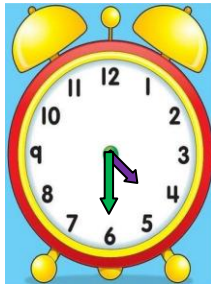
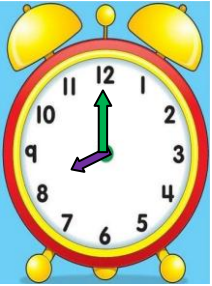
Saat altı

Saat sekiz  
buçuk

Saat on  
bir

Saat bir  
buçuk

Saat beş



Saat üç

Saat on  
buçuk





Saat sekiz

Saat dört  
buçuk

Saat on iki

İskender 07 (İlkokul etkinlikleri)

- Aşağıda verilen tam ve yarım saatleri akrep ve yelkovan kullanarak çiziniz.



SAAT  
DÖRT

SAAT ALTI  
BUÇUK

SAAT  
ON

SAAT İKİ  
BUÇUK

SAAT  
DOKUZ

İskender 07 (İlkokul etkinlikleri) - www.mebders.com


## TAM YARIM SAATLERİN OKUNUŞU VE GÖSTERİLİŞİ 4

- Aşağıda verilen saatleri **akrep** ve **yelkovan** kullanarak saat modelinde çiziniz. Saatlerin okunuşunu yazınız.




04.00

Okunuşu:




09.30

Okunuşu:



12.00

Okunuşu:




06.00

Okunuşu:



08.30

Okunuşu:



12.00

Okunuşu:



10.00

Okunuşu:

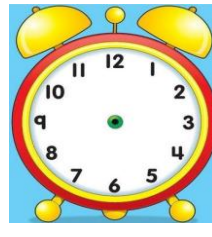
İskender07 (İlkokul etkinlikleri)

- Aşağıda verilen saatleri **akrep** ve **yelkovan** kullanarak saat modelinde çiziniz. Saatlerin okunuşunu yazınız.



11.30

Okunuşu:




07.30

Okunuşu:




01.00

Okunuşu:




02.30

Okunuşu:



11.00

Okunuşu:



03.00

Okunuşu:



05.30

Okunuşu:

www.mebders.com