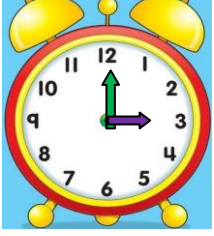


TAM - YARIM - ÇEYREK SAATLERİN OKUNUŞU 1

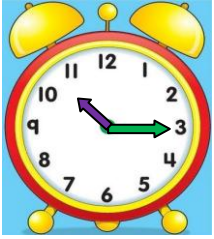
- Aşağıda verilen saatlerin kaç gösterdiklerinin okunuşlarını yazınız.



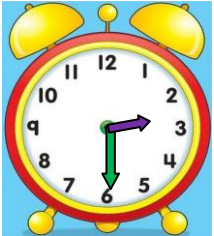
Okunuşu:



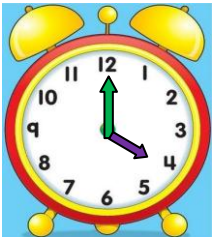
Okunuşu:



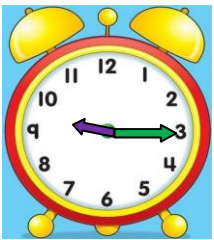
Okunuşu:



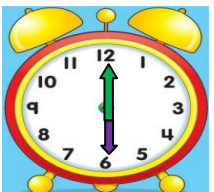
Okunuşu:



Okunuşu:

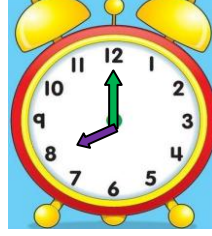


Okunuşu:

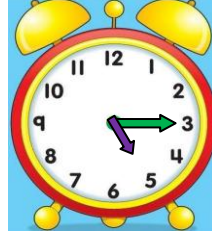


Okunuşu:

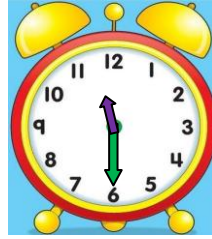
- Aşağıda verilen saatlerin kaç gösterdiklerinin okunuşlarını yazınız.



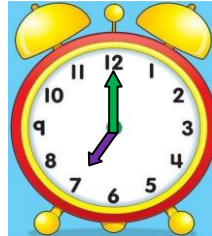
Okunuşu:




Okunuşu:



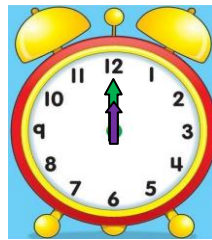
Okunuşu:



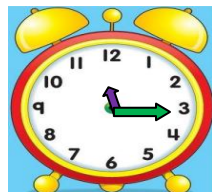
Okunuşu:



Okunuşu:



Okunuşu:



Okunuşu:


TAM YARIM ÇEYREK SAATLERİN OKUNUŞU VE GÖSTERİLİŞİ 2

- Aşağıda verilen saatleri **akrep** ve **yelkovan** kullanarak saat modelinde çiziniz. Saatlerin okunuşunu yazınız.




03.00

Okunuşu:



10.30

Okunuşu:



07.15

Okunuşu:



09.15

Okunuşu:




08.30

Okunuşu:



12.00

Okunuşu:



06.45


Okunuşu:

- Aşağıda verilen saatleri **akrep** ve **yelkovan** kullanarak saat modelinde çiziniz. Saatlerin okunuşunu yazınız.




11.45

Okunuşu:




01.30

Okunuşu:




04.15

Okunuşu:




05.30

Okunuşu:




09.45

Okunuşu:



11.15

Okunuşu:



12.30

Okunuşu: