




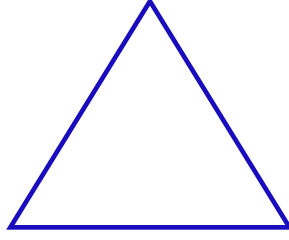
GEOMETRİK ŞEKİLLER




Aşağıdaki verilen geometrik şekillerin köşegenlerini çizin. Köşegen sayılarını yazalım.



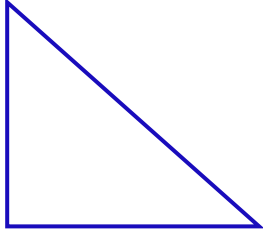
Köşegen sayısı:



Köşegen sayısı:




Köşegen sayısı:



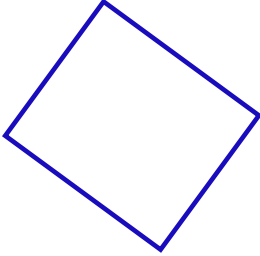
Köşegen sayısı:




Köşegen sayısı:



Köşegen sayısı:



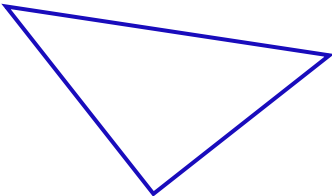
Köşegen sayısı:



Köşegen sayısı:




Köşegen sayısı:



Köşegen sayısı:



Köşegen sayısı:



Köşegen sayısı: