


## UZUNLUKLARI ÖLÇME

1. Etkinlik: Aşağıdaki uzunlukları inceleyip soruları cevaplayalım.



\* Yeşil boya kaç santimetredir?

☞ .....

\* En kısa boya hangisidir? Kaç cm'dir ?

☞ .....

\* En uzun boya hangisidir? Kaç cm'dir?

☞ .....

\* Kırmızı boya pembe boyadan kaç cm uzundur?

☞ .....

\* Mavi boya yeşil boyadan kaç cm kısadır?

☞ .....

\* Kırmızı boya mavi boyadan kaç cm uzundur?


☞ .....

\* Yeşil , mavi ve pembe boyalar toplam kaç cm'dir ?


☞ .....

2. Etkinlik: Verilen şekilde belirtilen uzunluk kadarını ölçelim ve boyayalım.


◇ 6 cm




◇ 2 cm




◇ 10 cm




◇ 3 cm



◇ 12 cm



◇ 5 cm



◇ 7 cm

