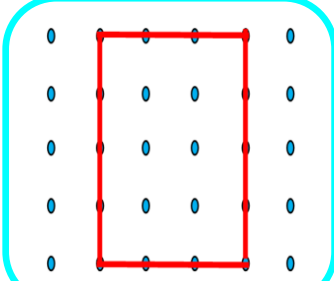




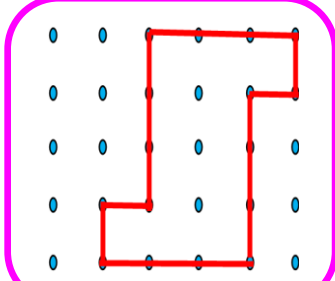
ÇEVRE UZUNLUKLARI



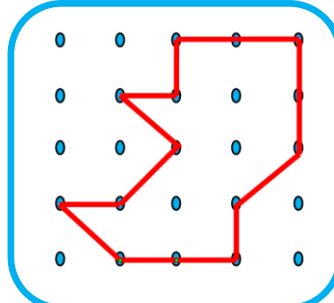
- Aşağıda verilen şekillerin çevrelerinin kaç birim olduğunu yazınız.
(iki nokta arası 1 birimdir)



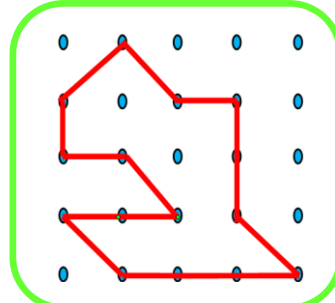
Çevre = birim



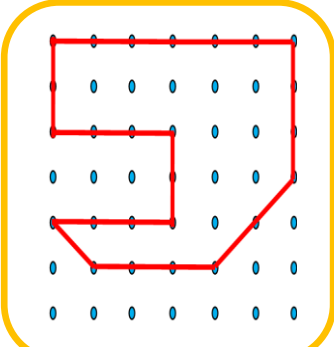
Çevre = birim



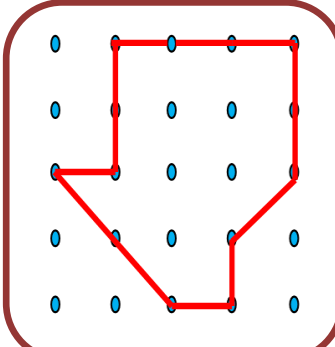
Çevre = birim



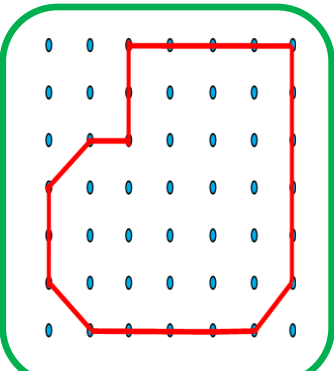
Çevre = birim



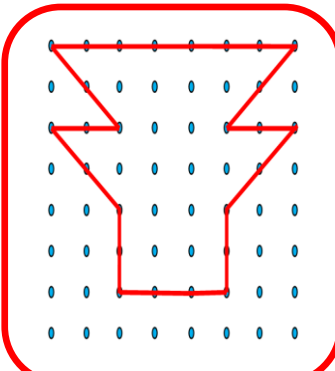
Çevre = birim



Çevre = birim

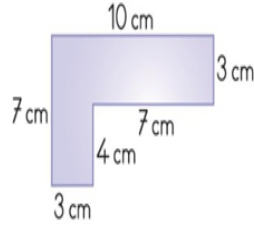


Çevre = birim

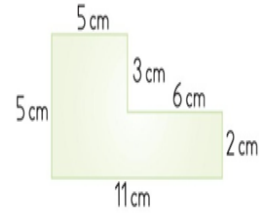


Çevre = birim

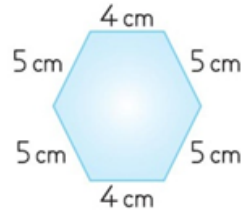
- Aşağıda verilen düzlemsel şekillerin çevre uzunluklarını hesaplayınız.



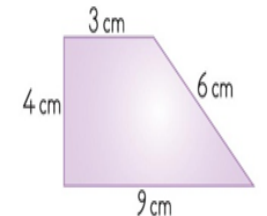
Çevre = cm



Çevre = 10 birim




Çevre = 16 birim




Çevre = 18 birim


- Aşağıdaki noktaların arası bir birimdir. Kutuların içine verilen çevre uzunluğu birimi kadar kapalı şekiller çiziniz.




Çevre = 18 birim



Çevre = 22 birim



Çevre = 30 birim



Çevre = 36 birim