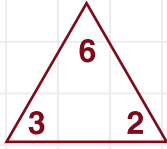


Aşağıdaki çarpma işlemi ve bölme işlemi arasındaki ilişkiyi örnekteki gibi bulup yazalım.

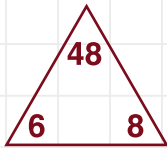


$$\square \times \square = \square$$

$$\square \times \square = \square$$

$$\square \div \square = \square$$

$$\square \div \square = \square$$

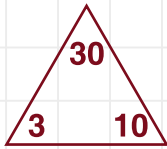


$$\square \times \square = \square$$

$$\square \times \square = \square$$

$$\square \div \square = \square$$

$$\square \div \square = \square$$

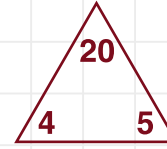


$$\square \times \square = \square$$

$$\square \times \square = \square$$

$$\square \div \square = \square$$

$$\square \div \square = \square$$

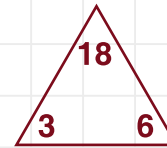


$$\square \times \square = \square$$

$$\square \times \square = \square$$

$$\square \div \square = \square$$

$$\square \div \square = \square$$

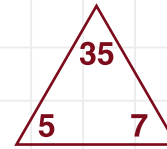


$$\square \times \square = \square$$

$$\square \times \square = \square$$

$$\square \div \square = \square$$

$$\square \div \square = \square$$



$$\square \times \square = \square$$

$$\square \times \square = \square$$

$$\square \div \square = \square$$

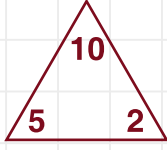
$$\square \div \square = \square$$



ilkokuletinlik



Aşağıdaki çarpma işlemi ve bölme işlemi arasındaki ilişkiyi örnekteki gibi bulup yazalım.

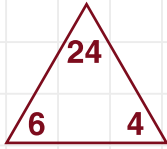


$$5 \times 2 = 10$$

$$2 \times 5 = 10$$

$$10 \div 2 = 5$$

$$10 \div 5 = 2$$



$$\square \times \square = \square$$

$$\square \times \square = \square$$

$$\square \div \square = \square$$

$$\square \div \square = \square$$

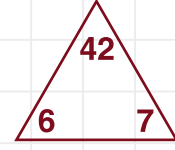


$$\square \times \square = \square$$

$$\square \times \square = \square$$

$$\square \div \square = \square$$

$$\square \div \square = \square$$

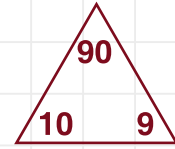


$$\square \times \square = \square$$

$$\square \times \square = \square$$

$$\square \div \square = \square$$

$$\square \div \square = \square$$

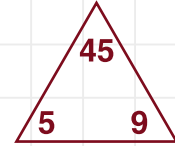


$$\square \times \square = \square$$

$$\square \times \square = \square$$

$$\square \div \square = \square$$

$$\square \div \square = \square$$



$$\square \times \square = \square$$

$$\square \times \square = \square$$

$$\square \div \square = \square$$

$$\square \div \square = \square$$



ilkokuletinlik

