

Adı Soyadı : Sınıfı : No :

★ Aşağıdaki tabloya 20'ye kadar olan Romen sayılarını yazalım.

| | | | | | | | | | |
|----|----|----|----|----|----|----|----|----|----|
| 1 | 2 | 3 | 4 | 5 | 6 | 7 | 8 | 9 | 10 |
| I | | | | V | | | | | X |
| 11 | 12 | 13 | 14 | 15 | 16 | 17 | 18 | 19 | 20 |
| | | | | | | | | | |

★ Aşağıdaki Romen sayılarının karşılıklarını örnekteki gibi yazalım.

| | | | | | | | |
|-----|---|-----|--|------|--|----|--|
| II | 2 | IV | | VII | | IX | |
| VII | | XV | | V | | XV | |
| XII | | XVI | | VIII | | XI | |
| XIX | | XIV | | XIII | | XX | |

★ Aşağıdaki sayıların Romen sayıları ile karşılıklarını örnekteki gibi yazalım.

| | | | | | | | |
|----|----|----|--|----|--|----|--|
| 4 | IV | 1 | | 7 | | 5 | |
| 3 | | 9 | | 12 | | 2 | |
| 14 | | 8 | | 10 | | 16 | |
| 6 | | 13 | | 17 | | 20 | |



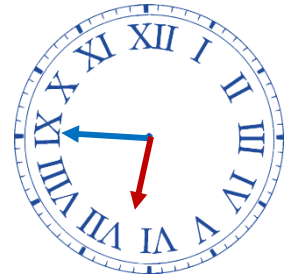
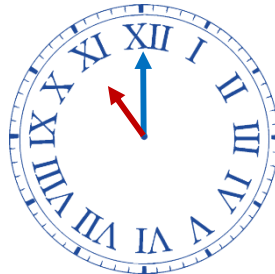
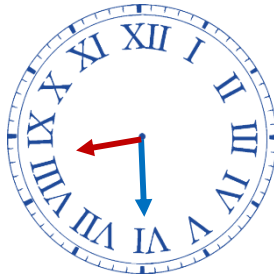
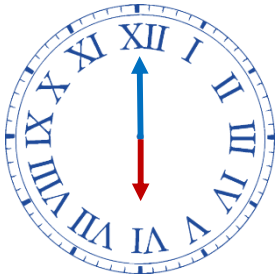
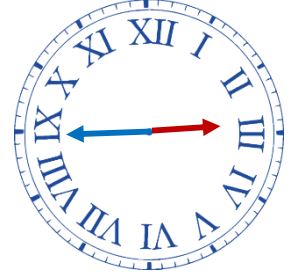
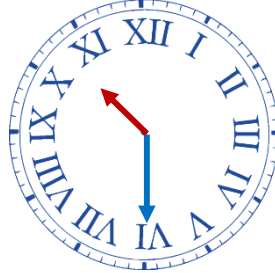
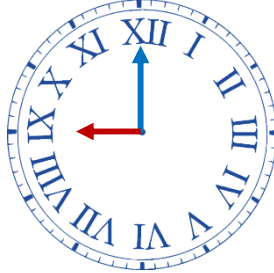
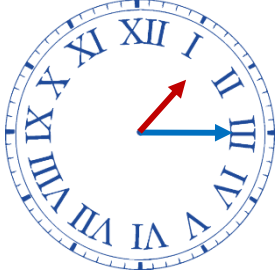
3. SINIF MATEMATİK Romen Rakamları-2



Adı Soyadı : Sınıfı : No :



Aşağıdaki saatlerin kaç olduklarını altlarına yazalım.



Aşağıdaki toplama ve çıkarma işlemlerinin sonuçlarını Romen sayıları ile yazalım.

$V + III =$

$X - VI =$

$XI + IX =$

$XII - XI =$

$XV - VI =$

$X + IV =$

$V - II =$

$VIII + V =$

$XIV - V =$

$XI + VIII =$

$XVI - VIII =$

$XIX - X =$

$X + IX =$

$XIX - XIII =$

$XI + IV =$

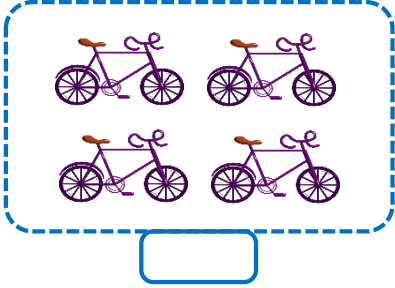
$X + X =$


$XVIII - IX =$

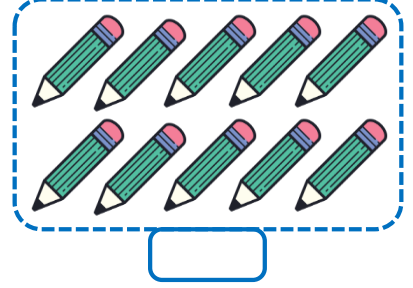
$XX - XIX =$


Adı Soyadı : Sınıfı : No :


★ Aşağıdaki nesnelere sayarak sayılarını Romen sayıları ile yazalım.

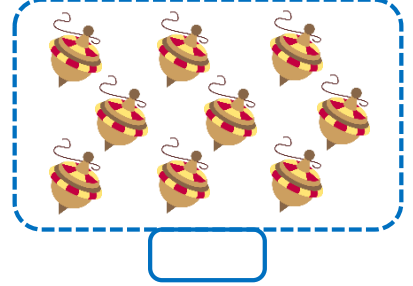


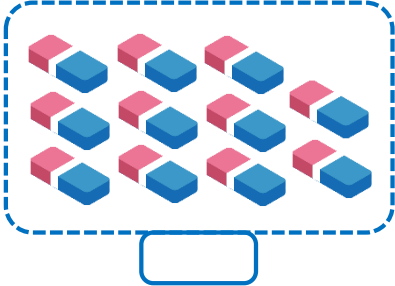





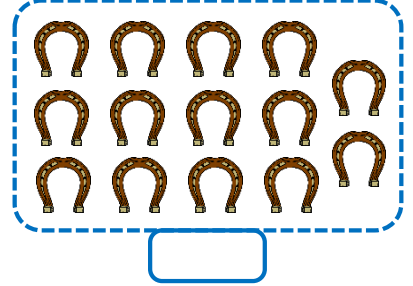












★ Aşağıdaki bulmacada Romen sayılarını sırası ile takip ederek ayıyı inine ulaştıralım.

| | | | | | | | | | | | |
|----|-----|----|-----|------|-----|------|-------|-----|-------|-------|------|
| | | | IV | III | XX | III | VI | VII | XVIII | XIX | XX |
| | | | II | III | XI | XII | XX | XVI | XVII | XVIII | XVI |
| | | | I | II | V | XIII | XIV | XV | XX | XIX | XIII |
| II | I | XI | III | IX | XI | XII | IX | XVI | XIX | XX | XX |
| V | II | VI | XX | XV | X | IX | XX | XV | | | |
| IV | III | VI | XV | VIII | IX | XVI | XVIII | XIX | | | |
| X | IV | V | VI | VII | VII | IIV | XV | XX | | | |