



NESNE SAYISINI TAHMİN EDELİM

Aşağıdaki nesnelerin sayılarını tahmin edip yazınız. Daha sonra nesnelere sayınız. Bulduğunuz sayıyı gerçek sayı bölümüne yazınız.




Tahminim :
Gerçek sayı :




Tahminim :
Gerçek sayı :




Tahminim :
Gerçek sayı :




Tahminim :
Gerçek sayı :




Tahminim :
Gerçek sayı :



Tahminim :
Gerçek sayı :



Tahminim :
Gerçek sayı :




Tahminim :
Gerçek sayı :



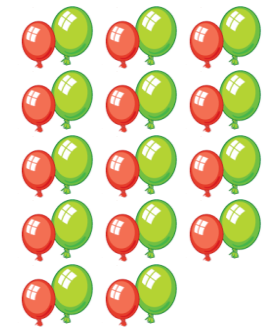
Tahminim :
Gerçek sayı :



Tahminim :
Gerçek sayı :




Tahminim :
Gerçek sayı :




Tahminim :
Gerçek sayı :




Tahminim :
Gerçek sayı :




Tahminim :
Gerçek sayı :



Tahminim :
Gerçek sayı :




Tahminim :
Gerçek sayı :



Tahminim :
Gerçek sayı :



Tahminim :
Gerçek sayı :



Tahminim :
Gerçek sayı :



Tahminim :
Gerçek sayı :