

DOĞAL SAYILARDA EN YAKIN ONLUĞA YUVARLAMA

Aşağıdaki sayılar hangi onluk arasında olduklarını verilen boşluklara yazınız.

$$\square \leftarrow 25 \rightarrow \square$$

$$\square \leftarrow 47 \rightarrow \square$$

$$\square \leftarrow 42 \rightarrow \square$$

$$\square \leftarrow 82 \rightarrow \square$$

$$\square \leftarrow 18 \rightarrow \square$$

$$\square \leftarrow 76 \rightarrow \square$$

$$\square \leftarrow 64 \rightarrow \square$$

$$\square \leftarrow 91 \rightarrow \square$$

$$\square \leftarrow 36 \rightarrow \square$$

$$\square \leftarrow 29 \rightarrow \square$$

$$\square \leftarrow 72 \rightarrow \square$$

$$\square \leftarrow 62 \rightarrow \square$$

$$\square \leftarrow 59 \rightarrow \square$$

$$\square \leftarrow 18 \rightarrow \square$$

Aşağıda verilen doğal sayıları yakın oldukları onlukları ile eşleştiriniz.

42

84

15

53

24

94

10

20

30

40

50

60

70

80

90

64

75

73

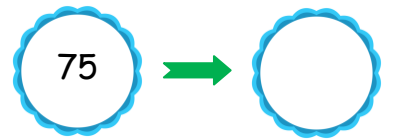
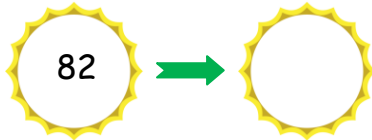
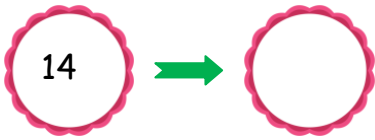
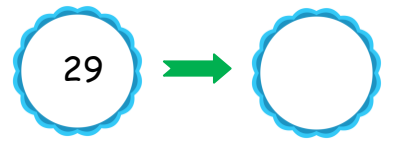
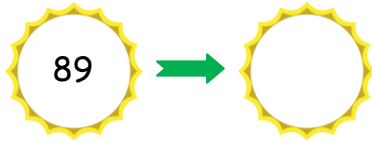
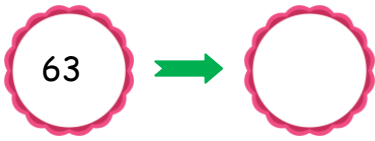
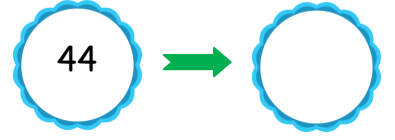
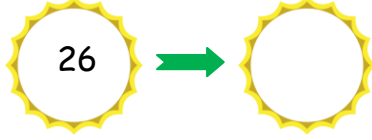
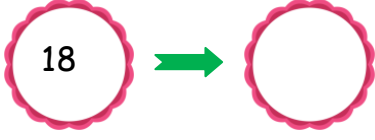
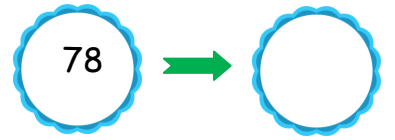
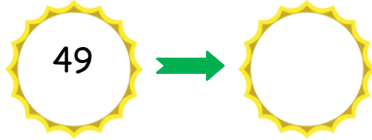
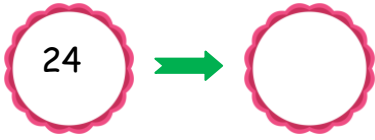
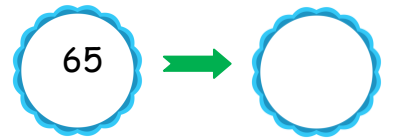
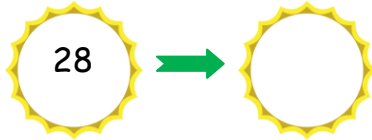
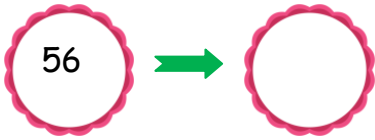
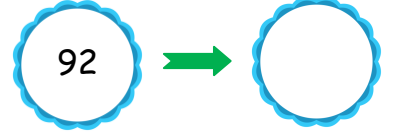
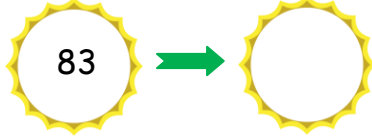
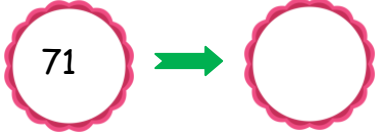
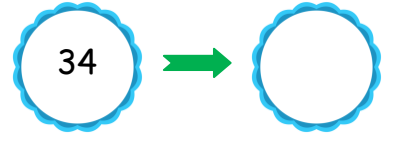
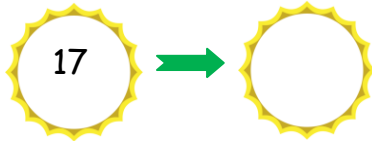
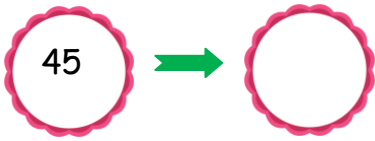
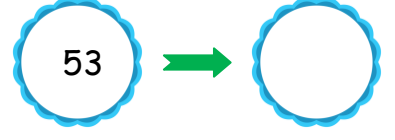
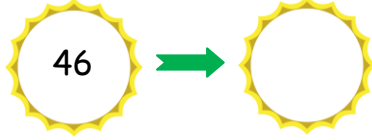
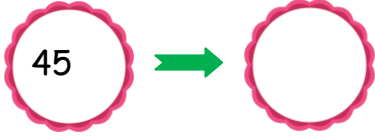
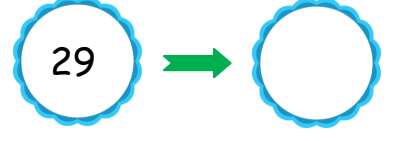
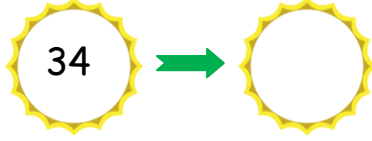
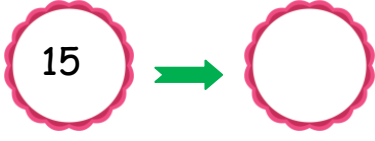
59

38

14

DOĞAL SAYILARDA EN YAKIN ONLUĞA YUVARLAMA

Aşağıdaki verilen sayıların en yakın onluklarını yazınız.



DOĞAL SAYILARDA EN YAKIN ONLUĞA YUVARLAMA

Aşağıda verilen soruları cevaplayınız.

★ En yakın onluğa yuvarlandığında 30 olan sayıları sayınız.

					30				
--	--	--	--	--	----	--	--	--	--

★ En yakın onluğa yuvarlandığında 50 olan sayıları sayınız.

					50				
--	--	--	--	--	----	--	--	--	--

★ En yakın onluğa yuvarlandığında 40 olan sayıları sayınız.

					40				
--	--	--	--	--	----	--	--	--	--

★ En yakın onluğa yuvarlandığında 70 olan sayıları sayınız.

					70				
--	--	--	--	--	----	--	--	--	--

Aşağıda verilen elmaların üzerindeki sayıları en yakın onluğa 60 olanları kırmızı boyayınız.

58	66	49	61	59	54	65	39
63	56	52	67	69	75	62	72



Doğal Sayılarda Onluğa Yuvarlama



Onluğa yuvarlama yapılırken sayının birler basamağına bakılır. Eğer sayının birler basamağındaki rakam 1-2-3-4 ise bir önceki onluğa yani kendi onluğuna yuvarlanır. Sayının birler basamağındaki rakam 5-6-7-8-9 ise sayı bir sonraki onluğa yuvarlanır.

Örnek: 23 → 20 67 → 70

Aşağıda ortada verilen sayıların yuvarlandığı en yakın onluğu mavi renge boyayınız.

10	← 18 →	20
60	← 66 →	70
30	← 31 →	40
40	← 49 →	50
80	← 84 →	90
80	← 88 →	90
40	← 44 →	50
70	← 75 →	80
30	← 34 →	40
20	← 29 →	30
80	← 89 →	90

Aşağıda verilen sayıları en yakın onluğa yuvarlayınız.

46 →	□	18 →	□
38 →	□	65 →	□
71 →	□	21 →	□
23 →	□	78 →	□
47 →	□	89 →	□
92 →	□	56 →	□
44 →	□	19 →	□

Aşağıdaki örnekteki gibi en yakın onluğa yuvarlandığında ortadaki sayıyı oluşturan sayılar yazınız.

56 →	60	← 64
□ →	30	← □
□ →	80	← □
□ →	20	← □
□ →	70	← □
□ →	40	← □