

Adı : .....  
Soyadı: .....

4. Sınıf  
Matematik

Toplama İşlemi  
Zihinden Toplama-2

Verilen toplama işlemi tablolarını doldurunuz.

+	200	600	500	900
100				
300				
400				
800				

+	300	500	700	800
100				
200				
400				
600				

+	300	600	800	900
1000				
2000				
3000				
4000				

+	500	100	400	200
5000				
6000				
7000				
8000				

+	250	380	490	570
100				
300				
500				
800				

+	750	880	390	140
1000				
5000				
4000				
9000				

+	150	650	750	250
550				
250				
350				
450				

+	570	880	740	120
1500				
2500				
3500				
5500				

Adı : .....  
Soyadı: .....

4. Sınıf  
Matematik

Toplama İşlemi  
Zihinden Toplama-2

Tabloya göre yandaki işlemleri yapınız.

+	200	400	600
300	A	D	G
500	B	E	K
700	C	F	M

$A + C = \dots\dots$

$B + D = \dots\dots$

$K + M = \dots\dots$

$G + E = \dots\dots$

$F + D + E = \dots\dots$

$K + L + A = \dots\dots$

$C + M + D = \dots\dots$

$B + F + K = \dots\dots$

$E + M + A = \dots\dots$

+	200	300	400
1000	K	N	S
3000	L	P	T
6000	M	R	Y

$K + L = \dots\dots$

$S + T = \dots\dots$

$M + R = \dots\dots$

$N + P = \dots\dots$










$P + T + M = \dots\dots$

$T + Y + R = \dots\dots$

$M + L + K = \dots\dots$

$L + N + T = \dots\dots$

$S + P + M = \dots\dots$

+	1200	2400	3500
2000			
4000			
7000			

$\text{red square} + 1200 = \dots\dots$





$\text{blue triangle} + 1100 = \dots\dots$

$\text{green circle} + 1500 = \dots\dots$

$\text{yellow arrow} + \text{pink star} + 1300 = \dots\dots$

$\text{red sun} + \text{purple circle with slash} + 2200 = \dots\dots$

$\text{black crescent moon} + \text{green quarter circle} + 3100 = \dots\dots$

+	1350	2450
3000		
5000		

$\text{television} + 2500 = \dots\dots$

$\text{washing machine} + 1100 = \dots\dots$

$\text{bicycle} + 1500 = \dots\dots$

$\text{sofa} + 3100 = \dots\dots$