



Adı Soyadı :

Numarası :

Çalışma Kağıdı 3

Konu: Eldeli Toplama İşlemleri

Kazanım 1: Toplamları 100'e kadar olan doğal sayılarla eldesiz ve eldeli toplama işlemini yapar.

$$\begin{array}{r} 44 \\ + 20 \\ \hline \end{array}$$

$$\begin{array}{r} 52 \\ + 35 \\ \hline \end{array}$$

$$\begin{array}{r} 34 \\ + 47 \\ \hline \end{array}$$

$$\begin{array}{r} 30 \\ + 45 \\ \hline \end{array}$$

$$\begin{array}{r} 36 \\ + 48 \\ \hline \end{array}$$

$$\begin{array}{r} 41 \\ 24 \\ + 10 \\ \hline \end{array}$$

$$\begin{array}{r} 25 \\ 26 \\ + 18 \\ \hline \end{array}$$

$$\begin{array}{r} 65 \\ 20 \\ + 9 \\ \hline \end{array}$$

$$\begin{array}{r} 25 \\ 16 \\ + 33 \\ \hline \end{array}$$

$$\begin{array}{r} 44 \\ 14 \\ + 7 \\ \hline \end{array}$$

$$46 + 30 =$$

$$73 + 8 =$$

$$54 + 39 =$$

$$23 + 14 + 5 =$$

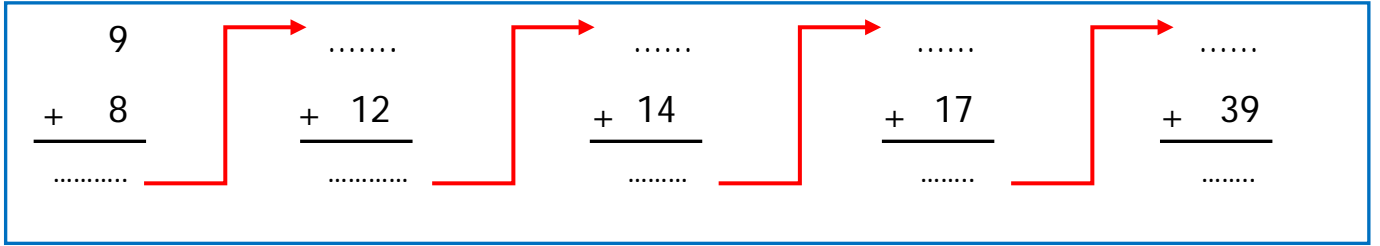
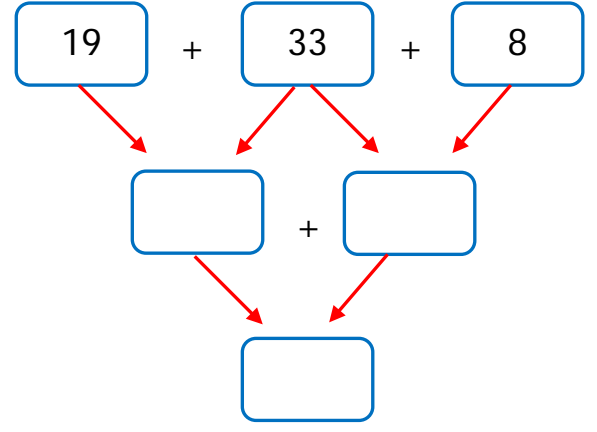
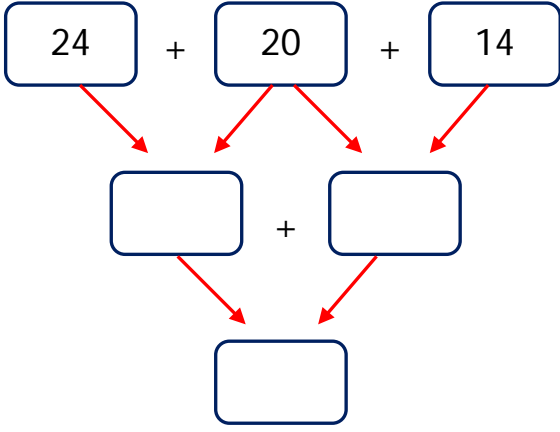
$$18 + 20 + 43 =$$

$$52 + 25 + 10 =$$

Tablodaki toplama işlemlerini dikkatlice yapınız.

+	8	10	13	24	20	36
10						
15						
24						
58						
41						

Aşağıdaki toplama işlemlerini yapınız.



Verilmeyen toplananları bulunuz.

$$\begin{array}{r} \square \\ + 17 \\ \hline 45 \end{array}$$

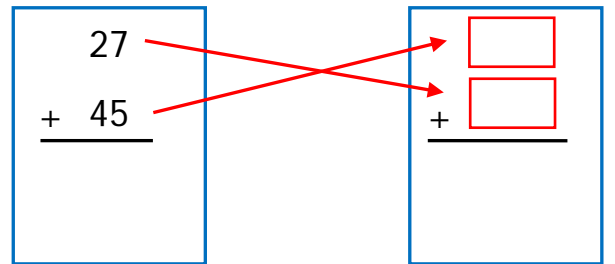
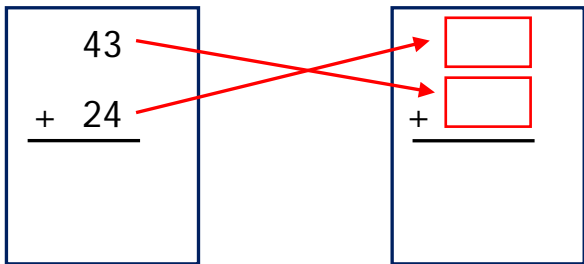
$$\begin{array}{r} 30 \\ + \square \\ \hline 56 \end{array}$$

$$\begin{array}{r} \square \\ + 13 \\ \hline 74 \end{array}$$

$$\begin{array}{r} 47 \\ + \square \\ \hline 86 \end{array}$$

$$\begin{array}{r} \square \\ + 38 \\ \hline 99 \end{array}$$

Aşağıdaki toplama işlemlerinde toplananlarının yerini değiştirerek tekrar toplayınız.



Aşağıdaki toplama işlemlerini yapınız.

$$\square = 23$$

$$\bigcirc = 44$$

$$\hexagon = 19$$

$$\square + \bigcirc =$$

$$\hexagon + \square =$$

$$\bigcirc + \hexagon + \square =$$