



Adı Soyadı :



Numarası :

Çalışma Kağıdı



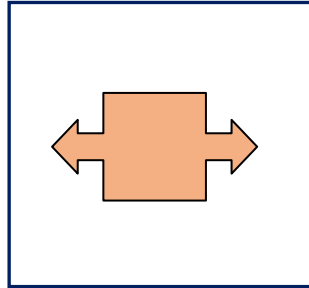

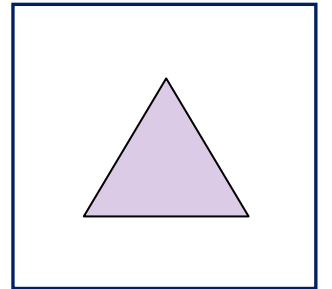
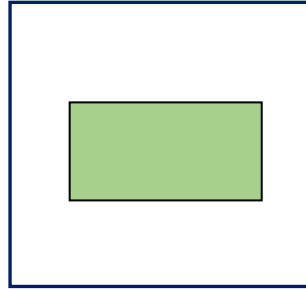

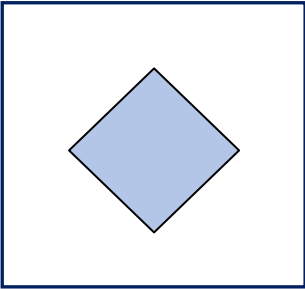
Konu: Uzamsal İlişkiler

Kazanım 1: Çevresindeki simetrik şekilleri bulur ve simetriyi geometrik yapılar ve modeller üzerinde açıklar.

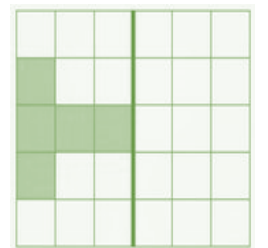
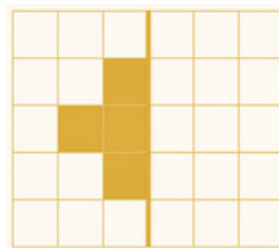
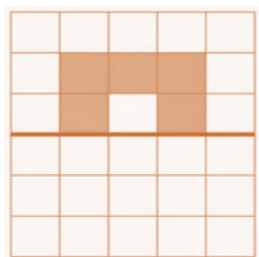
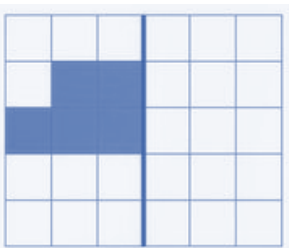
Aşağıdaki varlıklardan simetrik olanlarını işaretleyiniz.




Aşağıdaki görsellere birer simetri doğrusu çiziniz.




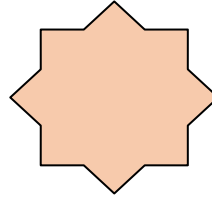

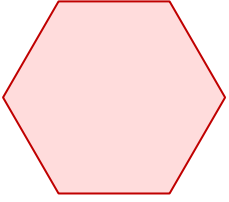


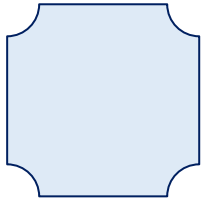

Aşağıdaki şekillerin verilen doğrulara göre simetriğini çizelim.



Aşağıda verilen doğruların simetriğini çizelim.



Aşağıdaki şekillerin birden fazla simetri doğrusu vardır. Bu doğruları çizelim.



Aşağıda simetri doğruları yanlış çizilmiş şekillerin altlarına işaret koyalım

