

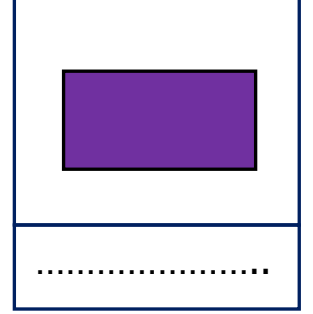
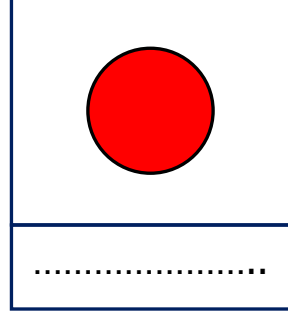
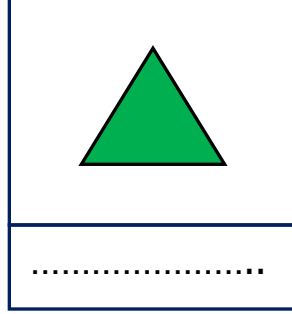
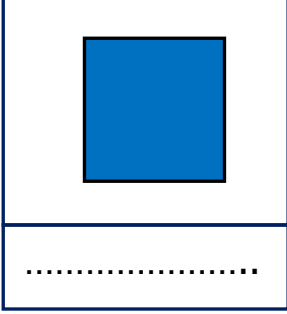


Adı Soyadı : .....


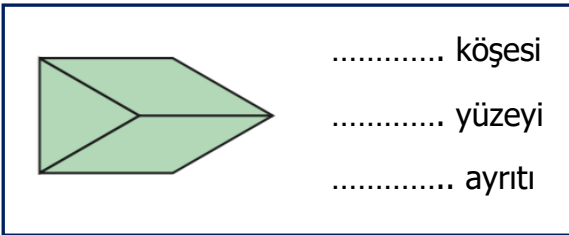
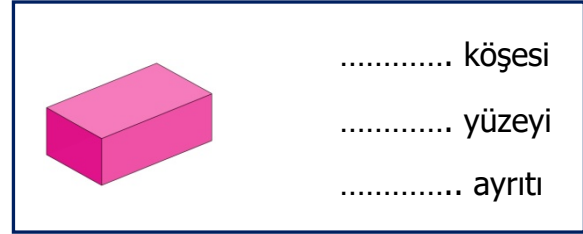
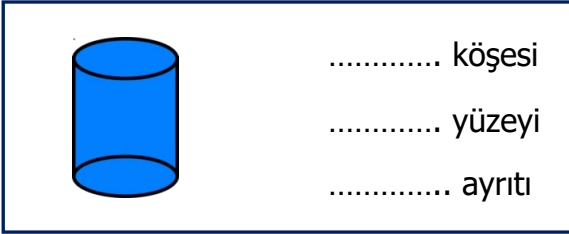
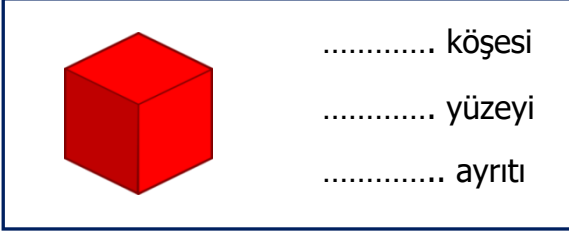
Numarası : .....

Konu: Geometrik Cisimlerin Yüzleri ve Yüzeyleleri

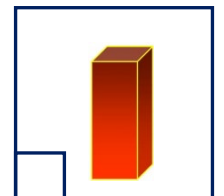
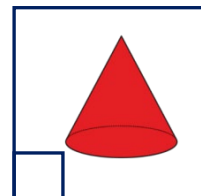
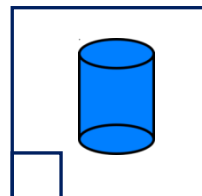
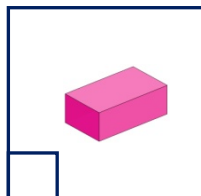
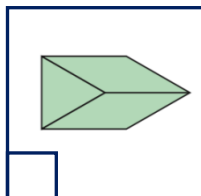
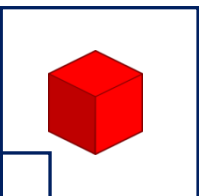
Aşağıdaki düzlemsel şekillerin adlarını yazınız.



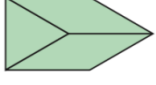


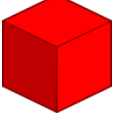

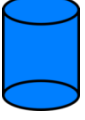








Aşağıdaki geometrik cisimlerin köşelerini, yüzelerini ve ayrıtlarını yazınız.



Aşağıdaki geometrik cisimlerden hangilerinin köşe sayısı, kenar sayısı ve yüzey sayısı eşittir. İşaretleyelim.



Aşağıdaki tabloda açınımları verilen geometrik cisimlerin eksik olan yüzeylerini tamamlayınız.

	  .....
	 .....
	 .....
	  .....
	 .....
	 .....

Aşağıdaki soruları yanıtlayınız.

- Kenarı ve köşesi yoktur. Aynı büyüklükte iki tabanı vardır.  
.....
- 5 yüzü, 6 köşesi ve 9 ayrıtı vardır.  
.....
- Bütün yüzeyleri karesel bölgedir.  
.....
- Karşılıklı yüzeyleri birbirine eşittir. Yüzeylerinin hepsi dikdörtgensel bölgedir.  
.....
- 2 yüzü bir tepe noktası vardır.  
.....
- Taban yüzeyleri eşittir ve karesel bölgedir. Yan yüzeyleri eşittir ve dikdörtgensel bölgedir.  
.....