


Adı : .....  
Soyadı: .....


1 . Sınıf  
Matematik

Doğal Sayılar  
Azlık-Çokluk-2






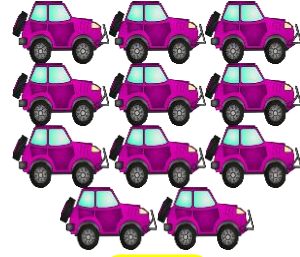

Çok (büyük) olan sayıyı boyayınız.



9



8



Adı : .....  
Soyadı: .....

1 . Sınıf  
Matematik

Doğal Sayılar  
Azlık-Çokluk-2

Çok (büyük) olan sayıyı boyayınız.

5

9

3

6

12

4

19

12

16

7

10

15

En çok (en büyük) olan sayıyı boyayınız.

8

6

3

5

9

4

0

6

1

9

12

20

15

16

7

9

13

5

16

18

10

12

11

13

15

20

10

8

6

12

15

11

19

20

19

18