


Adı : .....  
Soyadı: .....


1 . Sınıf  
Matematik

Doğal Sayılar  
Basamak Değeri-3

Kaç tane olduğunu yazınız.

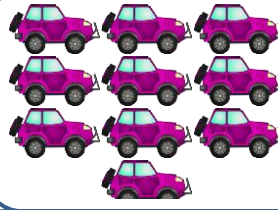


1 onluk



3 birlik

1 3

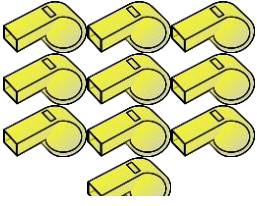


..... onluk



..... birlik

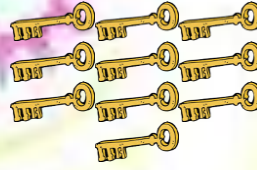
.....




..... onluk

..... birlik

.....




..... onluk




..... birlik

.....



..... onluk



..... birlik

.....



..... onluk



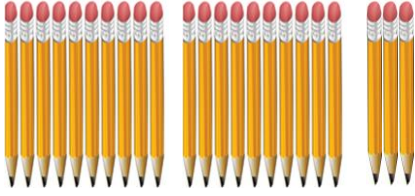
..... birlik

.....


Adı : .....  
Soyadı: .....

1 . Sınıf  
Matematik


Doğal Sayılar  
Basamak Değeri-3




...onluk ...birlik




...onluk ...birlik




...onluk ...birlik




...onluk ...birlik



...onluk ...birlik



...onluk ...birlik



...onluk ...birlik