


Adı :
Soyadı:

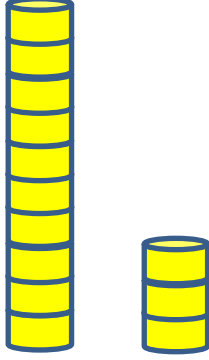
1 . Sınıf
Matematik

Doğal Sayılar
Basamak Değeri-1

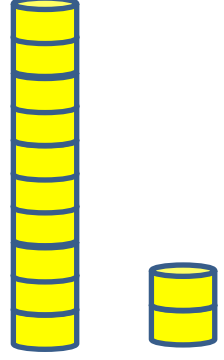
Kaç tane olduğunu yazınız.



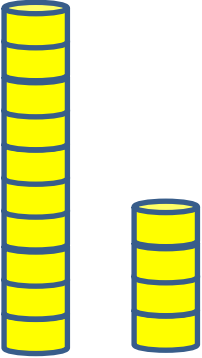
11



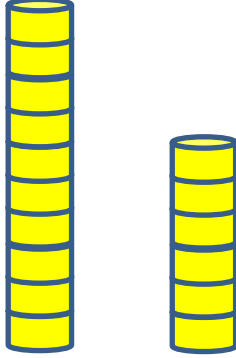
.....



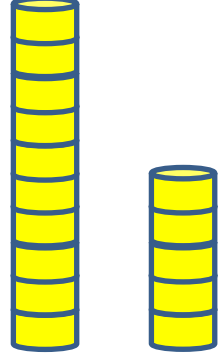
.....




.....



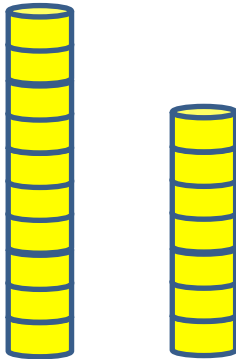
.....




.....



.....



.....



.....

Adı :
Soyadı:

1. Sınıf
Matematik

Doğal Sayılar
Basamak Değeri-1

Kaç tane olduğunu yazınız.

