


Adı :
Soyadı:


1 . Sınıf
Matematik

Doğal Sayılar
Basamak Değeri-3

Kaç tane olduğunu yazınız.

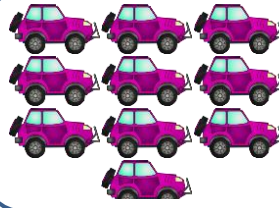


1 onluk



3 birlik

1 3

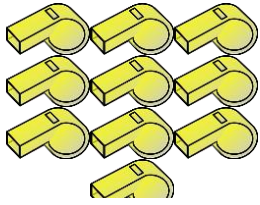


.... onluk



.... birlik


.....




.... onluk

.... birlik

.....




.... onluk




.... birlik

.....



.... onluk



.... birlik

.....



.... onluk




.... birlik

.....

Adı :
Soyadı:


1 . Sınıf
Matematik

Doğal Sayılar
Basamak Değeri-3




.....onlukbirlik

.....




.....onlukbirlik

.....




.....onlukbirlik

.....




.....onlukbirlik

.....




.....onlukbirlik

.....



.....onlukbirlik

.....



.....onlukbirlik

.....