
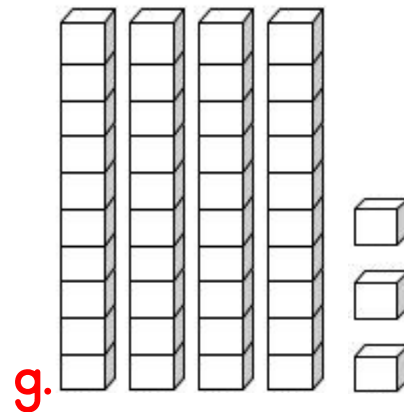

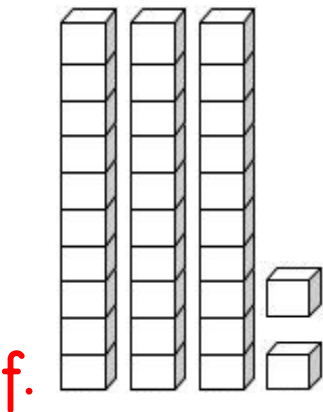

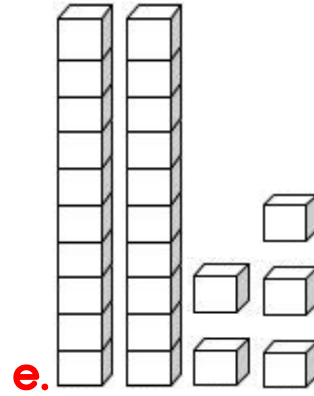
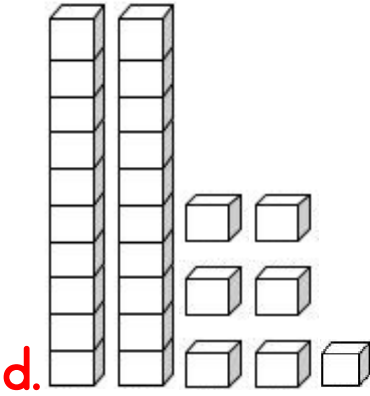
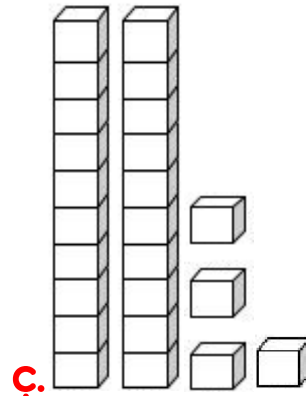
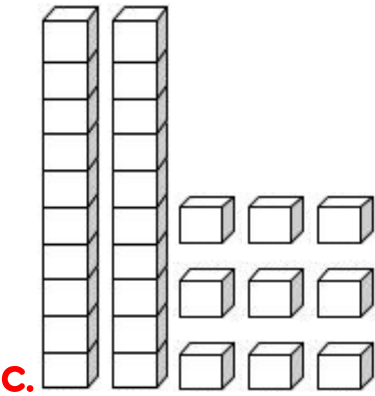
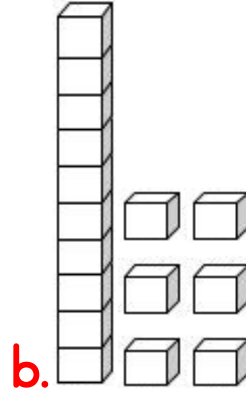

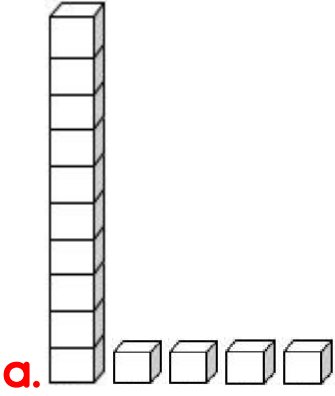


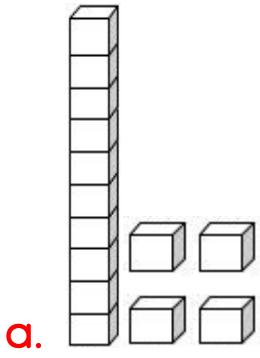
Onluk ve Birlik

A. ■ Onluk ve birlik blokları verilen sayıyı yazalım.

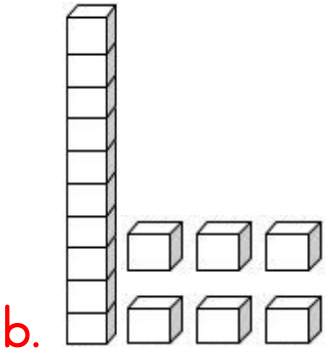



Onluk, birlik

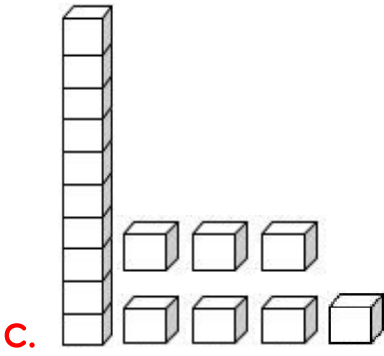
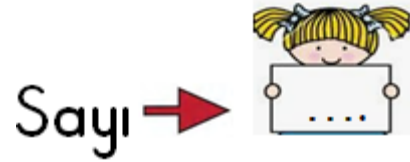
B. Blokları sayalım. Kaç onluk, kaç birlik olduğunu yazalım.



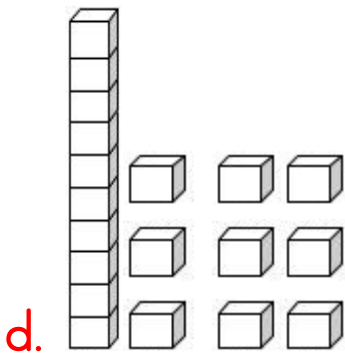
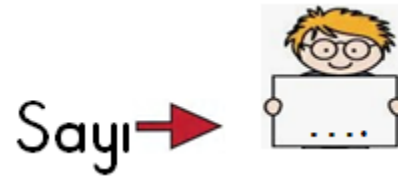
Onluk	Birlik
1	4



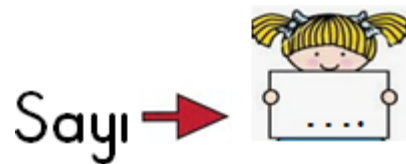
Onluk	Birlik
...	...



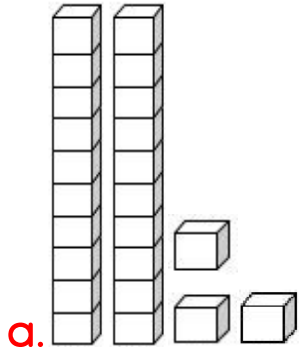
Onluk	Birlik
...	...



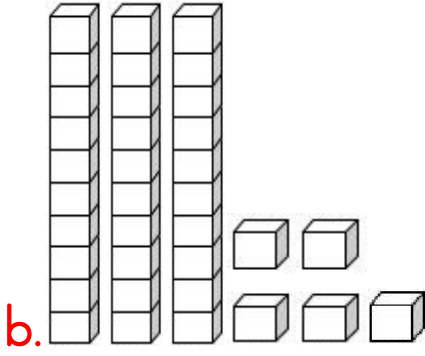
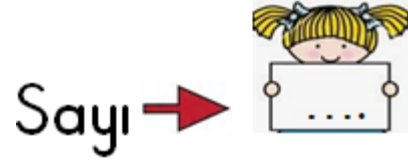
Onluk	Birlik
...	...



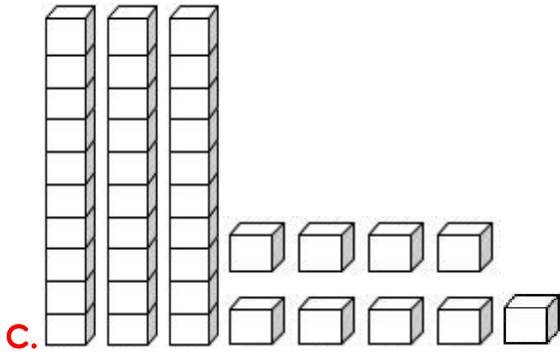
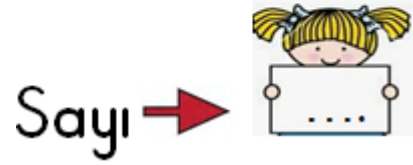
C. Blokları sayalım. Kaç onluk, kaç birlik olduğunu yazalım.



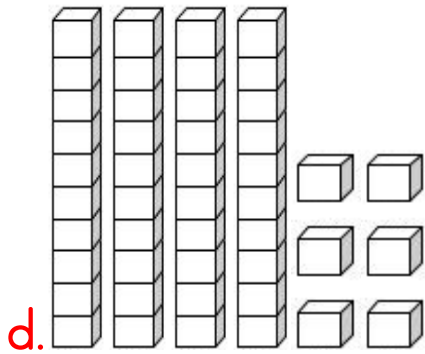
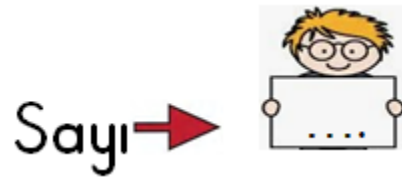
Onluk	Birlik
...	...



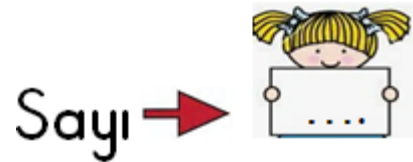
Onluk	Birlik
...	...



Onluk	Birlik
...	...

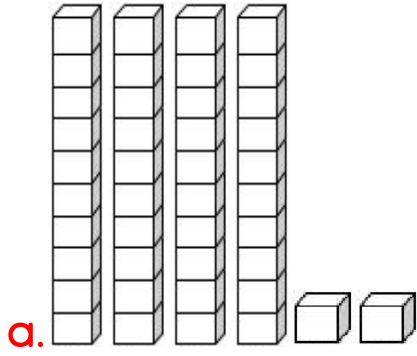


Onluk	Birlik
...	...

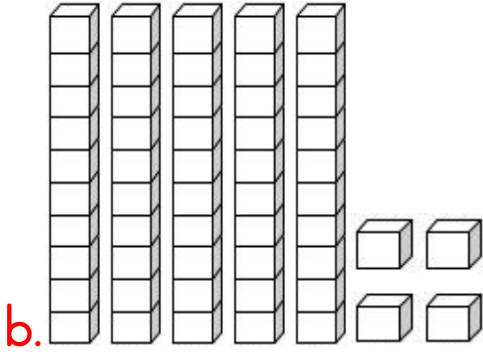
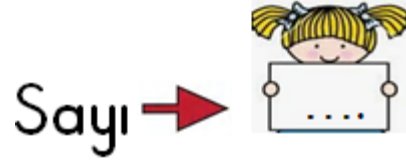


Onluk, birlik

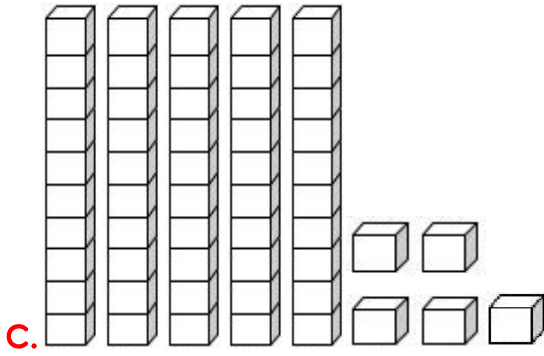
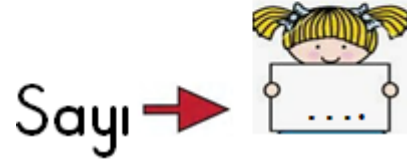
Ç. Blokları sayalım. Kaç onluk, kaç birlik olduğunu yazalım.



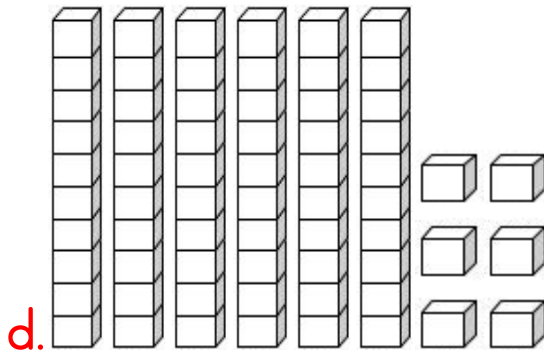
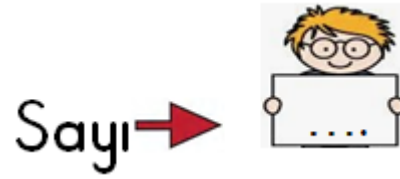
Onluk	Birlik
....



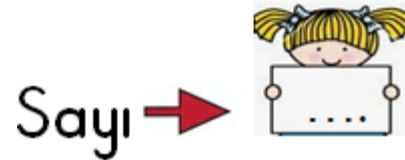
Onluk	Birlik
....



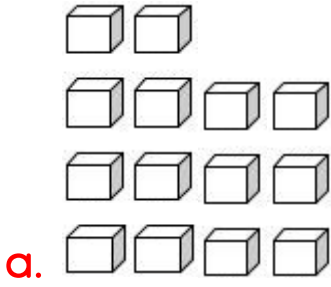
Onluk	Birlik
....



Onluk	Birlik
....

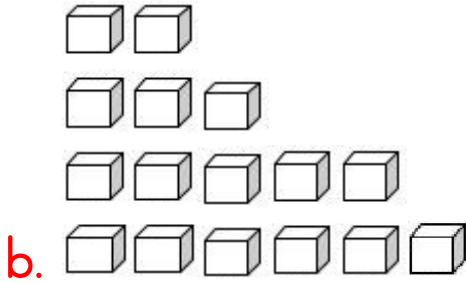


D. Blokları sayalım. Kaç onluk, kaç birlik olduğunu yazalım.



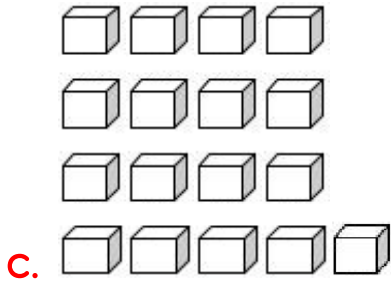
Onluk	Birlik
....

Sayı →



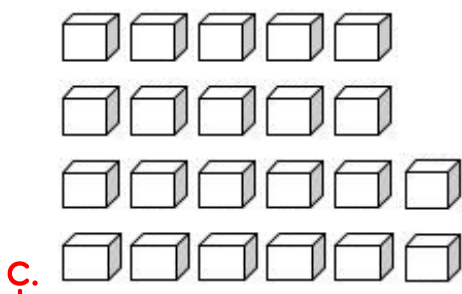
Onluk	Birlik
....

Sayı →



Onluk	Birlik
....

Sayı →



Onluk	Birlik
....

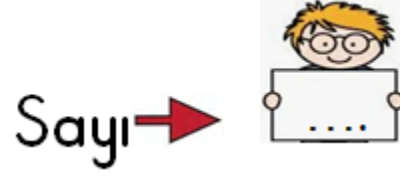
Sayı →



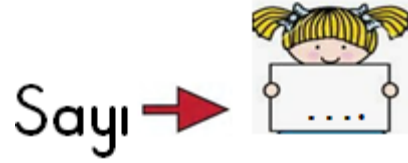
Onluk, birlik

E. Misketleri sayalım. Kaç onluk, kaç birlik olduğunu yazalım.

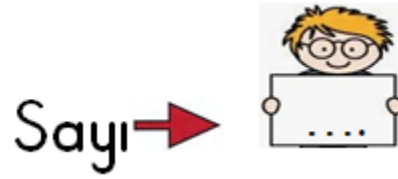
Onluk	Birlik
....



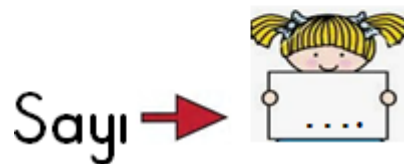
Onluk	Birlik
....



Onluk	Birlik
....



Onluk	Birlik
....



F. Onluk ve birlikleri verilen sayıları örnekteki gibi yazalım.

a.

Onluk	Birlik
1	2
12	

b.

Onluk	Birlik
1	6
....	

c.

Onluk	Birlik
1	8
....	

ç.

Onluk	Birlik
1	5
....	

d.

Onluk	Birlik
1	9
....	

e.

Onluk	Birlik
1	7
....	

f.

Onluk	Birlik
0	8
....	

g.

Onluk	Birlik
2	0
....	

G. Onluk ve birlikleri verilen sayıları yazalım.

a.

Onluk	Birlik
2	7
....	

b.

Onluk	Birlik
2	9
....	

c.

Onluk	Birlik
3	5
....	

ç.

Onluk	Birlik
2	4
....	

d.

Onluk	Birlik
4	6
....	

e.

Onluk	Birlik
5	0
....	

f.

Onluk	Birlik
0	9
....	

g.

Onluk	Birlik
5	7
....	

Ğ. Onluk ve birlikleri verilen sayıları yazalım.

a.

Onluk	Birlik
2	7
....	

b.

Onluk	Birlik
2	9
....	

c.

Onluk	Birlik
3	5
....	

ç.

Onluk	Birlik
2	4
....	

d.

Onluk	Birlik
4	6
....	

e.

Onluk	Birlik
5	0
....	

f.

Onluk	Birlik
0	9
....	

g.

Onluk	Birlik
5	7
....	

H. Onluk ve birlikleri verilen sayıları yazalım.

a.

Onluk	Birlik
3	0
....	

b.

Onluk	Birlik
4	6
....	

c.

Onluk	Birlik
5	8
....	

ç.

Onluk	Birlik
6	7
....	

d.

Onluk	Birlik
7	3
....	

e.

Onluk	Birlik
8	1
....	

f.

Onluk	Birlik
9	8
....	

g.

Onluk	Birlik
4	9
....	

Onluk, birlik

1. Onluk ve birlikleri verilen sayıları örnekteki gibi yazalım.

a. 1 onluk 4 birlik = 14

c. 1 onluk 7 birlik =

d. 1 onluk 8 birlik =

f. 2 onluk 3 birlik =

ğ. 2 onluk 6 birlik =

ı. 3 onluk 7 birlik =

j. 3 onluk 9 birlik =

l. 4 onluk 6 birlik =

n. 5 onluk 4 birlik =

ö. 5 onluk 0 birlik =

r. 6 onluk 2 birlik =

ş. 7 onluk 1 birlik =

u. 8 onluk 9 birlik =

v. 9 onluk 7 birlik =

b. 1 onluk 5 birlik =

ç. 1 onluk 9 birlik =

e. 1 onluk 0 birlik =

g. 2 onluk 7 birlik =

h. 2 onluk 5 birlik =

i. 3 onluk 6 birlik =

k. 3 onluk 8 birlik =

m. 4 onluk 7 birlik =

o. 4 onluk 4 birlik =

p. 6 onluk 8 birlik =

s. 6 onluk 9 birlik =

t. 7 onluk 3 birlik =

ü. 8 onluk 3 birlik =

y. 9 onluk 6 birlik =