


Adı :
Soyadı:

4. Sınıf
Matematik

Bölme İşlemi
Sonucu Tahmin Etme

Aşağıdaki bölme işlemlerini **en yakın onluğa** yuvarlayarak çözünüz.

$258 : 21 = ?$



260

20

$260 : 20 = 13$

$353 : 48 = ?$



.....

.....

.....

$358 : 28 = ?$



.....

.....

.....

$479 : 23 = ?$




.....

.....

.....

$552 : 24 = ?$



.....

.....

.....

$814 : 39 = ?$



.....

.....

.....

$576 : 18 = ?$



.....

.....

.....

$604 : 19 = ?$




.....

.....

.....

$768 : 24 = ?$



.....

.....

.....

$381 : 17 = ?$



.....

.....

.....

$503 : 26 = ?$



.....

.....

.....

$831 : 42 = ?$



.....

.....

.....

$952 : 41 = ?$



.....

.....

.....

$963 : 32 = ?$



.....

.....

.....

$774 : 39 = ?$



.....

.....

.....

$698 : 21 = ?$



.....

.....

.....

Adı :
Soyadı:

4. Sınıf
Matematik

Bölme İşlemi
Sonucu Tahmin Etme-1

Aşağıdaki bölme işlemlerini **en yakın onluğa** yuvarlayarak çözünüz.

$325 : 31 = \dots\dots$

$566 : 52 = \dots\dots$

$885 : 42 = \dots\dots$

$749 : 33 = \dots\dots$

$298 : 32 = \dots\dots$

$485 : 25 = \dots\dots$

$657 : 22 = \dots\dots$

$396 : 44 = \dots\dots$

$921 : 34 = \dots\dots$

$457 : 45 = \dots\dots$

$128 : 39 = \dots\dots$

$563 : 28 = \dots\dots$

$871 : 19 = \dots\dots$

$774 : 69 = \dots\dots$

$542 : 52 = \dots\dots$

$563 : 25 = \dots\dots$

$884 : 38 = \dots\dots$

$579 : 26 = \dots\dots$

$769 : 21 = \dots\dots$

$863 : 24 = \dots\dots$

$945 : 31 = \dots\dots$

$666 : 22 = \dots\dots$

$621 : 31 = \dots\dots$

$697 : 35 = \dots\dots$

$333 : 28 = \dots\dots$

$756 : 25 = \dots\dots$

$842 : 41 = \dots\dots$