


Adı :
Soyadı:

1 . Sınıf
Matematik

Çıkarma İşlemi
Alıştırmalar-2

Çıkarma işlemlerini yapınız.



$$\square - \square = \square$$



$$\square - \square = \square$$



$$\square - \square = \square$$



$$\square - \square = \square$$




$$\square - \square = \square$$




$$\square - \square = \square$$



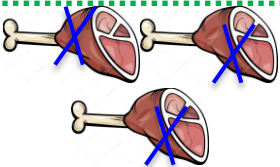
$$\square - \square = \square$$




$$\square - \square = \square$$




$$\square - \square = \square$$



$$\square - \square = \square$$



$$\square - \square = \square$$

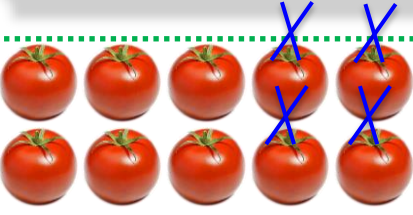


$$\square - \square = \square$$


Adı :
Soyadı:

1. Sınıf Matematik


Çıkarma İşlemi Alıştırmalar-2




$$\square - \square = \square$$




$$\square - \square = \square$$




$$\square - \square = \square$$




$$\square - \square = \square$$



$$\square - \square = \square$$




$$\square - \square = \square$$



$$\square - \square = \square$$




$$\square - \square = \square$$



$$\square - \square = \square$$



$$\square - \square = \square$$



$$\square - \square = \square$$



$$\square - \square = \square$$