



# ZAR OYUNU



INSTAGRAM/OSMANCEM\_CAKMAK



# Toplama Çıkarma

Zarı atın ve 2 sayıyı yazın. 3. sayıyı hesaplamak için ekleyin ve çıkarın.

Çıkarma işlemi yaparken önce büyük sayıyı yazın.

$___ + ___ = ___$

$___ + ___ = ___$

$___ + ___ = ___$

$___ + ___ = ___$

$___ + ___ = ___$

$___ + ___ = ___$

$___ - ___ = ___$

$___ - ___ = ___$

$___ - ___ = ___$

$___ - ___ = ___$

$___ - ___ = ___$

$___ - ___ = ___$

$___ + ___ = ___$

$___ + ___ = ___$

$___ + ___ = ___$

$___ + ___ = ___$

$___ + ___ = ___$

$___ + ___ = ___$

$___ - ___ = ___$

$___ - ___ = ___$

$___ - ___ = ___$

$___ - ___ = ___$

$___ - ___ = ___$

$___ - ___ = ___$

$___ + ___ = ___$

$___ + ___ = ___$

$___ + ___ = ___$

$___ + ___ = ___$

$___ + ___ = ___$

$___ + ___ = ___$

$___ - ___ = ___$



$___ - ___ = ___$

$___ - ___ = ___$

$___ - ___ = ___$

$___ - ___ = ___$


$___ - ___ = ___$




# Çıkarma İşlemi

Zarı iki kez atın. Üst kutulara büyük sayıları yazarak çıkarma işlemlerini yapın

$\square$	$\square$	$\square$	$\square$
$\square$	$\square$	$\square$	$\square$
$\square$	$\square$	$\square$	$\square$
$\square$	$\square$	$\square$	$\square$
$\square$	$\square$	$\square$	$\square$
$\square$	$\square$	$\square$	$\square$
$\square$	$\square$	$\square$	$\square$
$\square$	$\square$	$\square$	$\square$



# Toplama İşlemi



Zarı iki kez atın. Sayıları kutulara yazarak toplama işlemlerini yapın

$$\begin{array}{r} \square \\ + \square \\ \hline \end{array}$$
$$\begin{array}{r} \square \\ + \square \\ \hline \end{array}$$
$$\begin{array}{r} \square \\ + \square \\ \hline \end{array}$$
$$\begin{array}{r} \square \\ + \square \\ \hline \end{array}$$

$$\square$$
$$\square$$
$$\square$$
$$\square$$

$$\begin{array}{r} \square \\ + \square \\ \hline \end{array}$$
$$\begin{array}{r} \square \\ + \square \\ \hline \end{array}$$
$$\begin{array}{r} \square \\ + \square \\ \hline \end{array}$$
$$\begin{array}{r} \square \\ + \square \\ \hline \end{array}$$

$$\square$$
$$\square$$
$$\square$$
$$\square$$

# Büyükdür Küçüktür

Zarı iki kez atın ve uygun işaretleri ortaya yazın < > or =

