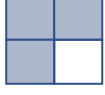


Adı :
Soyadı:

4. Sınıf
Matematik

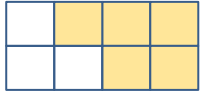
Kesirler
Kesir Çeşitleri-1

Kesirleri örnekteki gibi yazalım.




$$\frac{3}{4}$$

Üç bölü dört - dörtte üç



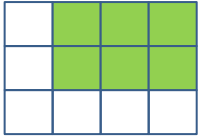
$$\frac{6}{8}$$

.....



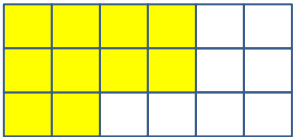
$$\frac{2}{6}$$

.....




$$\frac{6}{12}$$

.....



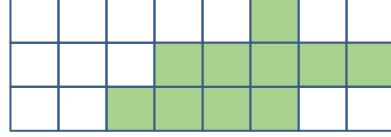
$$\frac{10}{18}$$

.....




$$\frac{12}{16}$$

.....



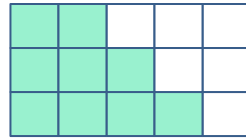
$$\frac{12}{24}$$

.....



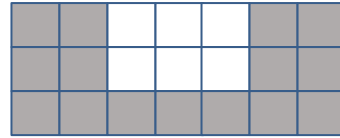
$$\frac{10}{16}$$

.....



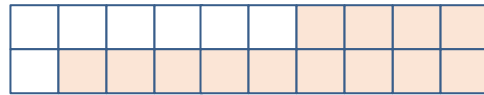
$$\frac{8}{15}$$

.....



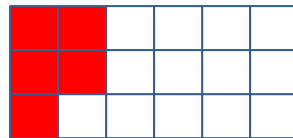
$$\frac{10}{24}$$

.....



$$\frac{12}{20}$$

.....



$$\frac{5}{15}$$

.....

Adı :
Soyadı:

4. Sınıf
Matematik

Kesirler
Kesir Çeşitleri-1


Kesirleri paydasına göre boyayıp paylarını yazalım.



8

.....

.....



5

.....


.....



6

.....

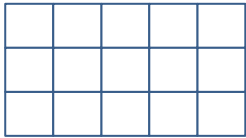
.....



9

.....

.....



12

.....

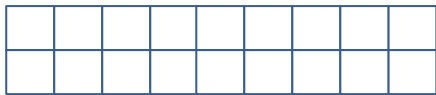
.....



10

.....


.....



13

.....

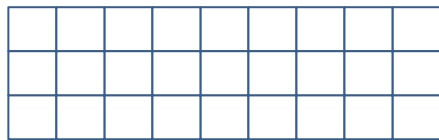
.....



21

.....


.....



7

.....

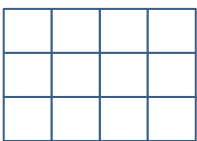
.....



5

.....

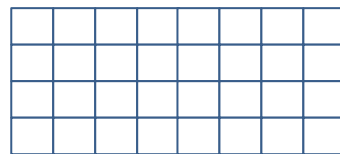
.....



8

.....

.....



15

.....

.....