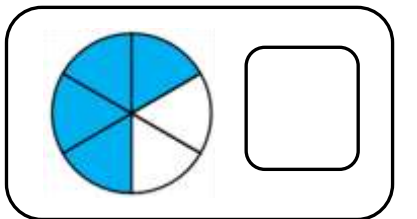
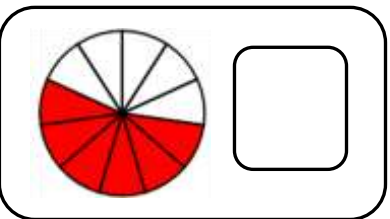
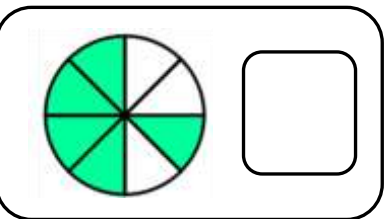
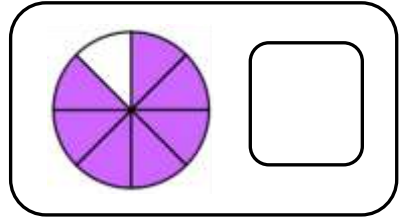
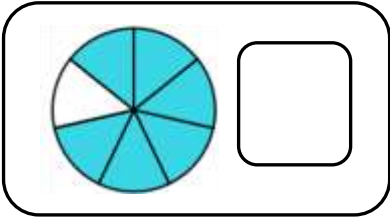
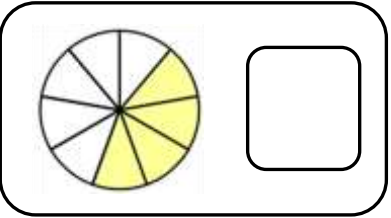
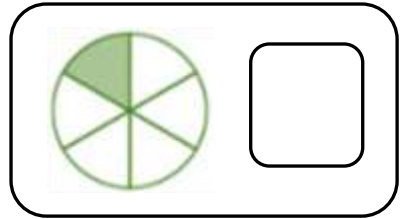
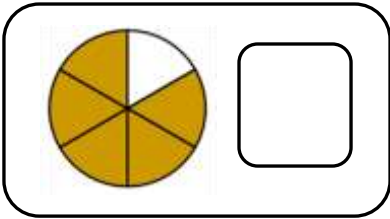
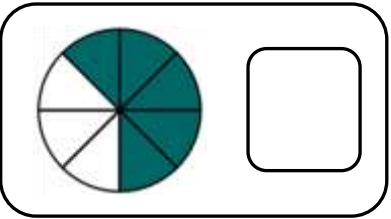
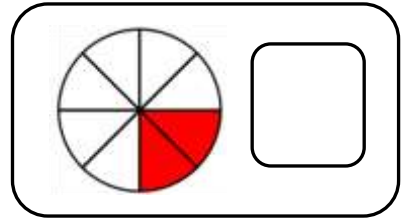
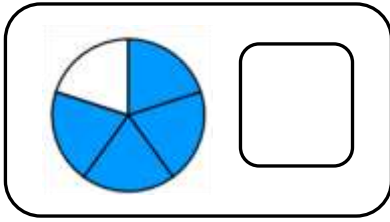
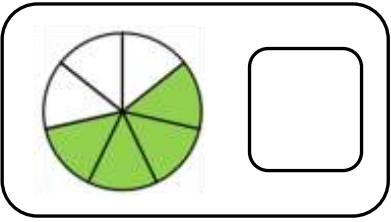
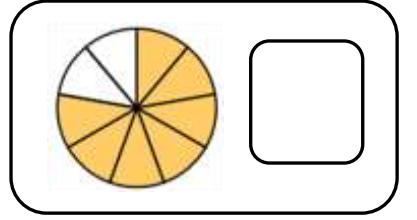
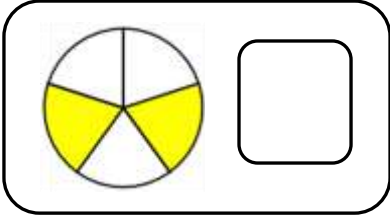
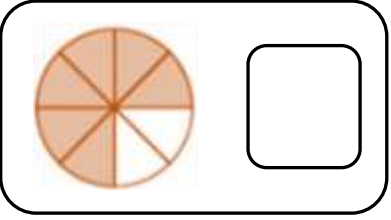
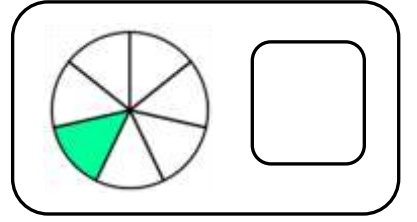
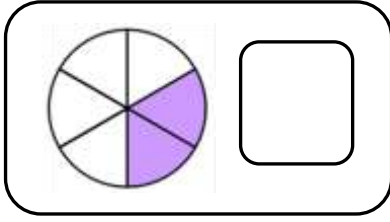
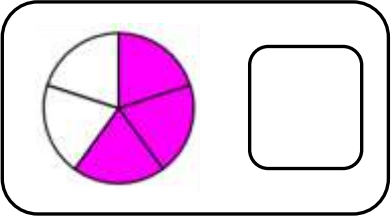
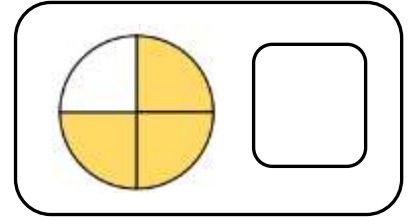
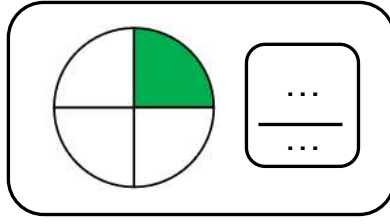
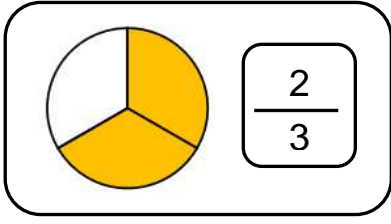


Adı :
Soyadı:

4. Sınıf
Matematik

Kesirler
Kesir Çeşitleri-2

Kesirleri örnekteki gibi yazalım.



Adı :
Soyadı :

4. Sınıf
Matematik

Kesirler
Kesir Çeşitleri-2

$$\frac{1}{1}$$



$$\frac{3}{7}$$



$$\frac{7}{10}$$



$$\frac{6}{12}$$



$$\frac{5}{8}$$



$$\frac{2}{9}$$



$$\frac{5}{6}$$



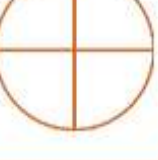
$$\frac{2}{10}$$



$$\frac{3}{5}$$



$$\frac{4}{4}$$



$$\frac{8}{11}$$



$$\frac{7}{8}$$



$$\frac{4}{11}$$



$$\frac{2}{3}$$



$$\frac{5}{7}$$



$$\frac{9}{12}$$



$$\frac{6}{9}$$



$$\frac{6}{10}$$

