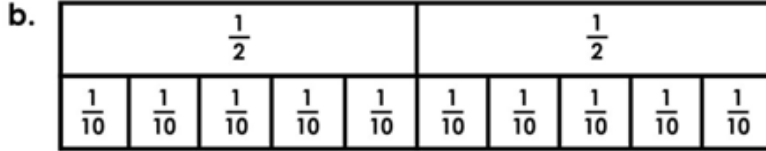




Verilen **şekillerin** birim kesir kadarını **boyayıp**, kesirleri **karşılaştırınız**.



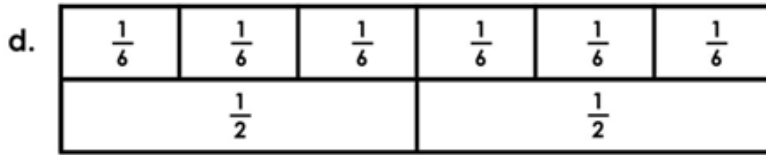
$$\frac{1}{3} \quad \bigcirc \quad \frac{1}{6}$$



$$\frac{1}{2} \quad \bigcirc \quad \frac{1}{10}$$




$$\frac{1}{8} \quad \bigcirc \quad \frac{1}{4}$$



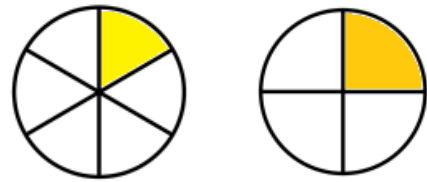
$$\frac{1}{6} \quad \bigcirc \quad \frac{1}{2}$$



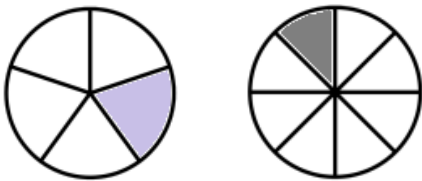
Şekillerin **boyalı** kısımlarını ifade eden **kesirleri** yazıp, **karşılaştırınız**.



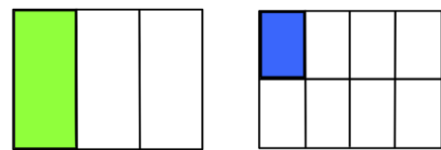
—	○	—
---	---	---



—	○	—
---	---	---



—	○	—
---	---	---



—	○	—
---	---	---



Aşağıdaki birim kesirleri **büyükten küçüğe** doğru sıralayınız.

$\frac{1}{5}$

$\frac{1}{2}$

$\frac{1}{8}$

$\frac{1}{6}$


 > > >

$\frac{1}{14}$

$\frac{1}{9}$

$\frac{1}{20}$

$\frac{1}{10}$


 > > >

$\frac{1}{35}$

$\frac{1}{17}$

$\frac{1}{13}$

$\frac{1}{22}$


 > > >

$\frac{1}{26}$

$\frac{1}{15}$

$\frac{1}{40}$

$\frac{1}{3}$


 > > >


Aşağıdaki birim kesirleri **küçükten büyüğe** doğru sıralayınız.

$\frac{1}{11}$

$\frac{1}{4}$

$\frac{1}{7}$

$\frac{1}{2}$


 < < <

$\frac{1}{16}$

$\frac{1}{12}$

$\frac{1}{17}$

$\frac{1}{20}$


 < < <

$\frac{1}{22}$

$\frac{1}{5}$

$\frac{1}{30}$

$\frac{1}{6}$


 < < <

$\frac{1}{40}$

$\frac{1}{25}$

$\frac{1}{51}$

$\frac{1}{32}$


 < < <