


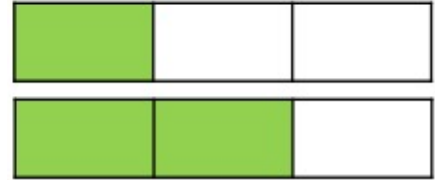


Verilen **modellere** bakarak **kesirleri** karşılaştırınız.

$$\frac{3}{4} \quad \bigcirc \quad \frac{1}{4}$$



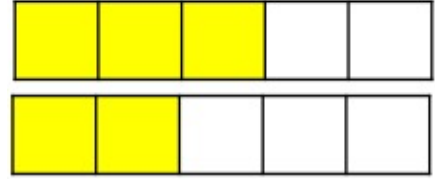
$$\frac{1}{3} \quad \bigcirc \quad \frac{2}{3}$$



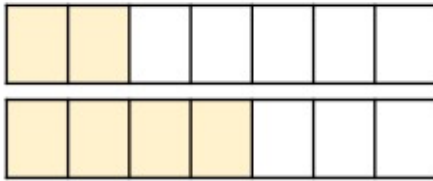
$$\frac{4}{4} \quad \bigcirc \quad \frac{2}{4}$$



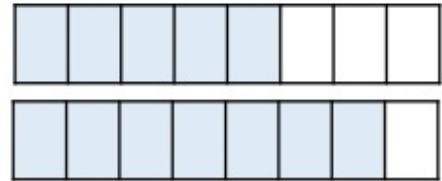
$$\frac{3}{5} \quad \bigcirc \quad \frac{2}{5}$$



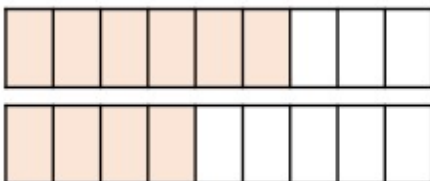
$$\frac{2}{7} \quad \bigcirc \quad \frac{4}{7}$$



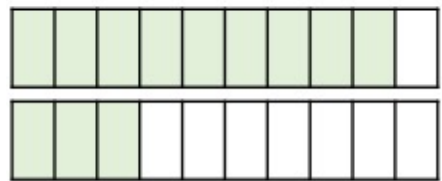
$$\frac{5}{8} \quad \bigcirc \quad \frac{7}{8}$$



$$\frac{6}{9} \quad \bigcirc \quad \frac{4}{9}$$



$$\frac{9}{10} \quad \bigcirc \quad \frac{3}{10}$$





Aşağıdaki kesirleri **büyükten küçüğe** doğru sıralayınız.

$$\frac{3}{5}$$

$$\frac{7}{5}$$

$$\frac{12}{5}$$

$$\frac{1}{5}$$



$$\square > \square > \square > \square$$

$$\frac{11}{14}$$

$$\frac{13}{14}$$

$$\frac{16}{14}$$

$$\frac{10}{14}$$



$$\square > \square > \square > \square$$

$$\frac{5}{35}$$

$$\frac{15}{35}$$

$$\frac{25}{35}$$

$$\frac{12}{35}$$



$$\square > \square > \square > \square$$

$$\frac{29}{7}$$

$$\frac{18}{7}$$

$$\frac{33}{7}$$

$$\frac{39}{7}$$



$$\square > \square > \square > \square$$



Aşağıdaki kesirleri **küçükten büyüğe** doğru sıralayınız.

$$\frac{13}{4}$$

$$\frac{7}{4}$$

$$\frac{3}{4}$$

$$\frac{9}{4}$$



$$\square < \square < \square < \square$$

$$\frac{10}{16}$$

$$\frac{5}{16}$$

$$\frac{14}{16}$$

$$\frac{8}{16}$$



$$\square < \square < \square < \square$$

$$\frac{1}{22}$$

$$\frac{11}{22}$$

$$\frac{31}{22}$$

$$\frac{21}{22}$$



$$\square < \square < \square < \square$$

$$\frac{19}{10}$$

$$\frac{16}{10}$$

$$\frac{33}{10}$$

$$\frac{6}{10}$$



$$\square < \square < \square < \square$$