

Adı :
Soyadı:

4. Sınıf
Matematik

Kesirler
Birim Miktarını Bulma-1

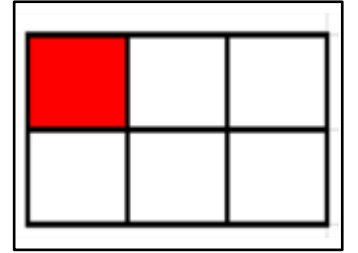
Birim kesir miktarlarını bulunuz.

20 cevizin $\frac{1}{4}$ ' i kaç
ceviz eder?

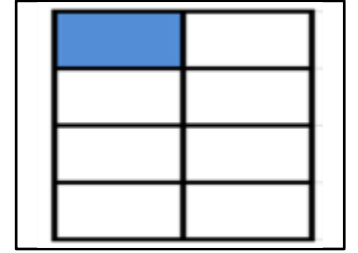
$$\begin{array}{r} 20 \quad | \quad 4 \\ - 20 \quad | \quad 5 \\ \hline 00 \end{array}$$



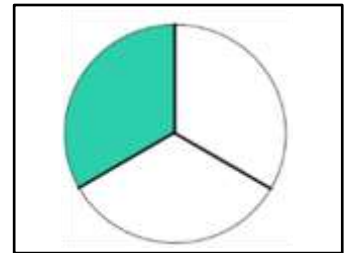
150 öğrencinin $\frac{1}{6}$ ' i
kaç öğrenci eder?



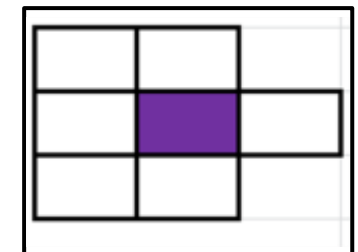
360 yumurtanın $\frac{1}{8}$ ' i
kaç yumurta eder?



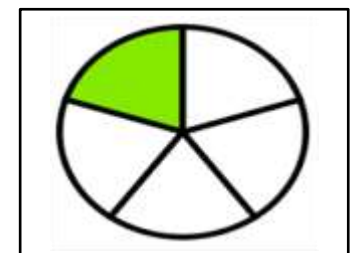
180 çiçeğin $\frac{1}{3}$ ' i kaç
çiçek eder?



210 TL paranın $\frac{1}{7}$ ' i
kaç TL eder?



65 şekerin $\frac{1}{5}$ ' i kaç
şeker eder?

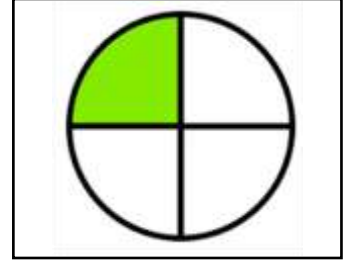


Adı :
Soyadı:

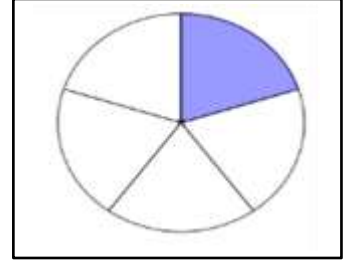
4. Sınıf
Matematik

Kesirler
Birim Miktarını Bulma-1

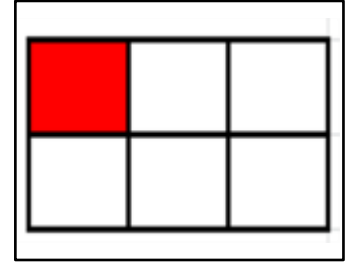
84 kitabın $\frac{1}{4}$ ' i kaç
kitap eder?



750 ekmeğin $\frac{1}{5}$ ' i kaç
ekmek eder?



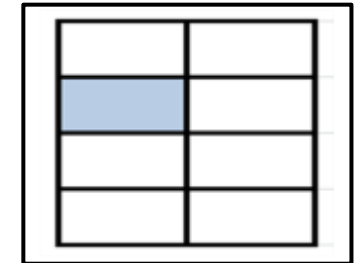
72 kurabiyenin $\frac{1}{6}$ ' i kaç
kurabiye eder?



148 ağacın $\frac{1}{4}$ ' i kaç
ağaç eder?



880 TL paranın $\frac{1}{8}$ ' i
kaç TL eder?



95 tane fıncığın $\frac{1}{5}$ ' i
kaç fıncık eder?

