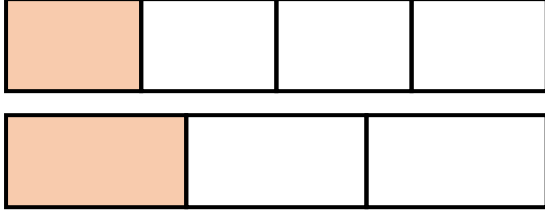


Adı :
Soyadı:

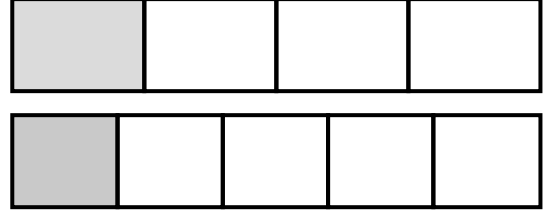
4. Sınıf
Matematik

Kesirler
Sıralama-Karşılaştırma-1

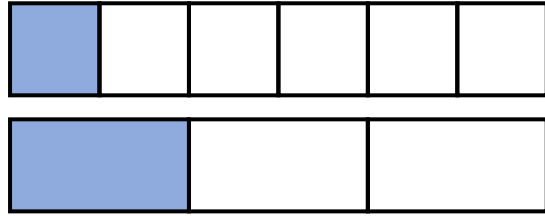
Kesirleri yazınız, hangisi **büyük** işaretleyiniz.




$$\frac{1}{3} > \frac{1}{4}$$



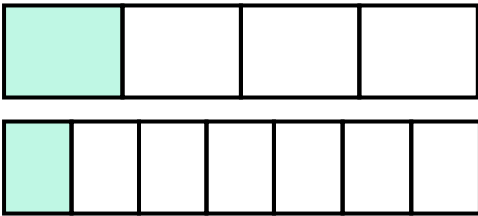
$$\frac{\dots}{\dots} \quad \frac{\dots}{\dots}$$



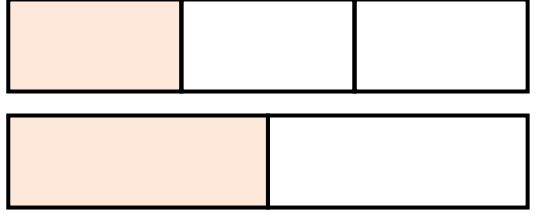
$$\frac{\dots}{\dots} \quad \frac{\dots}{\dots}$$



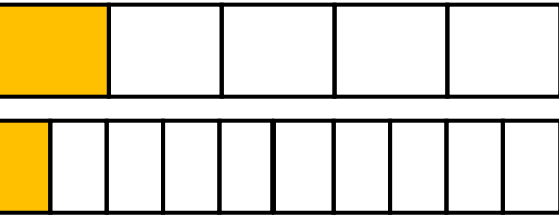
$$\frac{\dots}{\dots} \quad \frac{\dots}{\dots}$$



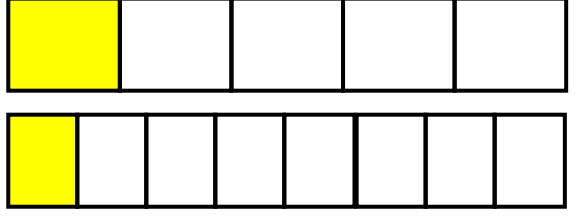
$$\frac{\dots}{\dots} \quad \frac{\dots}{\dots}$$



$$\frac{\dots}{\dots} \quad \frac{\dots}{\dots}$$



$$\frac{\dots}{\dots} \quad \frac{\dots}{\dots}$$



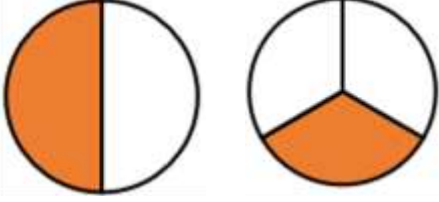
$$\frac{\dots}{\dots} \quad \frac{\dots}{\dots}$$

Adı :
Soyadı:

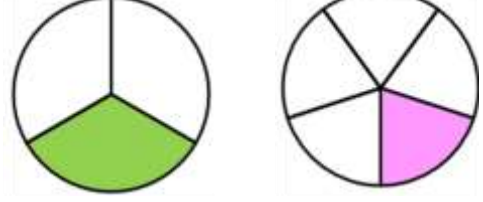
4. Sınıf
Matematik

Kesirler
Sıralama-Karşılaştırma-1

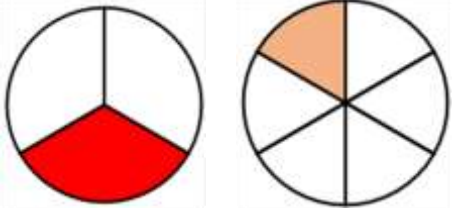
Kesirleri yazınız, hangisi **küçük** işaretleyiniz.



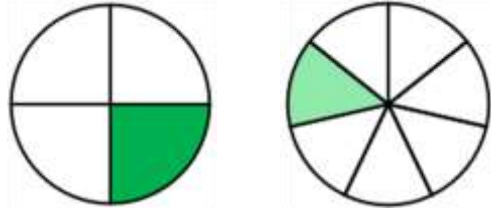
$$\frac{1}{3} < \frac{1}{2}$$



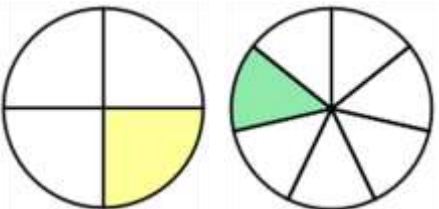
$$\frac{\dots}{\dots} \quad \frac{\dots}{\dots}$$



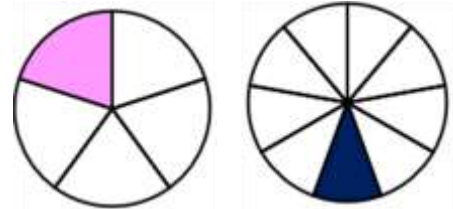
$$\frac{\dots}{\dots} \quad \frac{\dots}{\dots}$$



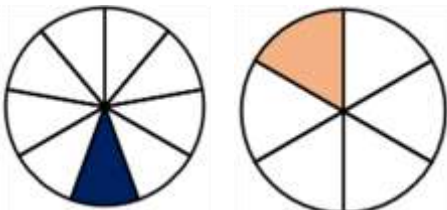
$$\frac{\dots}{\dots} \quad \frac{\dots}{\dots}$$



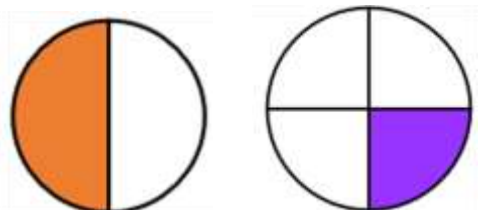
$$\frac{\dots}{\dots} \quad \frac{\dots}{\dots}$$



$$\frac{\dots}{\dots} \quad \frac{\dots}{\dots}$$



$$\frac{\dots}{\dots} \quad \frac{\dots}{\dots}$$



$$\frac{\dots}{\dots} \quad \frac{\dots}{\dots}$$