

Adı :
Soyadı:

1. Sınıf
Matematik

Paralarımız-5



₺5



₺3



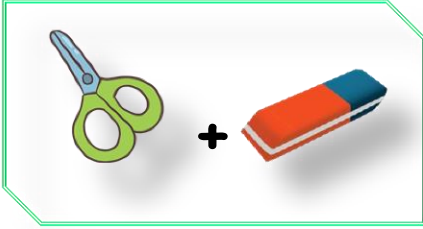
₺2




₺8




₺4




₺




₺



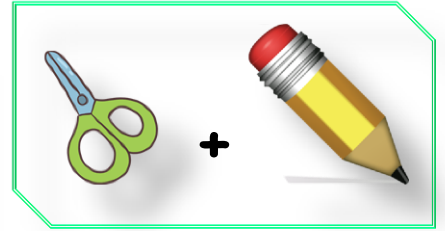
₺




₺



₺




₺



₺



₺



₺

Adı :
Soyadı:

1. Sınıf
Matematik

Paralarımız-5



Karpuz → ₺ 8

Süt → ₺ 3

Domates → ₺ 7

Patlıcan → ₺ 4

Peynir → ₺ 15

Kaymak → ₺ 10

1) En pahalı yiyecek hangisidir?

.....

2) Patlıcan ve domates alan biri kaç lira ödemesi gerekir?

.....

3) Karpuzdan pahalı yiyecekler nelerdir?

.....

4) İki tane karpuz alan birisi kaç lira ödemesi gerekir?

.....

5) Süt ve peynir toplam kaç lira eder?

.....

6) Peynir kaymaktan kaç lira daha pahalıdır?

.....

7) Bir kilo domates aldım. Bakkala 10 lira verdim. Kaç lira geri almam gerekir?

.....

8) İki tane süt aldım. Kaç lira ödemem gerekir?

.....