



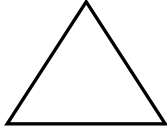
KESİRLER



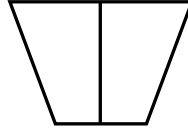
Aşağıdaki şekillerin belirtilen kesir kadarını boyyalım.



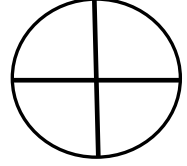
$$\frac{1}{2}$$



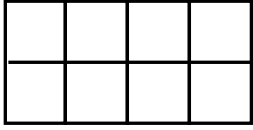
$$\frac{1}{1}$$



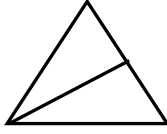
$$\frac{1}{2}$$



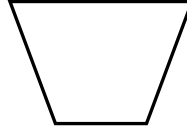
$$\frac{2}{4}$$



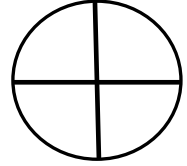
$$\frac{2}{8}$$



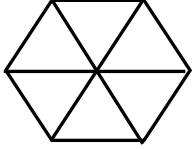
$$\frac{1}{2}$$



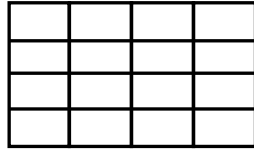
$$\frac{1}{1}$$



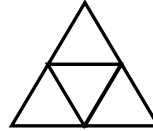
$$\frac{4}{4}$$



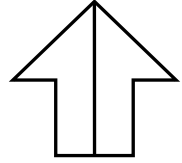
$$\frac{3}{6}$$



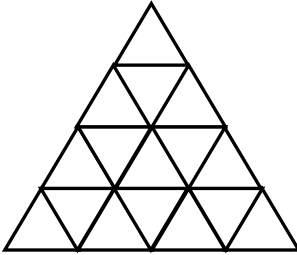
$$\frac{8}{16}$$



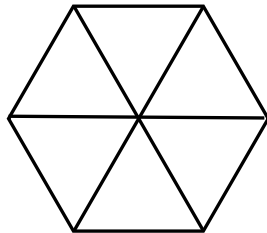
$$\frac{1}{4}$$



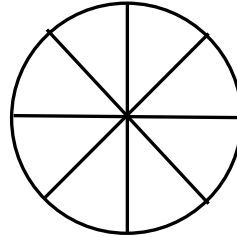
$$\frac{1}{2}$$



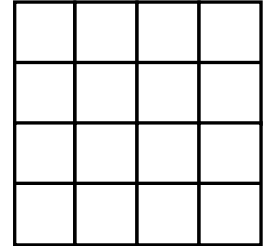
$$\frac{4}{16}$$



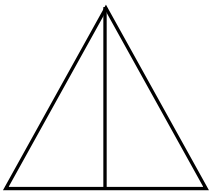
$$\frac{6}{6}$$



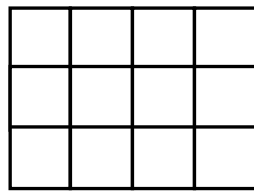
$$\frac{1}{8}$$



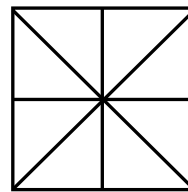
$$\frac{8}{16}$$



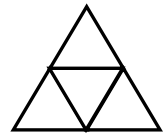
$$\frac{2}{2}$$



$$\frac{6}{12}$$



$$\frac{4}{8}$$



$$\frac{2}{4}$$