




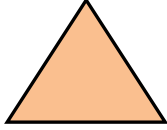
KESİRLER



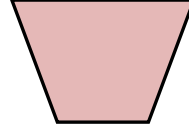
Aşağıdaki şekillerdeki boyalı alan için "bütün , yarım , çeyrek" kelimelerinden uygun olanını altına yazınız.



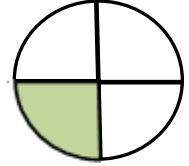
.....



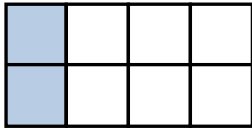
.....



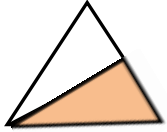
.....



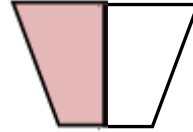
.....




.....



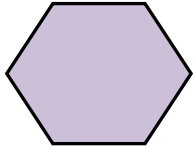
.....



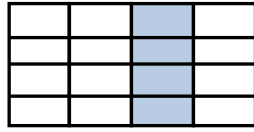
.....



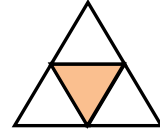
.....



.....



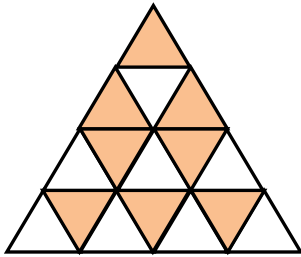
.....



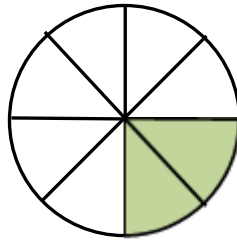
.....



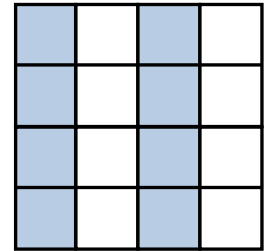
.....



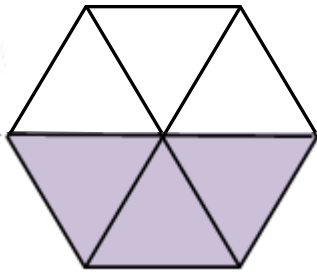
.....



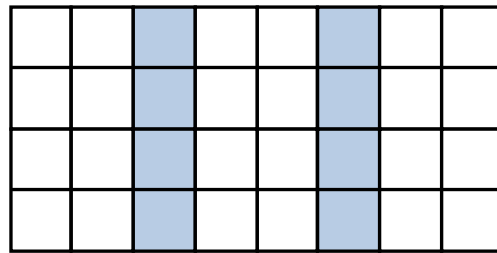
.....



.....



.....



.....

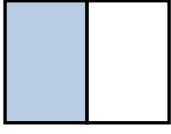




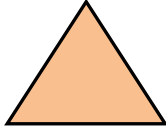
KESİRLER



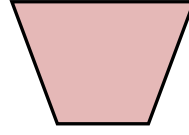
Aşağıdaki şekillerdeki boyalı alanları kesir sayılarıyla ifade edelim.



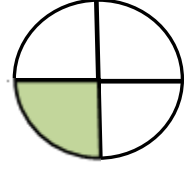
.....
.....



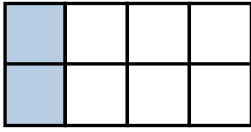
.....
.....



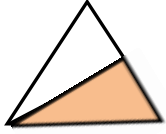
.....
.....



.....
.....




.....
.....



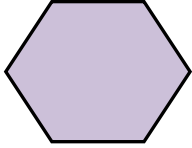
.....
.....



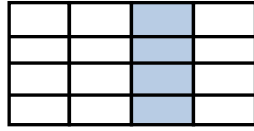
.....
.....



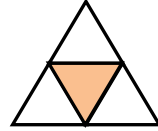
.....
.....



.....
.....



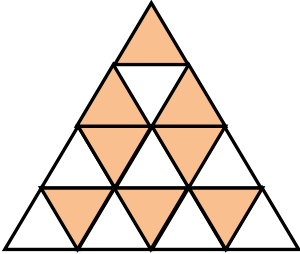
.....
.....



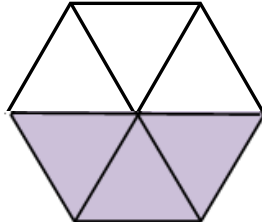
.....
.....



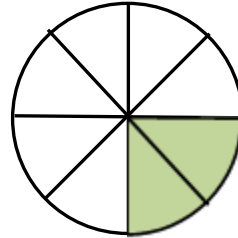
.....
.....



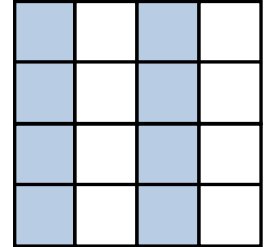
.....
.....



.....
.....



.....
.....



.....
.....



Aşağıda verilen kesir sayılarının yanına "bütün , yarım , çeyrek" kelimelerinden uygun olanını yazalım.

$$\frac{1}{4} \rightarrow \dots\dots\dots$$

$$\frac{3}{6} \rightarrow \dots\dots\dots$$

$$\frac{1}{1} \rightarrow \dots\dots\dots$$

$$\frac{2}{4} \rightarrow \dots\dots\dots$$

$$\frac{2}{8} \rightarrow \dots\dots\dots$$

$$\frac{5}{10} \rightarrow \dots\dots\dots$$





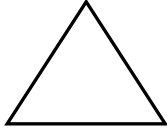
KESİRLER



Aşağıdaki şekillerin belirtilen kesir kadarını boyyalım.



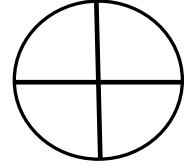
$$\frac{1}{2}$$



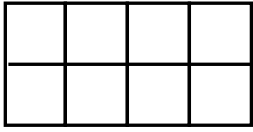
$$\frac{1}{1}$$



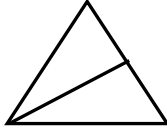
$$\frac{1}{2}$$



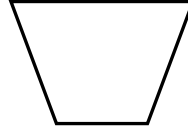
$$\frac{2}{4}$$



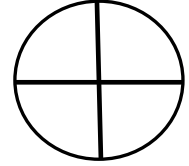
$$\frac{2}{8}$$



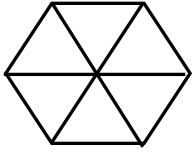
$$\frac{1}{2}$$



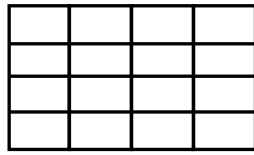
$$\frac{1}{1}$$



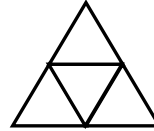
$$\frac{4}{4}$$



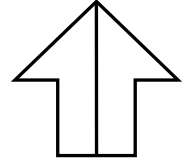
$$\frac{3}{6}$$



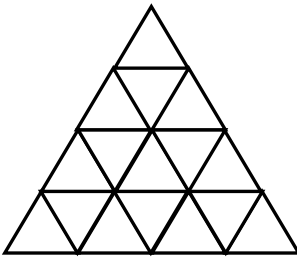
$$\frac{8}{16}$$



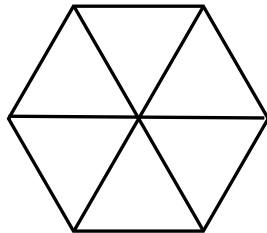
$$\frac{1}{4}$$



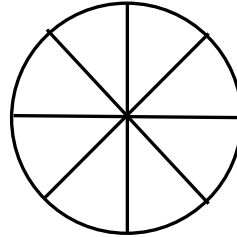
$$\frac{1}{2}$$



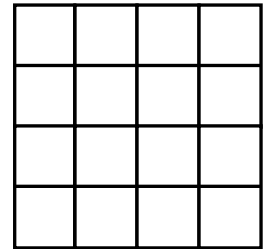
$$\frac{4}{16}$$



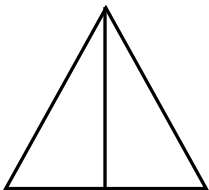
$$\frac{6}{6}$$



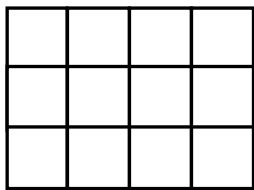
$$\frac{1}{8}$$



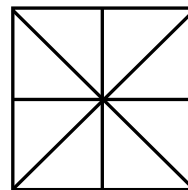
$$\frac{8}{16}$$



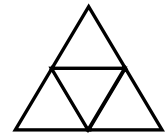
$$\frac{2}{2}$$



$$\frac{6}{12}$$



$$\frac{4}{8}$$



$$\frac{2}{4}$$