

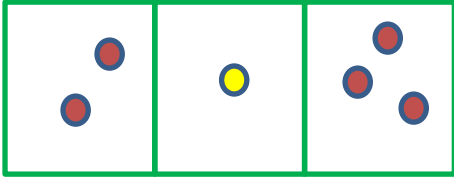
Adı : .....

Soyadı: .....


1. Sınıf  
Matematik

Toplama İşlemi  
Verilmeyeni Bulma-1

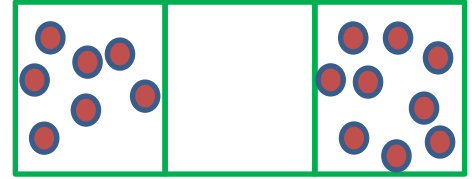
Verilmeyen toplananı bulunuz.




$$2 + \dots = 3$$




$$3 + \dots = 5$$




$$7 + \dots = 10$$




$$2 + \dots = 5$$




$$4 + \dots = 11$$




$$6 + \dots = 13$$



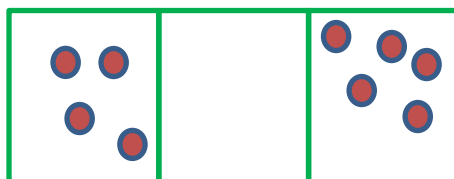
$$5 + \dots = 8$$




$$3 + \dots = 6$$




$$8 + \dots = 10$$



$$4 + \dots = 5$$



$$11 + \dots = 14$$



$$5 + \dots = 10$$

Adı : .....  
Soyadı: .....

1. Sınıf  
Matematik

Toplama İşlemi  
Verilmeyeni Bulma-1

Verilmeyen toplananı bulunuz.

1

+

2

2

+

4

4

+

5

3

+

6

2

+

3

5

+

7

7

+

9

6

+

8

3

+

5

8

+

10

9

+

10

10

+

13

6

+

12

7

+

10

5

+

10

12

+

15

18

+

20

13

+

16

11

+

13

8

+

15