

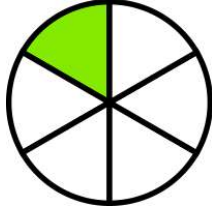


KESİRLER

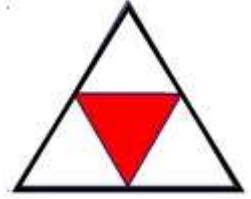


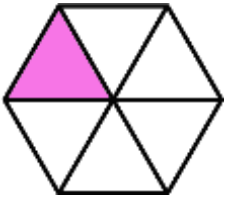
Aşağıdaki şekillerden hangisi birim kesri ifade eder işaretleyelim.



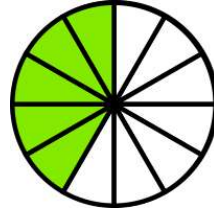


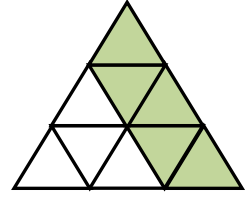





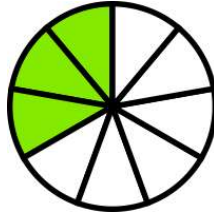


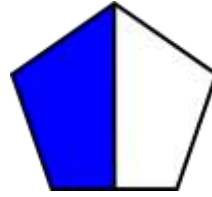


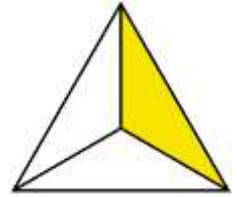


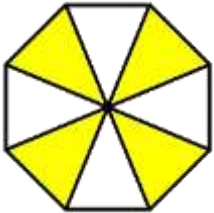


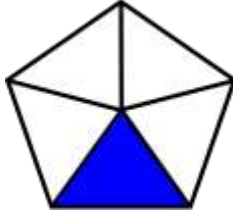


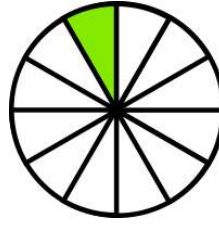


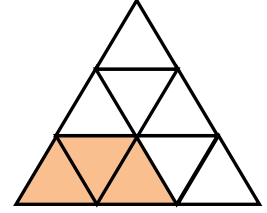


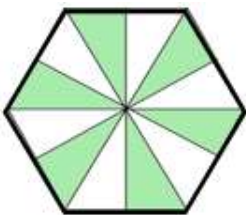







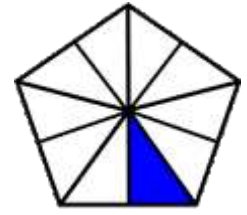














KESİRLER



Aşağıdaki kesir sayılarından birim kesirleri işaretleyelim.

$$\frac{5}{10}$$



?

$$\frac{1}{2}$$

$$\frac{1}{6}$$

$$\frac{3}{3}$$

?



$$\frac{4}{8}$$

$$\frac{1}{9}$$



?

$$\frac{1}{15}$$

$$\frac{12}{20}$$

$$\frac{1}{3}$$

?



$$\frac{6}{12}$$

$$\frac{1}{17}$$

$$\frac{1}{20}$$

$$\frac{3}{9}$$

$$\frac{6}{6}$$

$$\frac{1}{4}$$



Aşağıdaki verilen kesir sayılarının birim kesirlerini yazalım.

$$\frac{5}{7} \rightarrow \frac{\dots}{\dots}$$

$$\frac{3}{4} \rightarrow \frac{\dots}{\dots}$$

$$\frac{6}{6} \rightarrow \frac{\dots}{\dots}$$

$$\frac{8}{12} \rightarrow \frac{\dots}{\dots}$$

$$\frac{4}{4} \rightarrow \frac{\dots}{\dots}$$

$$\frac{7}{9} \rightarrow \frac{\dots}{\dots}$$

$$\frac{2}{7} \rightarrow \frac{\dots}{\dots}$$

$$\frac{10}{15} \rightarrow \frac{\dots}{\dots}$$

$$\frac{5}{8} \rightarrow \frac{\dots}{\dots}$$

$$\frac{9}{16} \rightarrow \frac{\dots}{\dots}$$

$$\frac{10}{10} \rightarrow \frac{\dots}{\dots}$$

$$\frac{12}{30} \rightarrow \frac{\dots}{\dots}$$

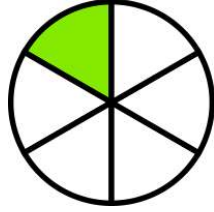


KESİRLER

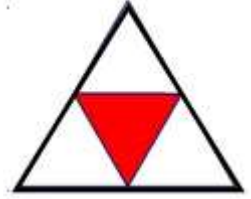


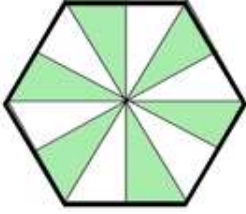
Aşağıdaki şekillerdeki boyalı alanları kesir sayısı şeklinde yazınız.



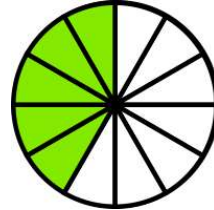
$$\frac{\dots}{\dots}$$


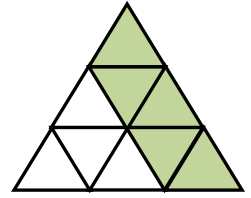
$$\frac{\dots}{\dots}$$



$$\frac{\dots}{\dots}$$


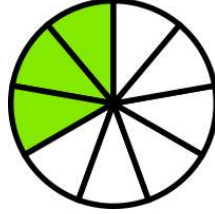
$$\frac{\dots}{\dots}$$


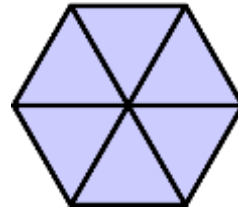
$$\frac{\dots}{\dots}$$

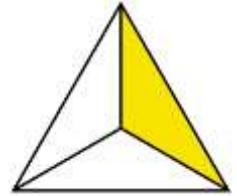

$$\frac{\dots}{\dots}$$


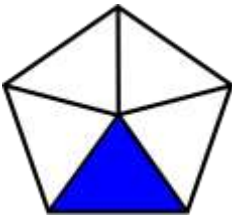
$$\frac{\dots}{\dots}$$


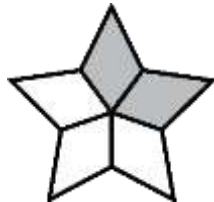
$$\frac{\dots}{\dots}$$


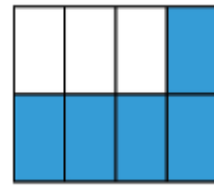
$$\frac{\dots}{\dots}$$



$$\frac{\dots}{\dots}$$


$$\frac{\dots}{\dots}$$


$$\frac{\dots}{\dots}$$


$$\frac{\dots}{\dots}$$


$$\frac{\dots}{\dots}$$


$$\frac{\dots}{\dots}$$


$$\frac{\dots}{\dots}$$



KESİRLER



Aşağıda sayı doğrularında verilen noktaların ifade ettiği kesir sayılarını yazınız.

