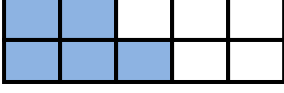




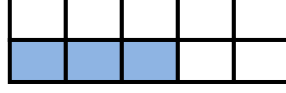
KESİRLER




Aşağıdaki şekillerdeki boyalı parçaları kesir sayısı şeklinde ifade ediniz. Bu kesir sayılarının birim kesrini yazınız.



$$\frac{\dots}{\dots} \rightarrow \frac{\dots}{\dots}$$



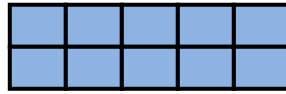
$$\frac{\dots}{\dots} \rightarrow \frac{\dots}{\dots}$$



$$\frac{\dots}{\dots} \rightarrow \frac{\dots}{\dots}$$



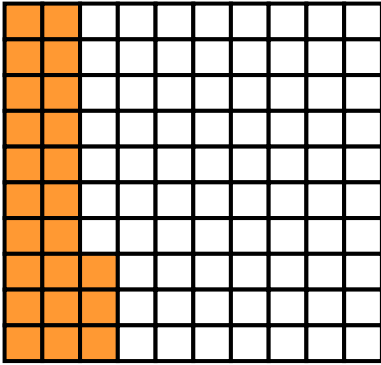
$$\frac{\dots}{\dots} \rightarrow \frac{\dots}{\dots}$$




$$\frac{\dots}{\dots} \rightarrow \frac{\dots}{\dots}$$



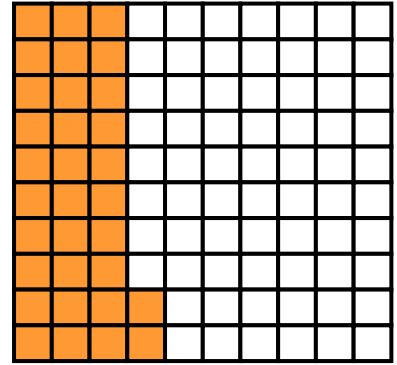
$$\frac{\dots}{\dots} \rightarrow \frac{\dots}{\dots}$$



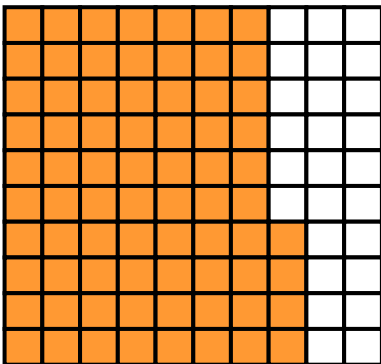
$$\frac{\dots}{\dots} \rightarrow \frac{\dots}{\dots}$$



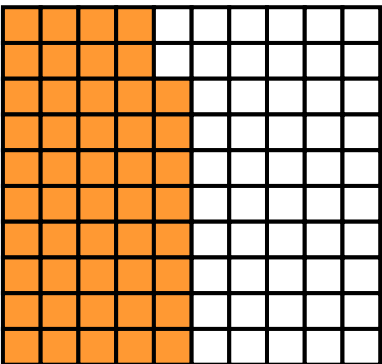
$$\frac{\dots}{\dots} \rightarrow \frac{\dots}{\dots}$$



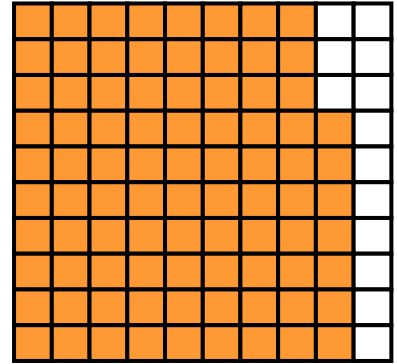
$$\frac{\dots}{\dots} \rightarrow \frac{\dots}{\dots}$$



$$\frac{\dots}{\dots} \rightarrow \frac{\dots}{\dots}$$



$$\frac{\dots}{\dots} \rightarrow \frac{\dots}{\dots}$$



$$\frac{\dots}{\dots} \rightarrow \frac{\dots}{\dots}$$