

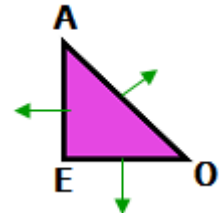
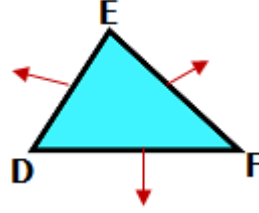
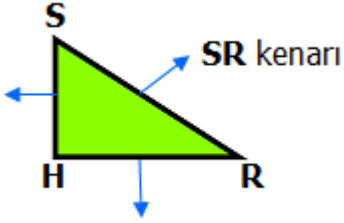


Aşağıdaki **üçgenleri** örnekteki gibi **isimlendiriniz.**

$\triangle ABC$	$\triangle ACB$
$\triangle BCA$	$\triangle BAC$
$\triangle CBA$	$\triangle CAB$



Aşağıdaki **üçgenlerin** kenarlarını örnekteki gibi **isimlendiriniz.**

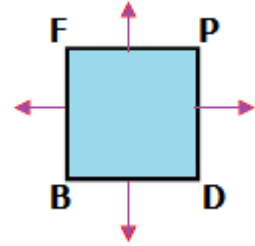
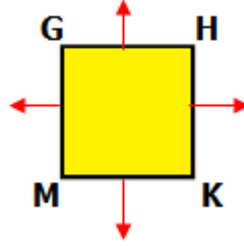
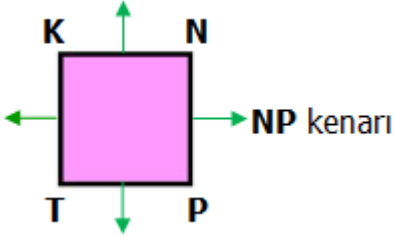


Aşağıdaki **kareleri** örnekteki gibi **isimlendiriniz.**


BCED karesi	BDEC karesi
CEDB karesi	CBDE karesi
EDBC karesi	ECBD karesi
BCED karesi	BDEC karesi




Aşağıdaki **karelerin** kenarlarını örnekteki gibi **isimlendiriniz**.




Aşağıdaki **dikdörtgenleri** örnekteki gibi **isimlendiriniz**.



DSHF
dikdörtgeni



TBKR
dikdörtgeni



YMGZ
dikdörtgeni



Kenarlarına göre üçgen çeşitlerinin isimlerini yazınız.

