



## ZAMANI OKUYALIM VE YAZALIM



Aşağıda saatlerin gösterdiği zamanları yazalım.(Saatler öğleden önceyi göstermektedir.)



Saat : .....



Saat : .....



Saat : .....



Saat : .....



Saat : .....



Saat : .....



Saat : .....



Saat : .....



Saat : .....



Saat : .....



Saat : .....



Saat : .....



Saat : .....



Saat : .....



Saat : .....



Saat : .....



## ZAMANI OKUYALIM VE YAZALIM



Aşağıda saatlerin gösterdiği zamanları yazalım.(Saatler öğleden sonrası göstermektedir.)



Saat : .....



Saat : .....



Saat : .....



Saat : .....



Saat : .....



Saat : .....



Saat : .....



Saat : .....



Saat : .....



Saat : .....



Saat : .....



Saat : .....



Saat : .....



Saat : .....



Saat : .....



Saat : .....



## ZAMANI OKUYALIM VE YAZALIM



Aşağıda saatlerin gösterdiği zamanları yazalım.(Saatler öğleden önceyi göstermektedir.)



Saat : .....



Saat : .....



Saat : .....



Saat : .....



Saat : .....



Saat : .....



Saat : .....



Saat : .....



Saat : .....



Saat : .....



Saat : .....



Saat : .....



Saat : .....



Saat : .....



Saat : .....



Saat : .....



## ZAMANI OKUYALIM VE YAZALIM

Aşağıda saatlerin gösterdiği zamanları yazalım.(Saatler öğleden sonrası göstermektedir.)



Saat : .....



Saat : .....



Saat : .....



Saat : .....



Saat : .....



Saat : .....



Saat : .....



Saat : .....



Saat : .....



Saat : .....



Saat : .....



Saat : .....



Saat : .....



Saat : .....



Saat : .....

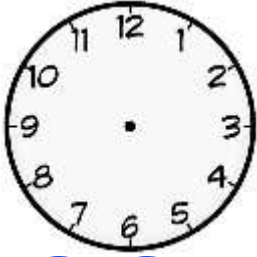


Saat : .....

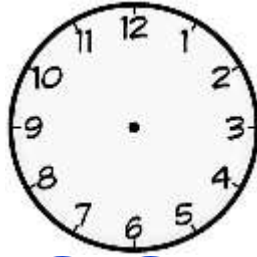


## ZAMANI OKUYALIM VE YAZALIM

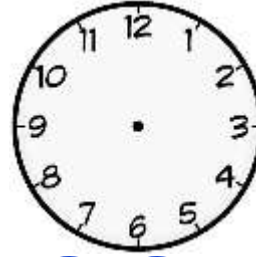
Aşağıda verilen zamanları saat üzerinde gösterelim.



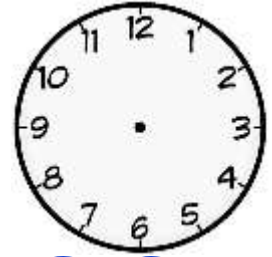
05.30



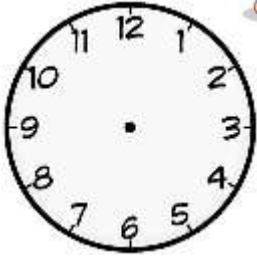
08.15



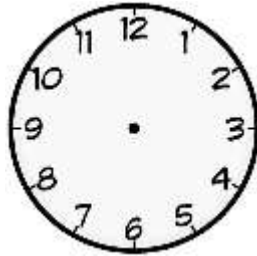
04.20



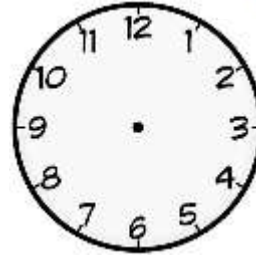
15.00



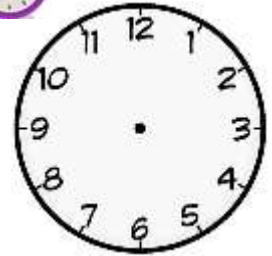
23.45



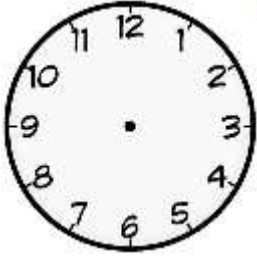
07.00



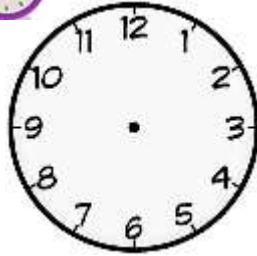
17.50



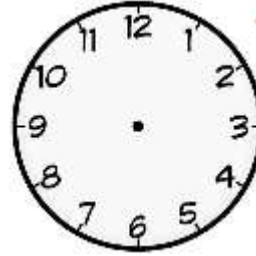
06.25



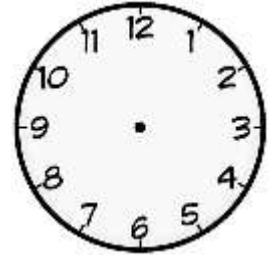
10.35



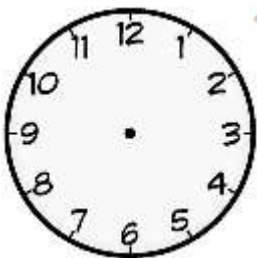
23.30



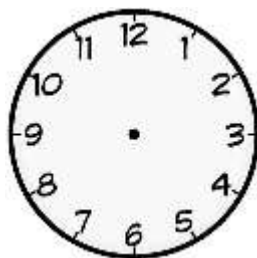
13.10



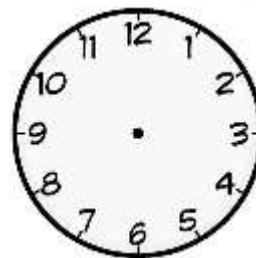
09.05



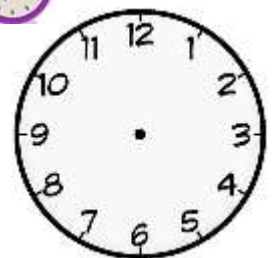
11.50



05.15



14.25



08.30

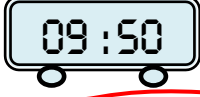


## ZAMANI OKUYALIM VE YAZALIM

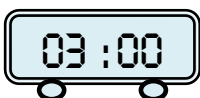
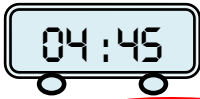
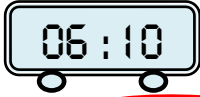
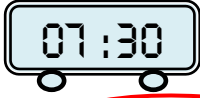
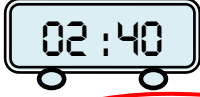
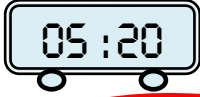


Aşağıda dijital saatte verilen zamanları yazalım.

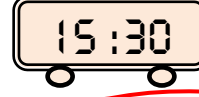
Öğleden Önce



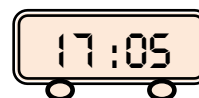
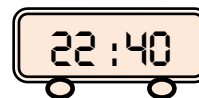
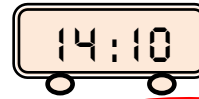
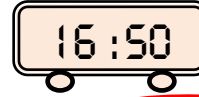
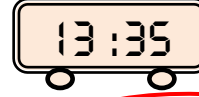
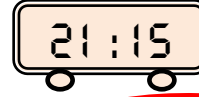
Ona on var.



Öğleden Sonra



Üç buçuk



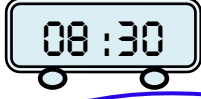


## ZAMANI OKUYALIM VE YAZALIM

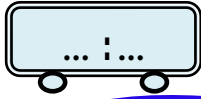


Aşağıda verilen zamanları dijital saatte yazalım.

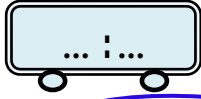
Öğleden Önce




Sekiz buçuk.



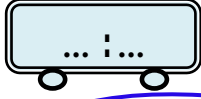
On iki .



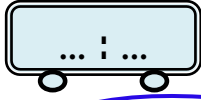
Dördü çeyrek geçiyor.



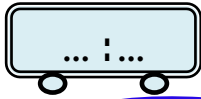
Dokuza on var.



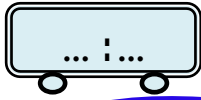
İki buçuk.



Altıyı yirmi geçiyor.

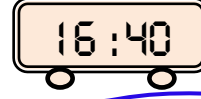


On bire çeyrek var.

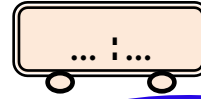


Üçü yirmi beş geçiyor.

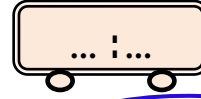
Öğleden Sonra



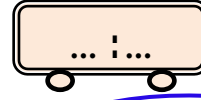
Beşe yirmi var .



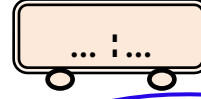
Onu çeyrek geçiyor.



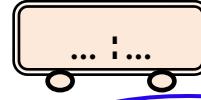
İkiyi yirmi beş geçiyor.



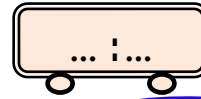
Bir buçuk .



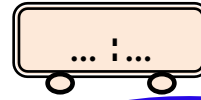
Altı.



Yediye yirmi beş var.



On bire çeyrek var.



Üçü on geçiyor.