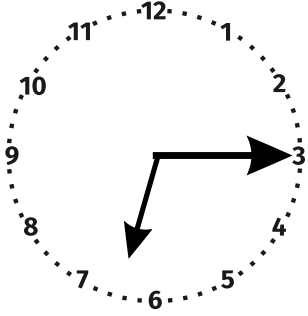




3. SINIF

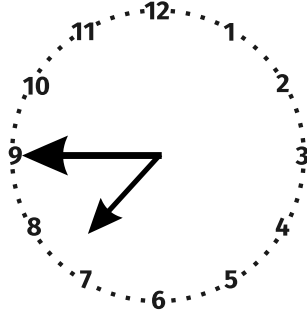
MATEMATİK DERSİ 23. HAFTA ÇALIŞMA KAĞIDI

- Aşağıdaki saatleri ve okunuşlarını örnekteki gibi altlarına yazalım.

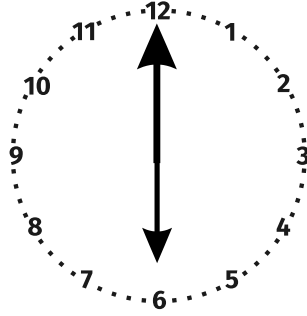


6.15

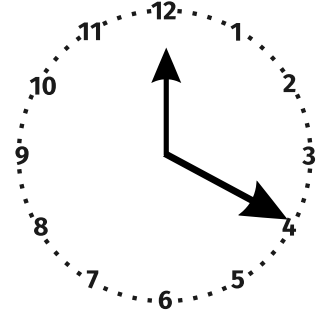
Altıyı çeyrek geçiyor.



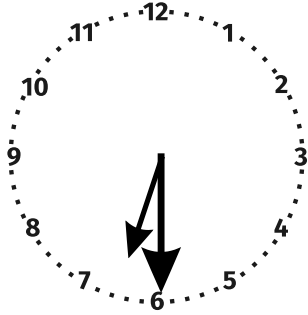
.....
.....



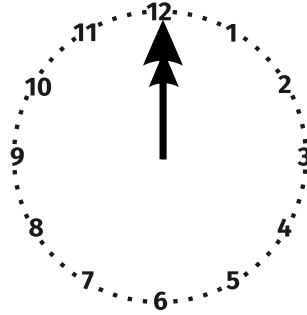
.....
.....



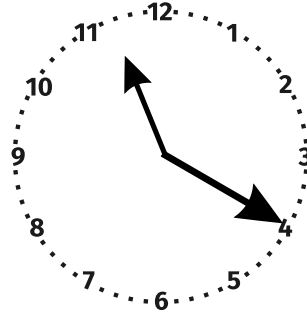
.....
.....



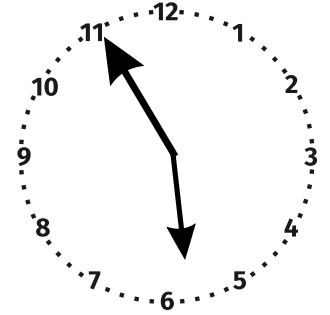
.....
.....



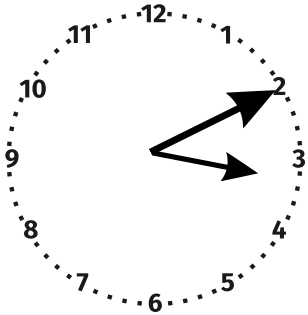
.....
.....



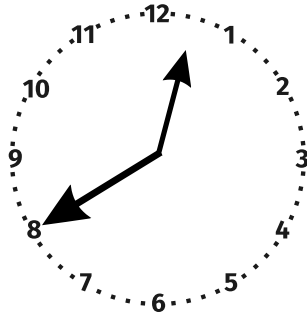
.....
.....




.....
.....



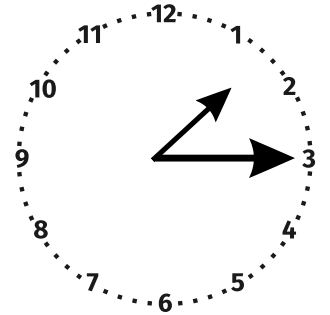
.....
.....



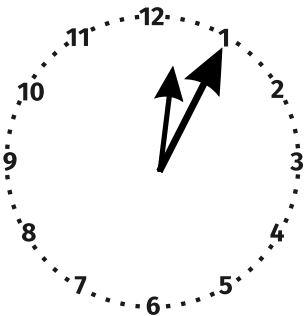
.....
.....




.....
.....



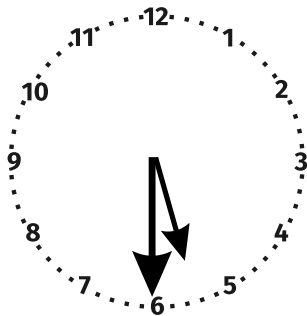
.....
.....



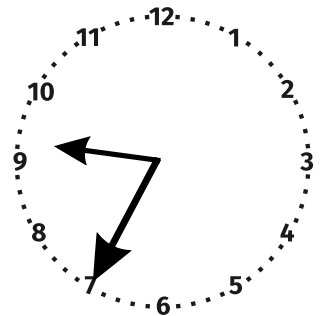
.....
.....



.....
.....



.....
.....



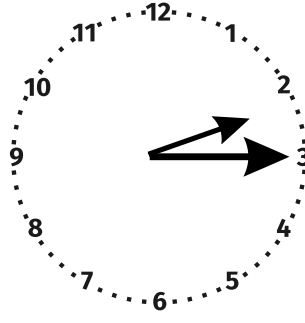
.....
.....



- Aşağıda verilen saatlere göre istenilenleri yazalım.

Öğleden Önce

.....

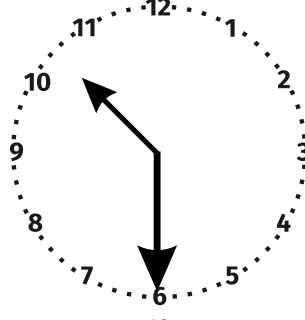


Öğleden Sonra

.....

Öğleden Önce

.....

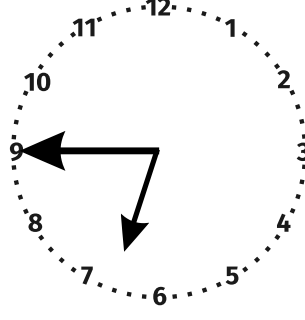


Öğleden Sonra

.....

Öğleden Önce

.....

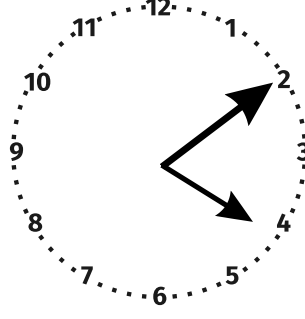


Öğleden Sonra

.....

Öğleden Önce

.....

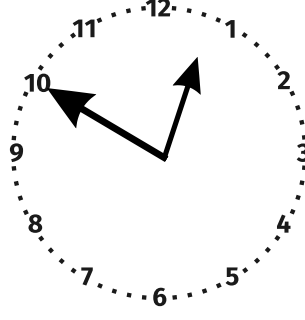


Öğleden Sonra

.....

Öğleden Önce

.....

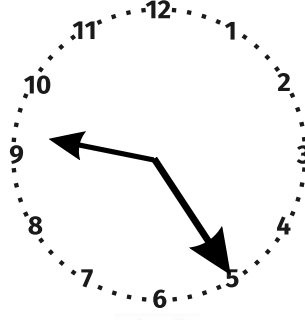


Öğleden Sonra

.....

Öğleden Önce

.....



Öğleden Sonra

.....



- Aşağıdaki dijital saatlerin okunuşlarını yanlarına yazalım.



.....



.....



.....



.....



.....



.....



.....



.....



.....




.....

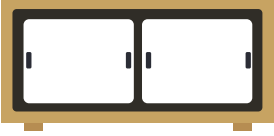
- Aşağıda okunuşları verilen saatleri dijital saatlerin içine rakamlarla yazalım.



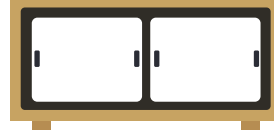
Beşi yirmi geçiyor.



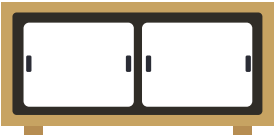
Üçü yirmi beş geçiyor.



On iki buçuk.



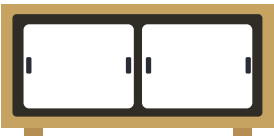
On ikiye beş var.



Dokuza on var.



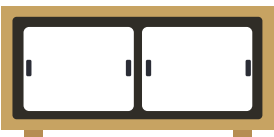
Bire çeyrek var.



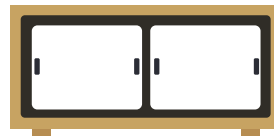
On biri çeyrek geçiyor.




Altıya yirmi beş var.



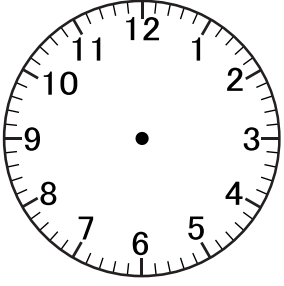
Altıya çeyrek var.



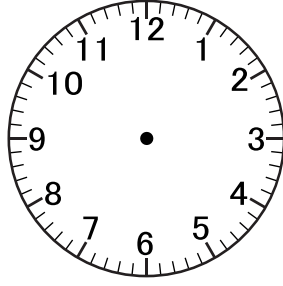
Sekizi beş geçiyor.



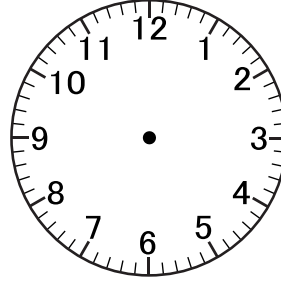
- Aşağıda belirtilen saatleri çizelim.



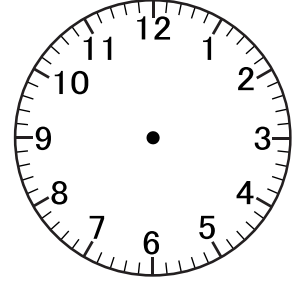
Dokuza çeyrek var.



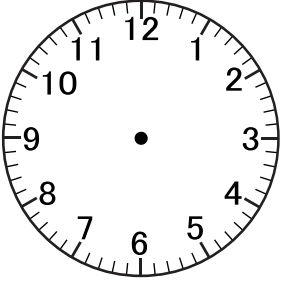
Onu beş geçiyor.



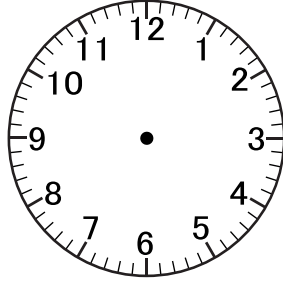
Biri yirmi beş geçiyor.



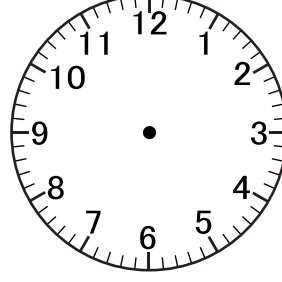
Dört buçuk.



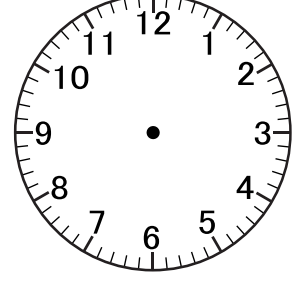
Altıya on var.



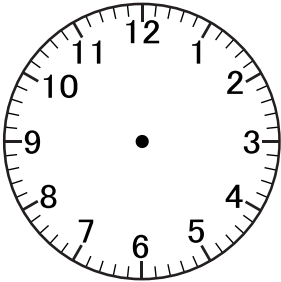
Sekize yirmi beş var.



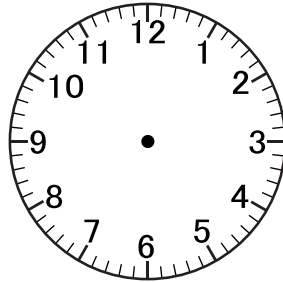
On biri on geçiyor.



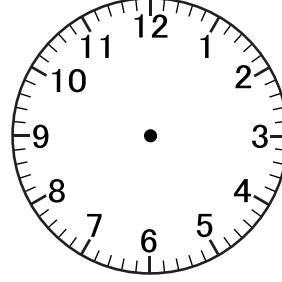
Beşe beş var.



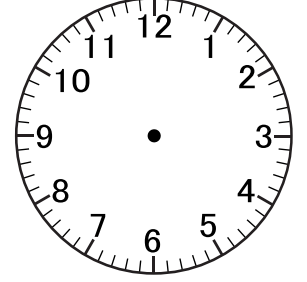
Üçü çeyrek geçiyor.



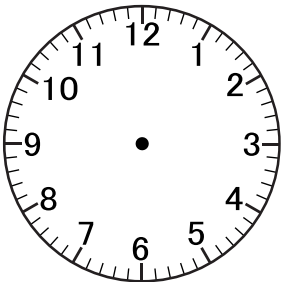
İkiyi yirmi geçiyor.



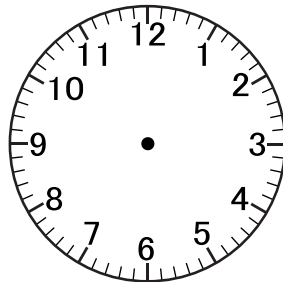
İkiye yirmi var.



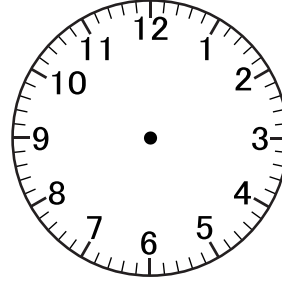
Yediye çeyrek var.



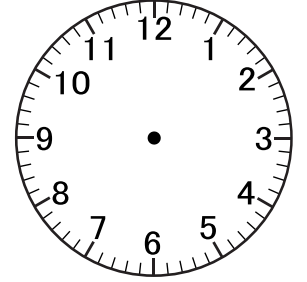
On iki buçuk.



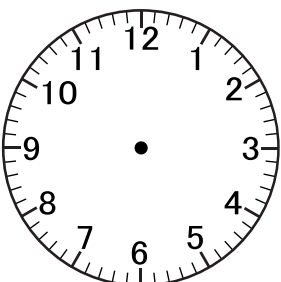
Altıya beş var.



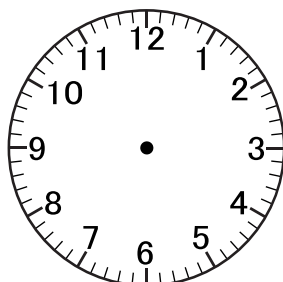
Dördü on geçiyor.



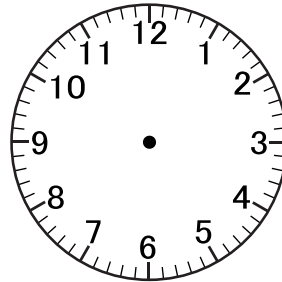
On ikiye çeyrek var.



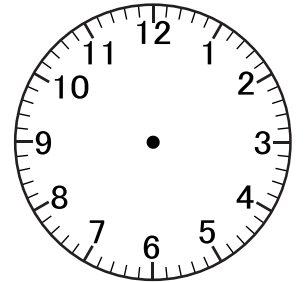
İkiyi yirmi beş geçiyor.



Yediye yirmi beş geçiyor.



Bire beş var.



Dokuza yirmi beş var.

