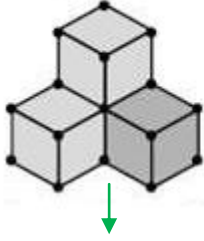
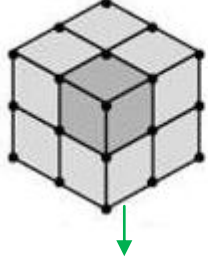




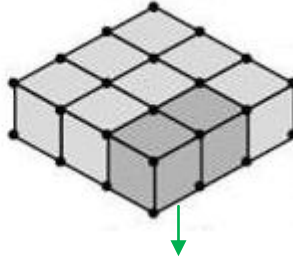
Yapılarda kullanılan eş küp sayılarını örnekteki gibi yazınız.



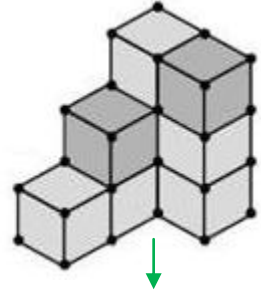
4 küp



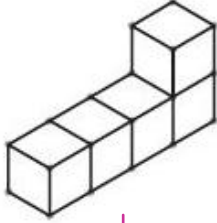
..... küp



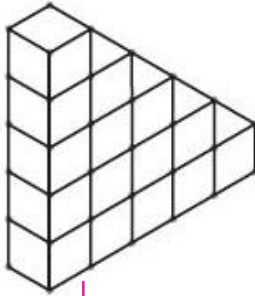
..... küp



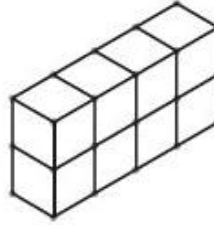
..... küp



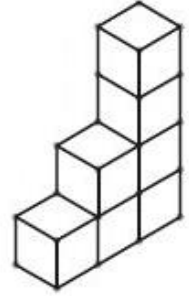
..... küp



..... küp



..... küp



..... küp



Verilen yapının aynısını yan tarafa çizerek oluşturunuz.

