

Adı :
Soyadı:

4. Sınıf
Matematik

Geometrik Şekiller-5
Birim Küp-2

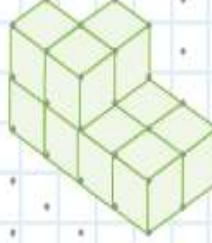
Aşağıdaki görsellerde kaç tane birim küp olduğunu yazınız?



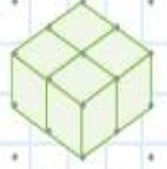
.... birim küp



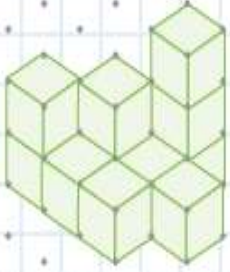
.... birim küp



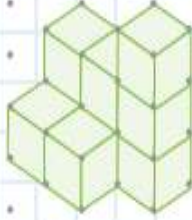
.... birim küp



.... birim küp



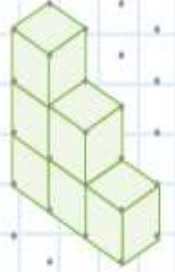
.... birim küp



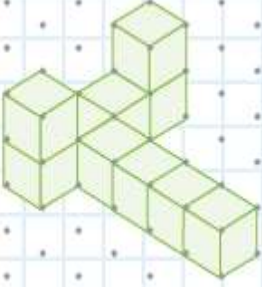
.... birim küp



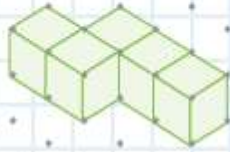
.... birim küp



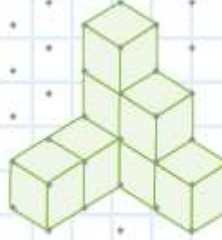
.... birim küp



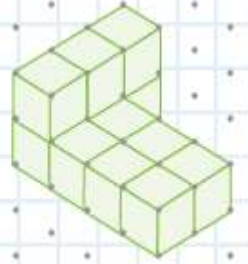
.... birim küp



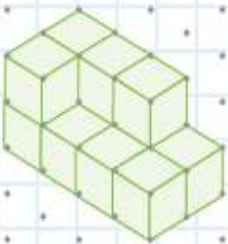
.... birim küp



.... birim küp



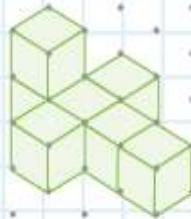
.... birim küp



.... birim küp



.... birim küp



.... birim küp



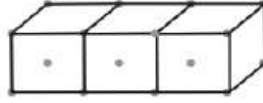
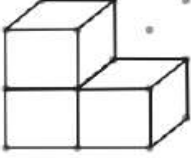
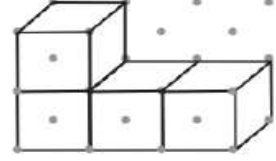
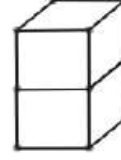
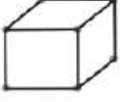
.... birim küp

Adı :
Soyadı:

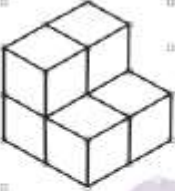
4. Sınıf
Matematik

Geometrik Şekiller-5
Birim Küp-2

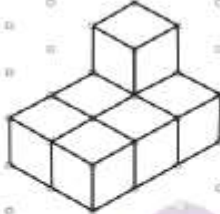
Aşağıdaki verilen birim küplerden oluşan yapıların aynısını uygun bölgeye çizelim.



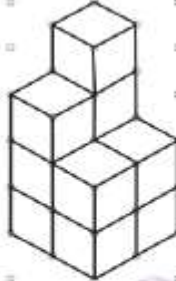
Aşağıdaki verilen görsellerde kaç tane birim küp olduğunu yazalım.



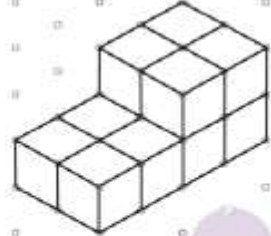
.....



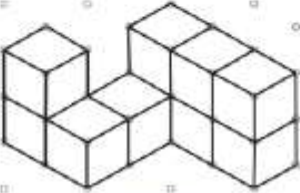
.....




.....



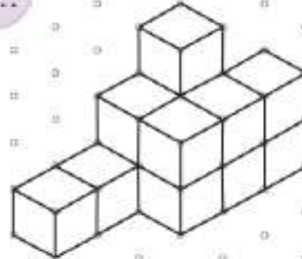
.....



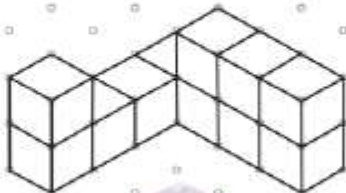
.....



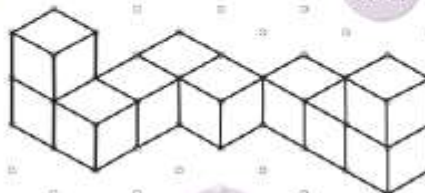
.....



.....



.....



.....