

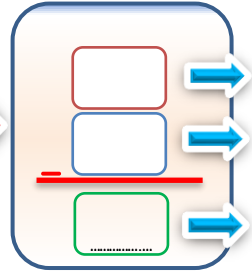
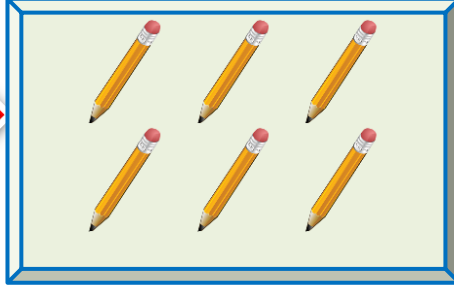
Adı :
Soyadı:

1. Sınıf
Matematik

Çıkarma İşlemi
Problem Giriş-3

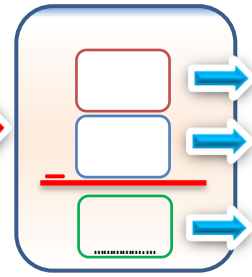

Çıkarma işlemlerini örneğe göre yapınız.

6 tane kalemin 3
eksiği kaçtır?



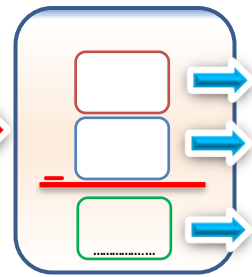

hepsi
eksiği
kaldı

8 tane ekmeğin 4
eksiği kaçtır?



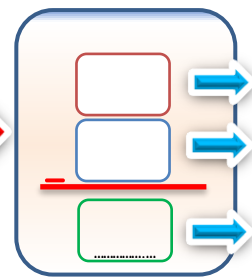

.....
.....
.....

9 tane ağacın 6
eksiği kaçtır?



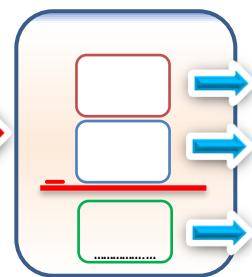
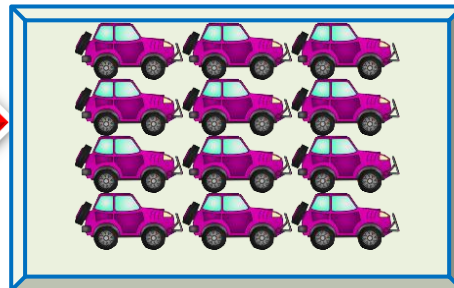
.....
.....
.....

15 tane incirin 9
eksiği kaçtır?



.....
.....
.....

12 tane arabanın 7
eksiği kaçtır?




.....
.....
.....

Adı :
Soyadı:


1. Sınıf
Matematik

Çıkarma İşlemi
Problem Giriş-3




4 tane
azaldı.

Kaç tane kaldı?




7 tane
eksildi.

Kaç tane kaldı?




9 tane
eksildi.

Kaç tane kaldı?




11 tane
azaldı.

Kaç tane kaldı?



7 tane
eksildi.

Kaç tane kaldı?



4 tane
azaldı.

Kaç tane kaldı?