



BÜTÜN - YARIM - ÇEYREK

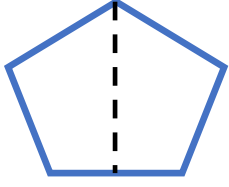


Bütün: Bir varlığın kendisine **bütün** denir.

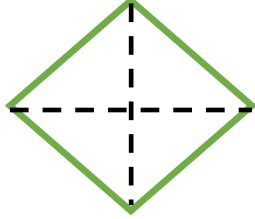
Yarım: Bütünün iki eş parçasından her birine **yarım** denir.

Çeyrek: Bütünün dört eş parçasından her birine **çeyrek** denir.


1-) Aşağıda verilen şekillerin istenen parçalarını boyayalım.



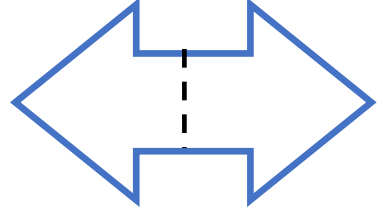
yarım



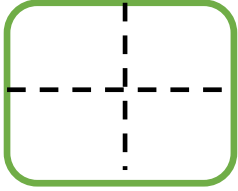
çeyrek



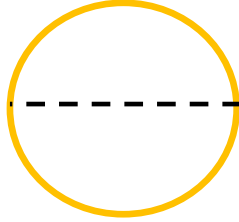
bütün



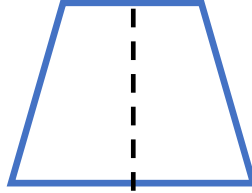
yarım



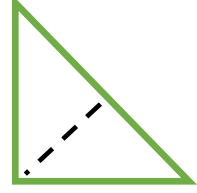
çeyrek



bütün





yarım



bütün

2-) Aşağıda verilmiş olan nesnelere bakarak **bütün** , **yarım** , **çeyrek** şeklinde eşleştirin.


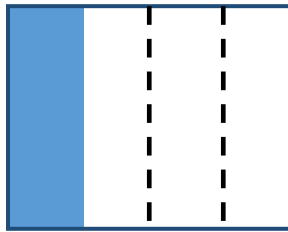



yarım

çeyrek

bütün

3-) Aşağıdaki şekillerin boyanan kadarını bütün, yarım, çeyrek şeklinde ismini altına yazınız.



.....

.....

.....


.....



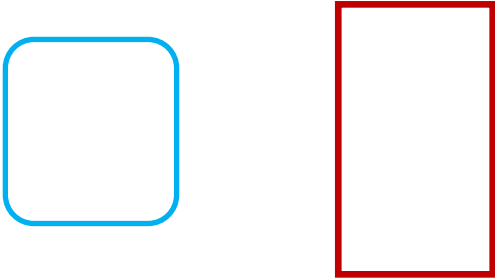
BÜTÜN- YARIM- ÇEYREK 2




1-) Aşağıdaki şekillerin **yarısını** boyayalım.




2-) Aşağıda verilen nesnelere **çeyreğini çizip** boyayalım.



3-) Aşağıdakilerden hangisi **ÇEYREKTİR ?**



4-) Aşağıdakilerden hangisi **yarımı** gösterir?



6-) Yarım olan varlıkların altlarındaki kutucuğu **yeşile**, bütün olan varlıkların altlarındaki kutucuğu **kırmızıya** boyayalım.

