

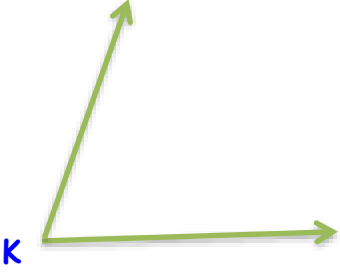
Adı : .....

Soyadı: .....

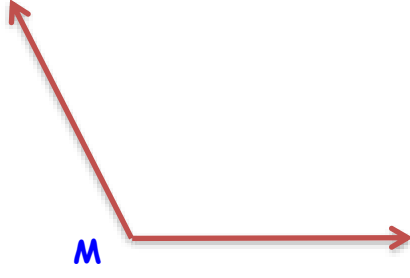
4. Sınıf  
Matematik

Geometride Temel  
Kavramlar-3

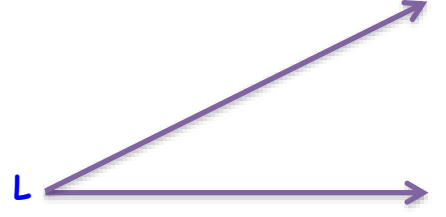
Verilen açları iletki yardımıyla ölçünüz ve derecesini yazınız.



$s(\widehat{K}) = \dots\dots\dots$



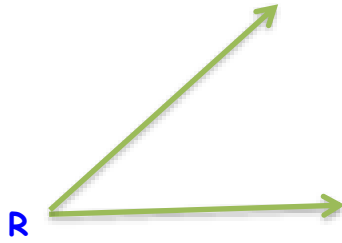
.....



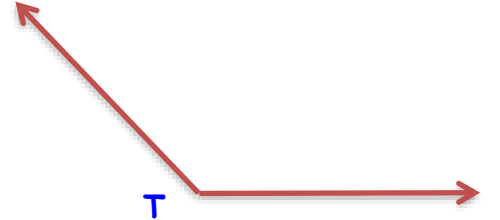
.....




.....




.....



.....



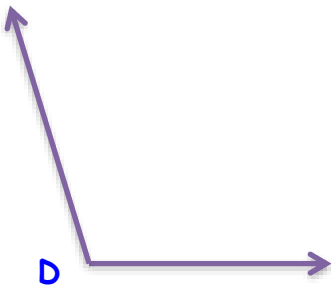
.....




.....



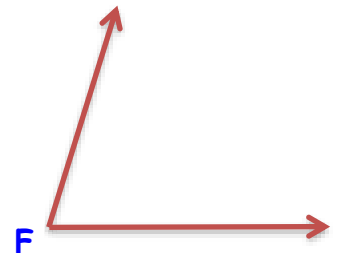
.....



.....



.....



.....

Adı : .....

Soyadı: .....

4. Sınıf  
Matematik

Geometride Temel  
Kavramlar-3

Verilen açları iletki yardımıyla ölçünüz ve derecesini yazınız.

