

Adı : .....  
Soyadı: .....

4. Sınıf  
Matematik

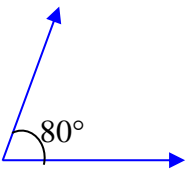
Geometride Temel  
Kavramlar-5

Ölçüsü  $90^\circ$  'den küçük açılara **dar açı** denir.  
Ölçüsü  $90^\circ$  'den büyük açılara **geniş açı** denir.  
Ölçüsü tam  $90^\circ$  olan açılara **dik açı** denir.  
Ölçüsü  $180^\circ$  olan açılara **doğru açı** denir.

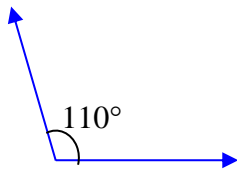
Aşağıdaki tabloyu doldurunuz.

$45^\circ$	$90^\circ$ 'den küçük olduğu için	dar açıdır.
$120^\circ$	$90^\circ$ 'den büyük olduğu için	geniş açıdır.
$125^\circ$	.....olduğu için	.....açıdır.
$90^\circ$	.....olduğu için	.....açıdır.
$180^\circ$	.....olduğu için	.....açıdır.
$96^\circ$	.....olduğu için	.....açıdır.
$17^\circ$	.....olduğu için	.....açıdır.
$39^\circ$	.....olduğu için	.....açıdır.
$85^\circ$	.....olduğu için	.....açıdır.
$110^\circ$	.....olduğu için	.....açıdır.
$50^\circ$	.....olduğu için	.....açıdır.
$120^\circ$	.....olduğu için	.....açıdır.

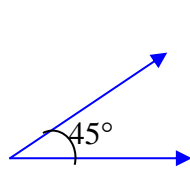
Verilen açılarının türlerini yazınız.



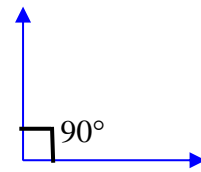
.....



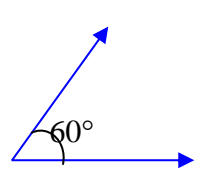
.....



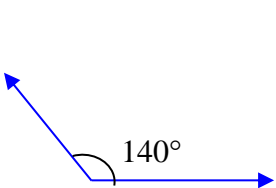
.....



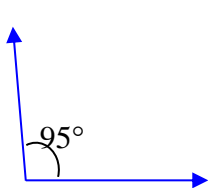
.....



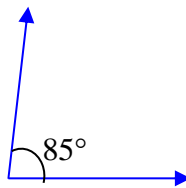
.....



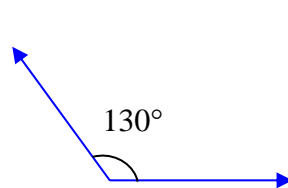
.....



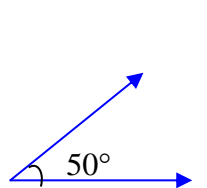
.....



.....



.....



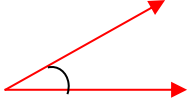
.....

Adı : .....  
Soyadı : .....

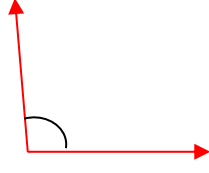
4. Sınıf  
Matematik

Geometride Temel  
Kavramlar-5

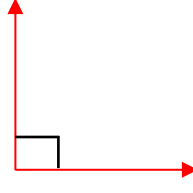
Verilen açılarının ölçülerini tahmin ederek türlerini yazınız.



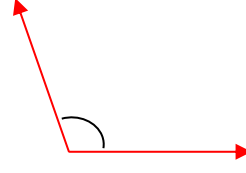
.....



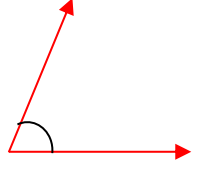
.....



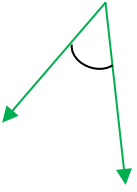
.....



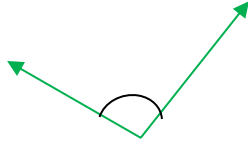
.....



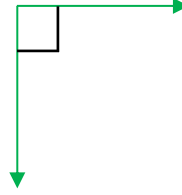
.....



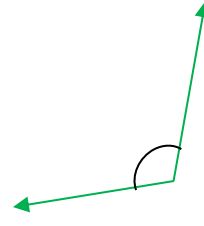
.....



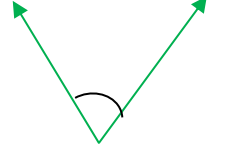
.....



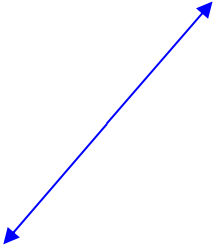
.....



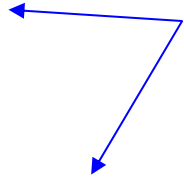
.....



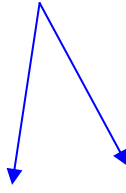
.....



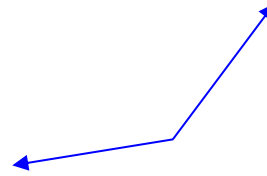
.....



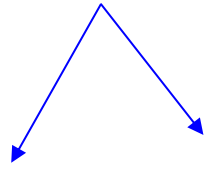
.....



.....




.....

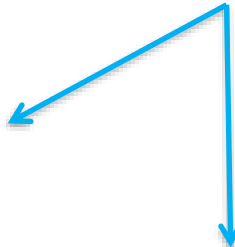


.....


Verilen açılara isimlendiriniz. İletki ile derecesini ölçünüz. Ölçüsünü ve türünü yazınız.



.....  
.....



.....  
.....



.....  
.....