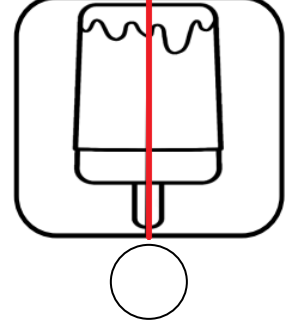
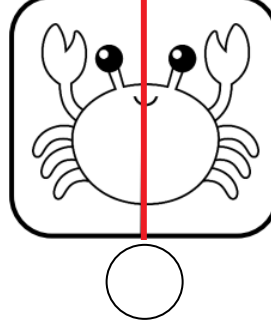
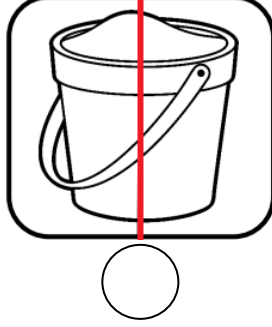
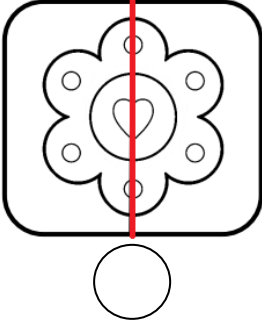



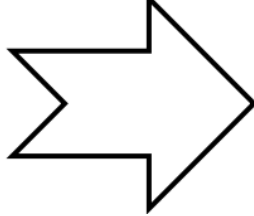
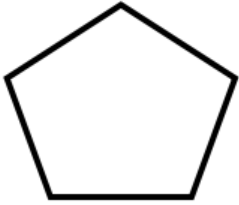




Aşağıdaki simetrik şekillere **gülen** yüz, simetrik olmayanlara **üzgün** yüz çiziniz.



Aşağıda verilen şekillerin **simetri doğrularını** çiziniz.



Doğrulara göre verilen şekillerin **simetrilerini** çiziniz.

