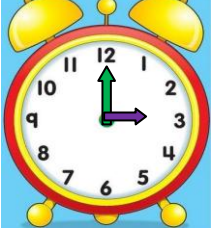



## TAM YARIM ÇEYREK SAATLERİN OKUNUŞU VE GÖSTERİLİŞİ 4

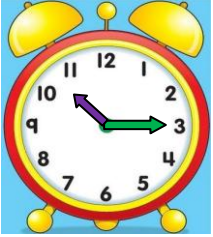
- Aşağıda verilen saatlerin öğleden önce kaçı gösterdiklerini okunuşlarını yazınız.



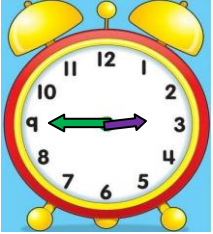
Okunuşu:



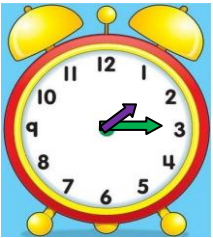
Okunuşu:



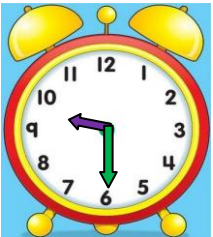
Okunuşu:



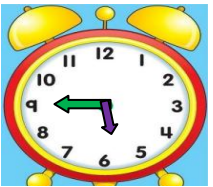
Okunuşu:



Okunuşu:

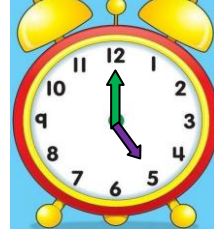


Okunuşu:

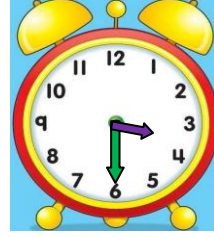


Okunuşu:

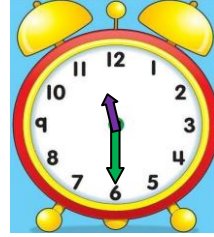
- Aşağıda verilen saatlerin öğleden sonra kaçı gösterdiklerini okunuşlarını yazınız.



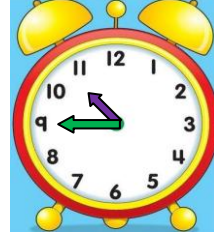
Okunuşu:



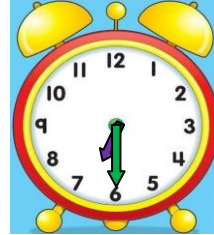
Okunuşu:



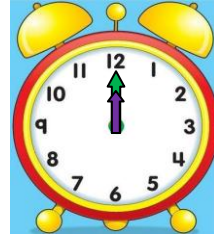
Okunuşu:



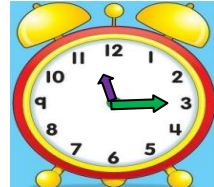
Okunuşu:



Okunuşu:



Okunuşu:



Okunuşu: