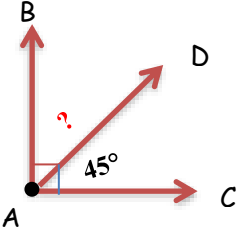


Adı :
Soyadı :

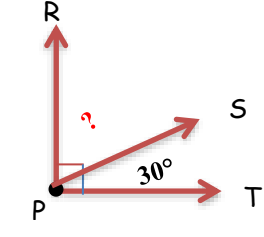
4. Sınıf
Matematik

Geometride Temel
Kavramlar-6

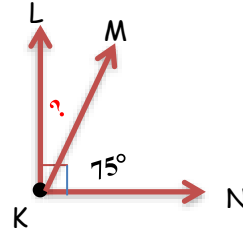
Aşağıdaki dik açılarda verilmeyen açıları yazınız. (90° 'ye tamamlayınız.)



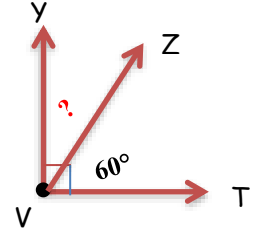
$s(\widehat{CAD}) = 45^\circ$
 $s(\widehat{BAD}) = ?$



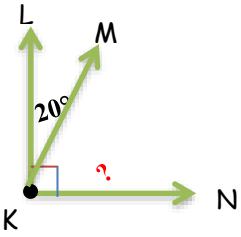
.....
.....



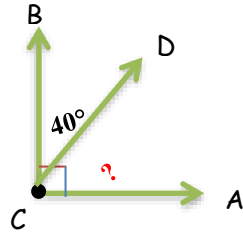
.....
.....



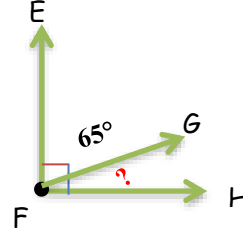
.....
.....



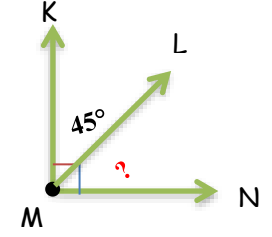
.....
.....



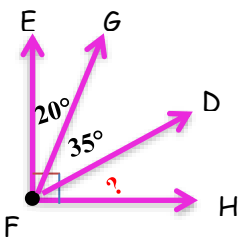
.....
.....



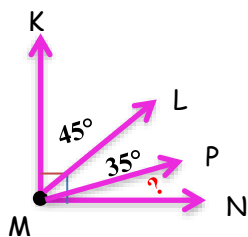
.....
.....



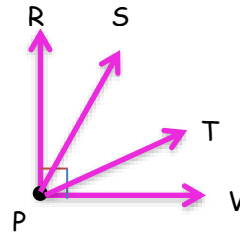
.....
.....



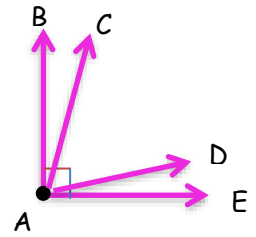
.....
.....
.....



.....
.....
.....



$S(\widehat{VPT}) = 26^\circ$
 $S(\widehat{TPS}) = 36^\circ$
 $S(\widehat{RPS}) = ?^\circ$



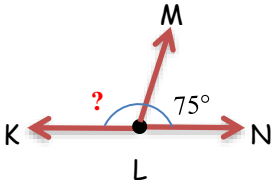
$S(\widehat{BAC}) = 15^\circ$
 $S(\widehat{DAE}) = 18^\circ$
 $S(\widehat{CAD}) = ?^\circ$

Adı :
Soyadı :

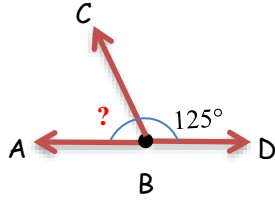
4. Sınıf
Matematik

Geometride Temel
Kavramlar-6

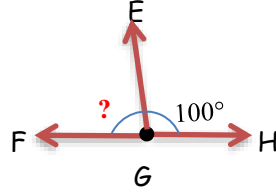
Aşağıdaki doğru açılarda verilmeyen açıları yazınız. (180° 'ye tamamlayınız.)



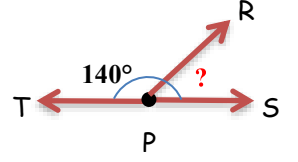
.....
.....



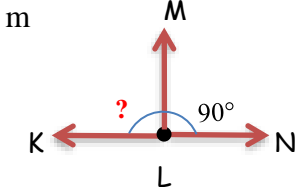
.....
.....



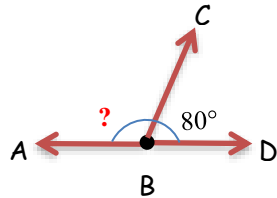
.....
.....n.....



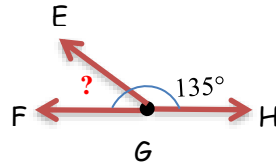
.....
.....



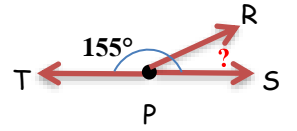
.....
.....



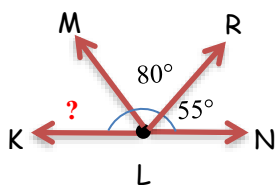
.....
.....



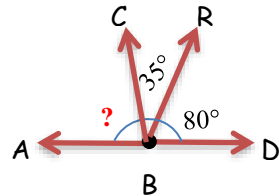
.....
.....



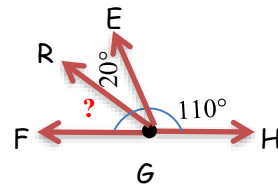
.....
.....



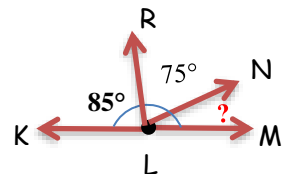
.....
.....
.....



.....
.....
.....

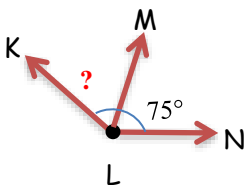


.....
.....
.....

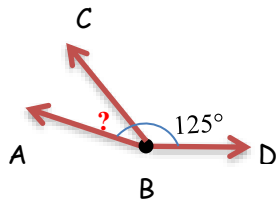


.....
.....
.....

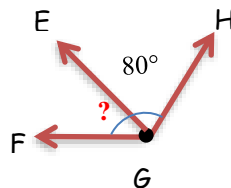
Verilmeyen açıların derecelerini yazınız.



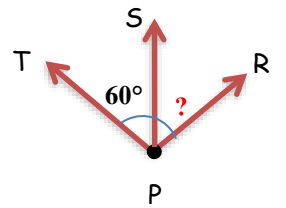
$$\begin{aligned} S(\widehat{KLN}) &= 145^\circ \\ S(\widehat{NLM}) &= 75^\circ \\ S(\widehat{KLM}) &= \dots^\circ \end{aligned}$$



$$\begin{aligned} S(\widehat{ABD}) &= 155^\circ \\ S(\widehat{CBD}) &= 125^\circ \\ S(\widehat{ABC}) &= \dots^\circ \end{aligned}$$



$$\begin{aligned} S(\widehat{FGH}) &= 135^\circ \\ S(\widehat{EGH}) &= 80^\circ \\ S(\widehat{FGE}) &= \dots^\circ \end{aligned}$$



$$\begin{aligned} S(\widehat{TPR}) &= 115^\circ \\ S(\widehat{TPS}) &= 60^\circ \\ S(\widehat{SPR}) &= \dots^\circ \end{aligned}$$