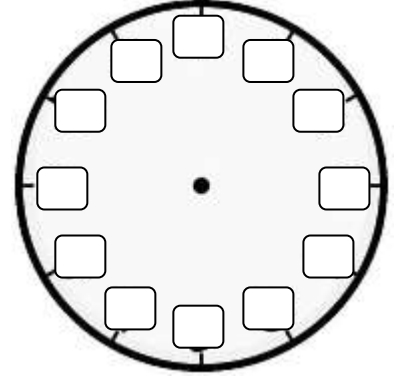
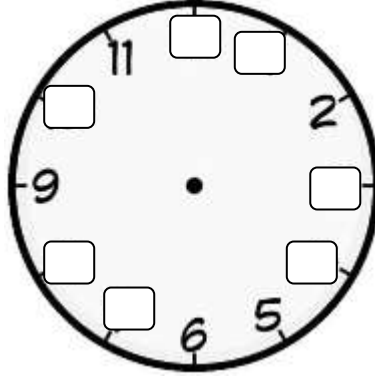
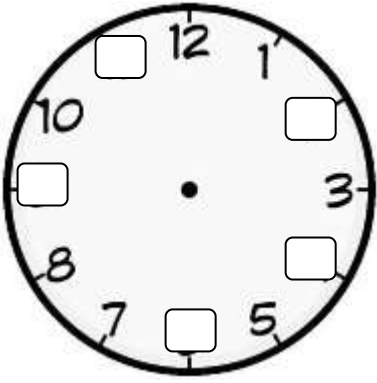


ZAMANI ÖLÇME

1.Etkinlik : Aşağıdaki saatte verilmeyen sayıları yazalım.



2.Etkinlik : Aşağıdaki saatlerin gösterdiği zamanı okuyup altına yazalım.



.....



.....



.....



.....



.....



.....



.....



.....

3.Etkinlik : Verilen olaylarla uygun saatleri eşleyelim.

3. Sabah uyanma saati

1. Okula giriş saati

2. Öğle yemeği saati

5. Okuldan çıkış saati

6. Akşam yemeği saati

4. Yatıp uyuma saati


.....



.....



.....



.....



.....



.....





ZAMANI ÖLÇME

☆ Aşağıdaki saatlerin gösterdiği zamanı okuyup altına yazalım.



Saat 5



.....



.....



.....



.....



.....



.....



.....



.....



.....



.....



.....



ZAMANI ÖLÇME

☆ Aşağıdaki saatlerin gösterdiği zamanı okuyup altına yazalım.



Saat 4 buçuk

.....

.....



.....

.....

.....



.....

.....

.....



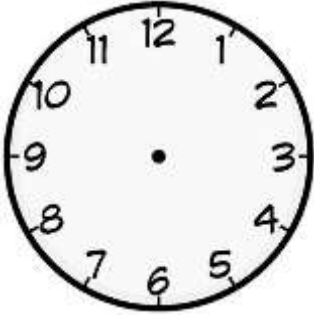
.....

.....

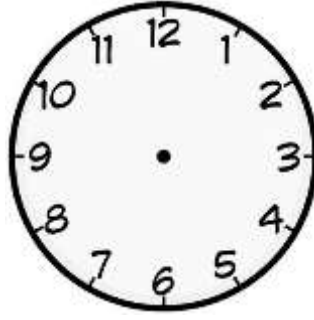
.....

ZAMANI ÖLÇME

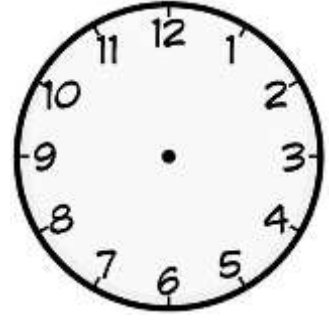
☆ Aşağıda verilen saatlerin verilen zamana uygun olarak akrep ve yelkovanlarını çizelim.



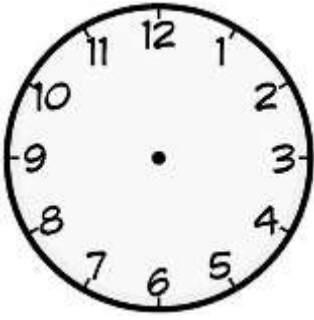
Saat 2



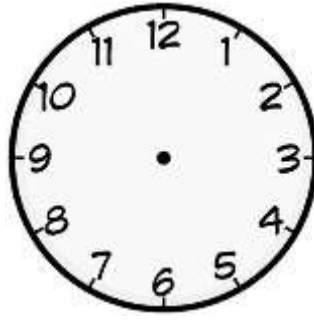
Saat 4



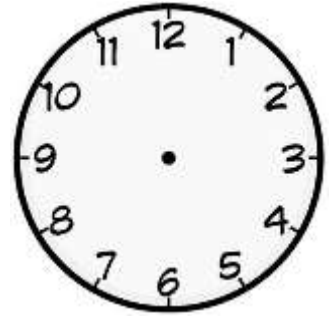
Saat 9



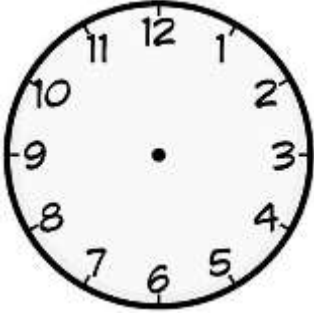
Saat 3



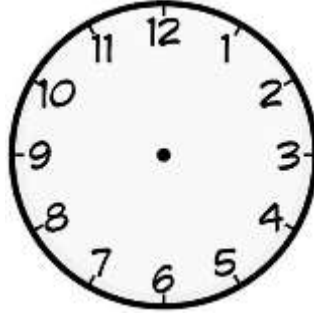
Saat 1 buçuk



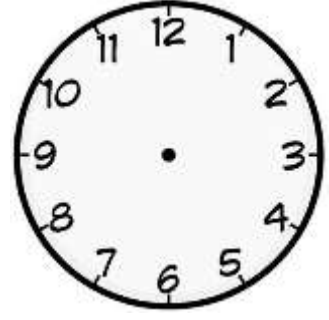
Saat 4 buçuk



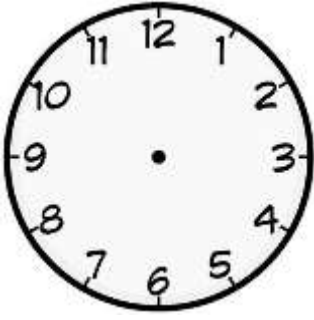
Saat 9 buçuk



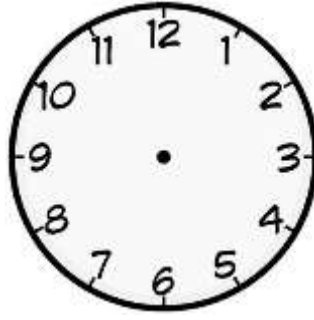
Saat 12 buçuk



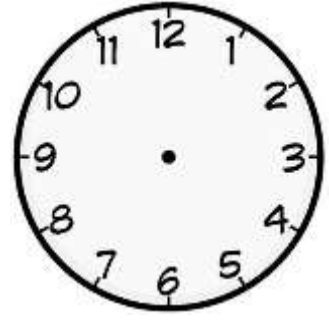
Saat 5 buçuk



Saat 7 buçuk



Saat 11



Saat 6